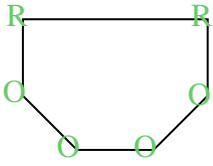


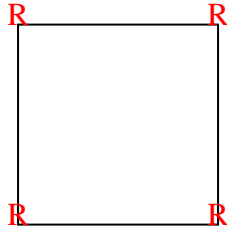


Conta il numero di angoli "acuti", "ottusi" e "retti" in ogni forma.

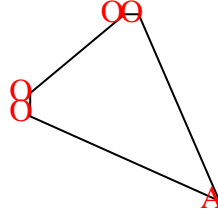
Es)



1)



2)



Risposte

A O R

Es. 0 4 2

1. 0 0 4

2. 1 4 0

3. 2 2 0

4. 0 0 4

5. 0 8 0

6. 1 1 2

7. 0 7 0

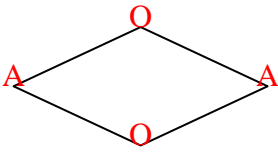
8. 0 6 0

9. 1 2 1


10. 0 4 1

11. 2 2 0

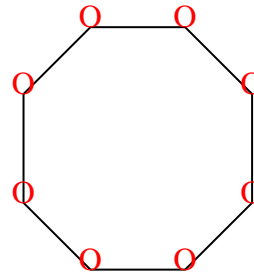
3)



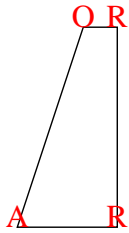
4)



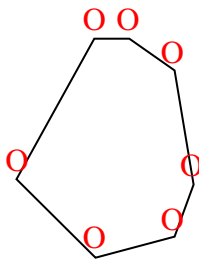
5)



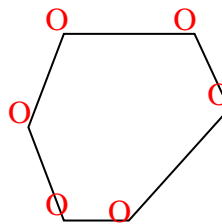
6)



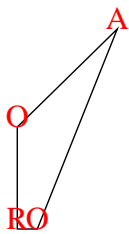
7)



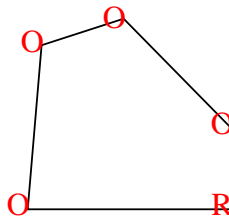
8)



9)



10)



11)

