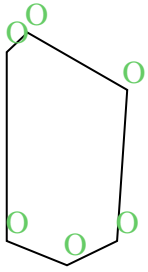


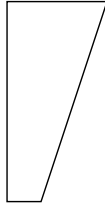


Conta il numero di angoli "acuti", "ottusi" e "retti" in ogni forma.

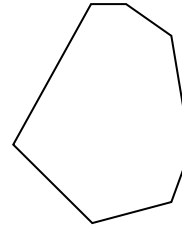
Es)



1)



2)



Risposte

A O R

Es. 0 6 0

1. _____

2. _____

3. _____

4. _____

5. _____

6. _____

7. _____

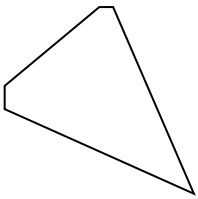
8. _____

9. _____

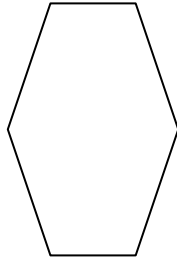
10. _____

11. _____


3)



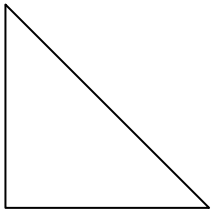
4)



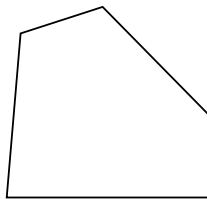
5)



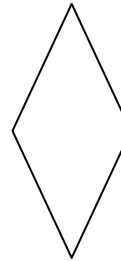
6)



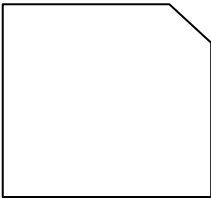
7)



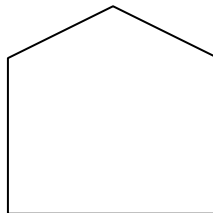
8)



9)



10)



11)

