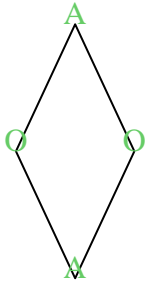


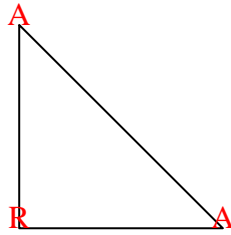


Conta il numero di angoli "acuti", "ottusi" e "retti" in ogni forma.

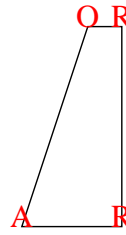
Es)



1)



2)



Risposte

A O R

Es. 2 2 0

1. 2 0 1

2. 1 1 2

3. 0 0 4

4. 0 6 0

5. 2 2 0

6. 1 4 0

7. 0 4 2

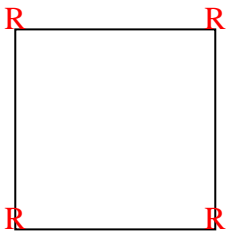
8. 0 2 3

9. 3 0 0

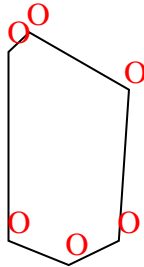
10. 1 2 1

11. 0 4 1

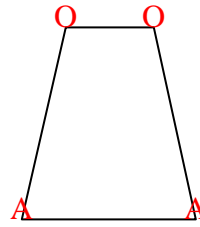
3)



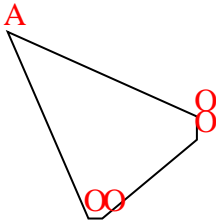
4)



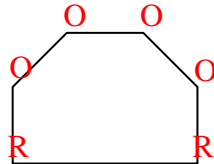
5)



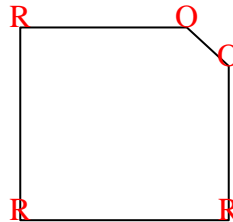
6)



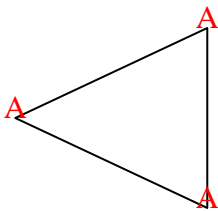
7)



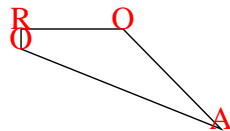
8)



9)



10)



11)

