



Determina se l'angolo mostrato è acuto, ottuso, retto, o piatto.

**Risposte**

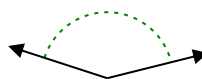
Es)



1)



2)



Es.

**ottuso**

1.

2.

3.

4.

5.

6.

7.

8.

9.

10.

11.

12.

13.

14.

15.

16.

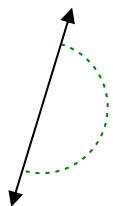
17.

18.

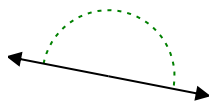
19.

20.

3)



4)



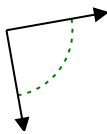
5)



6)



7)



8)



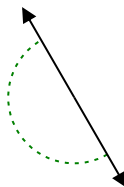
9)



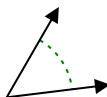
10)



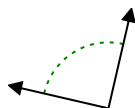
11)



12)



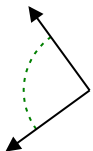
13)



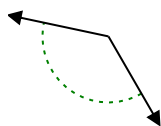
14)



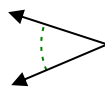
15)



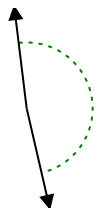
16)



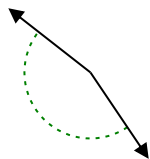
17)



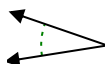
18)



19)



20)

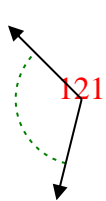




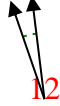
Determina se l'angolo mostrato è acuto, ottuso, retto, o piatto.

**Risposte**

Es)



1)



2)



Es. **ottuso**

1. **acuto**

2. **ottuso**

3. **piatto**

4. **piatto**

5. **acuto**

6. **retto**

7. **retto**

8. **ottuso**

9. **acuto**

10. **acuto**

11. **piatto**

12. **acuto**

13. **retto**

14. **ottuso**

15. **retto**

16. **ottuso**

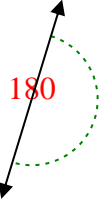
17. **acuto**

18. **ottuso**

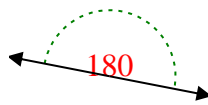
19. **ottuso**

20. **acuto**

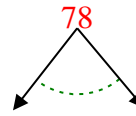
3)



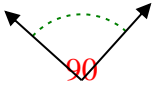
4)



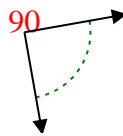
5)



6)



7)



8)



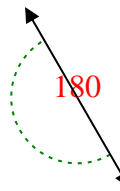
9)



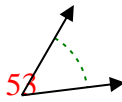
10)



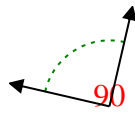
11)



12)



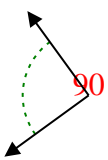
13)



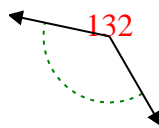
14)



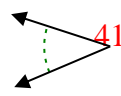
15)



16)



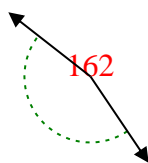
17)



18)



19)



20)

