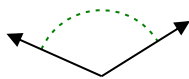




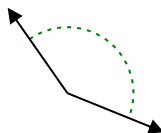
Determina se l'angolo mostrato è acuto, ottuso, retto, o piatto.

Risposte

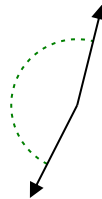
Es)



1)



2)



Es.

ottuso

1.

2.

3.

4.

5.

6.

7.

8.

9.

10.

11.

12.

13.

14.

15.

16.

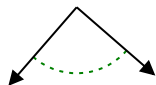
17.

18.

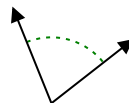
19.

20.

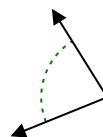
3)



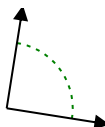
4)



5)



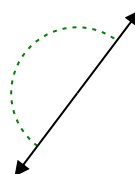
6)



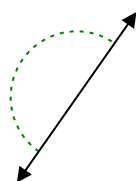
7)



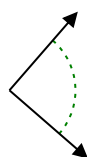
8)



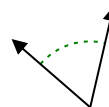
9)



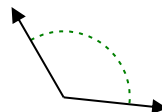
10)



11)



12)



13)



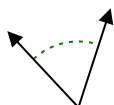
14)



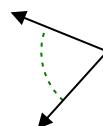
15)



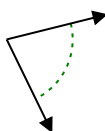
16)



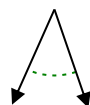
17)



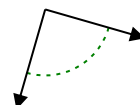
18)



19)



20)





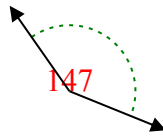
Determina se l'angolo mostrato è acuto, ottuso, retto, o piatto.

Risposte

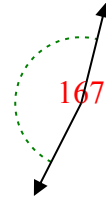
Es)



1)



2)



Es.

ottuso

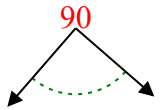
1.

ottuso

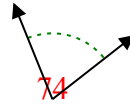
2.

ottuso

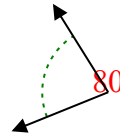
3)



4)



5)



3.

retto

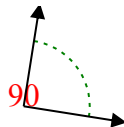
4.

acuto

5.

acuto

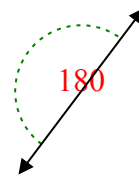
6)



7)



8)



6.

retto

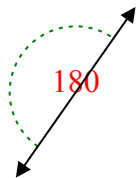
7.

ottuso

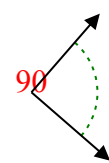
8.

piatto

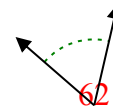
9)



10)



11)



9.

piatto

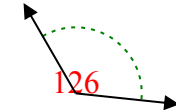
10.

retto

11.

acuto

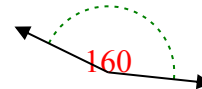
12)



13)



14)



12.

ottuso

13.

piatto

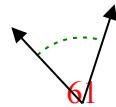
14.

ottuso

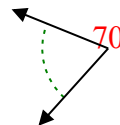
15)



16)



17)



15.

ottuso

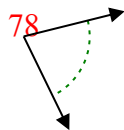
16.

acuto

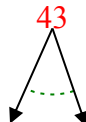
17.

acuto

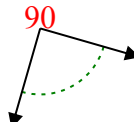
18)



19)



20)



18.

acuto

19.

acuto

20.

retto