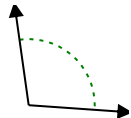




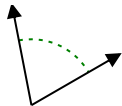
Determina se l'angolo mostrato è acuto, ottuso, retto, o piatto.

Risposte

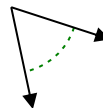
Es)



1)



2)



Es.

ottuso

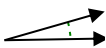
1.

2.

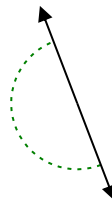
3)



4)



5)

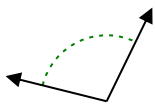


3.

4.

5.

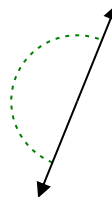
6)



7)



8)

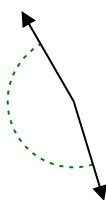


6.

7.

8.

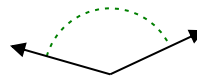
9)



10)



11)

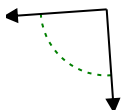


9.

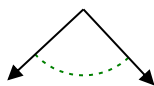
10.

11.

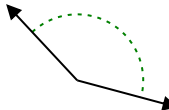
12)



13)



14)

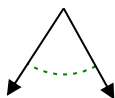


12.

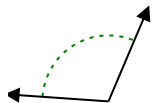
13.

14.

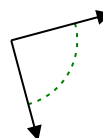
15)



16)



17)

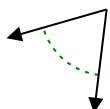


15.

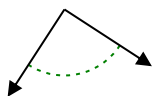
16.

17.

18)



19)



20)



18.

19.

20.



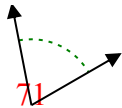
Determina se l'angolo mostrato è acuto, ottuso, retto, o piatto.

Risposte

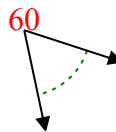
Es)



1)



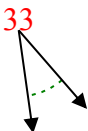
2)



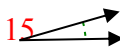
Es.

ottuso

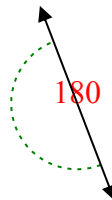
3)



4)



5)



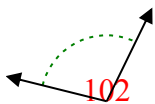
1.

acuto

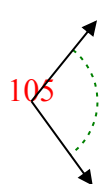
2.

acuto

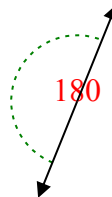
6)



7)



8)



3.

acuto

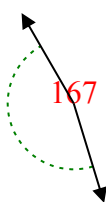
4.

acuto

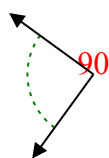
5.

piatto

9)



10)



11)



6.

ottuso

7.

ottuso

8.

piatto

9.

ottuso

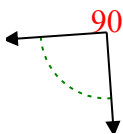
10.

retto

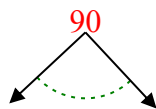
11.

ottuso

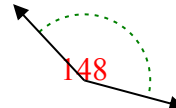
12)



13)



14)



12.

retto

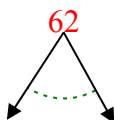
13.

retto

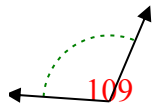
14.

ottuso

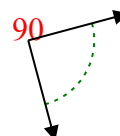
15)



16)



17)



15.

acuto

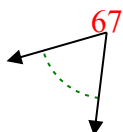
16.

ottuso

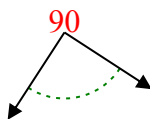
17.

retto

18)



19)



20)



18.

acuto

19.

retto

20.

acuto