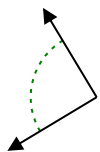




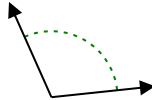
Determina se l'angolo mostrato è acuto, ottuso, retto, o piatto.

Risposte

Es)



1)



2)



Es.

retto

1.

2.

3.

4.

5.

6.

7.

8.

9.

10.

11.

12.

13.

14.

15.

16.

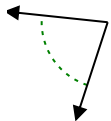
17.

18.

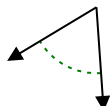
19.

20.

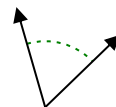
3)



4)



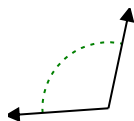
5)



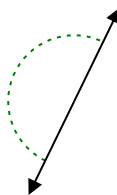
6)



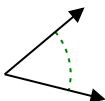
7)



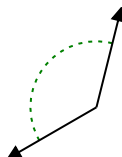
8)



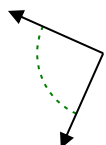
9)



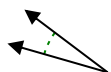
10)



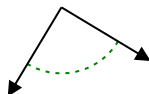
11)



12)



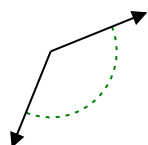
13)



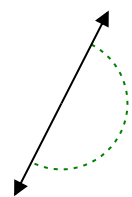
14)



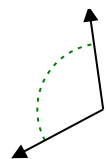
15)



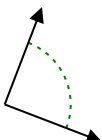
16)



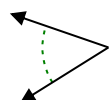
17)



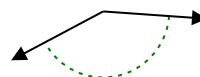
18)



19)



20)

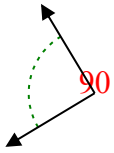




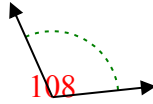
Determina se l'angolo mostrato è acuto, ottuso, retto, o piatto.

Risposte

Es)



1)



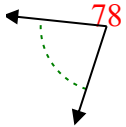
2)



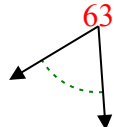
Es.

retto

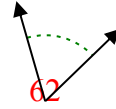
3)



4)



5)



1.

ottuso

2.

ottuso

3.

acuto

4.

acuto

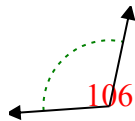
5.

acuto

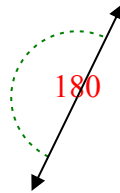
6)



7)



8)



6.

ottuso

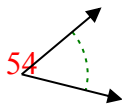
7.

ottuso

8.

piatto

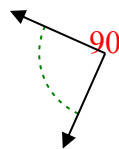
9)



10)



11)



9.

acuto

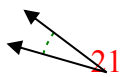
10.

ottuso

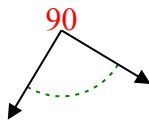
11.

retto

12)



13)



14)



12.

acuto

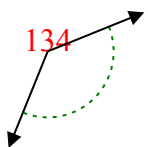
13.

retto

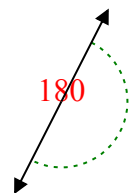
14.

acuto

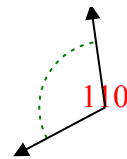
15)



16)



17)



15.

ottuso

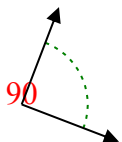
16.

piatto

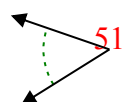
17.

ottuso

18)



19)



20)



18.

retto

19.

acuto

20.

ottuso