



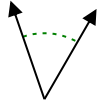
Determina se l'angolo mostrato è acuto, ottuso, retto, o piatto.

Risposte

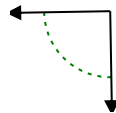
Es)



1)



2)

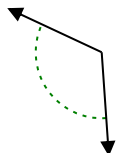


Es. retto

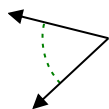
1. _____

2. _____

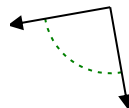
3)



4)



5)

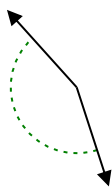


3. _____

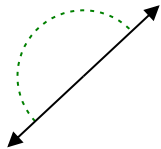
4. _____

5. _____

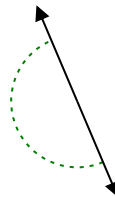
6)



7)



8)

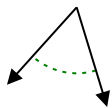


6. _____

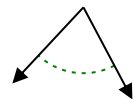
7. _____

8. _____

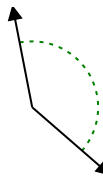
9)



10)



11)



9. _____

10. _____

11. _____

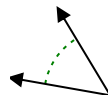
12)



13)



14)

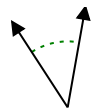


12. _____

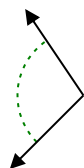
13. _____

14. _____

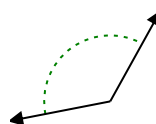
15)



16)



17)

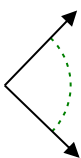


15. _____

16. _____

17. _____

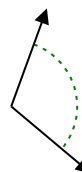
18)



19)



20)



18. _____

19. _____

20. _____



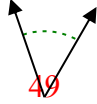
Determina se l'angolo mostrato è acuto, ottuso, retto, o piatto.

Risposte

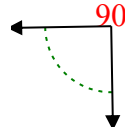
Es)



1)



2)



Es.

retto

1.

acuto

2.

retto

3.

ottuso

4.

acuto

5.

retto

6.

ottuso

7.

piatto

8.

piatto

9.

acuto

10.

acuto

11.

ottuso

12.

acuto

13.

retto

14.

acuto

15.

acuto

16.

ottuso

17.

ottuso

18.

retto

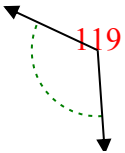
19.

ottuso

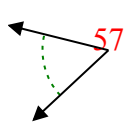
20.

ottuso

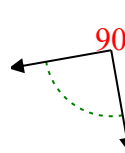
3)



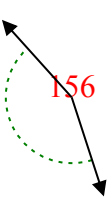
4)



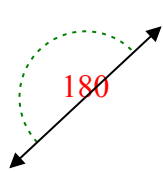
5)



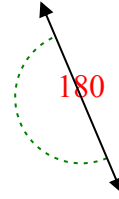
6)



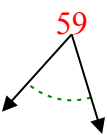
7)



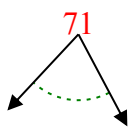
8)



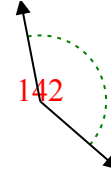
9)



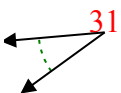
10)



11)



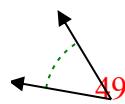
12)



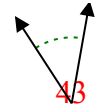
13)



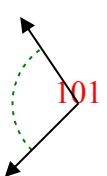
14)



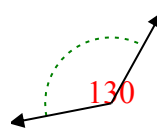
15)



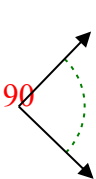
16)



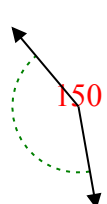
17)



18)



19)



20)

