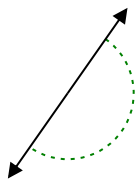




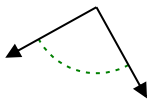
Determina se l'angolo mostrato è acuto, ottuso, retto, o piatto.

Risposte

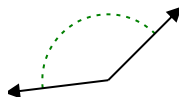
Es)



1)



2)

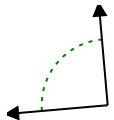


Es. piatto

1. _____

2. _____

3)



4)



5)

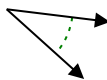


3. _____

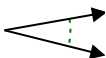
4. _____

5. _____

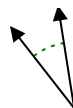
6)



7)



8)

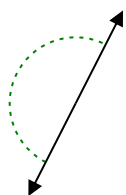


6. _____

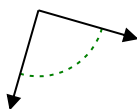
7. _____

8. _____

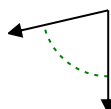
9)



10)



11)

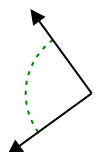


9. _____

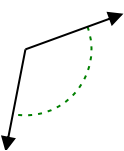
10. _____

11. _____

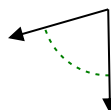
12)



13)



14)

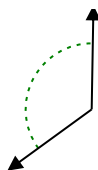


12. _____

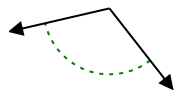
13. _____

14. _____

15)



16)



17)

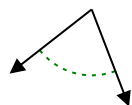


15. _____

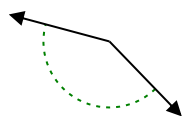
16. _____

17. _____

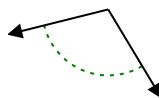
18)



19)



20)



18. _____

19. _____

20. _____



Determina se l'angolo mostrato è acuto, ottuso, retto, o piatto.

Risposte

Es) 1) 2) 3) 4) 5) 6) 7) 8) 9) 10) 11) 12) 13) 14) 15) 16) 17) 18) 19) 20)

- Es. piatto
 1. retto
 2. ottuso
 3. retto
 4. ottuso
 5. retto
 6. acuto
 7. acuto
 8. acuto
 9. piatto
 10. retto
 11. acuto
 12. retto
 13. ottuso
 14. acuto
 15. ottuso
 16. ottuso
 17. acuto
 18. acuto
 19. ottuso
 20. ottuso