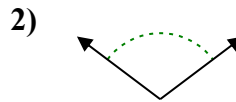
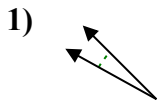
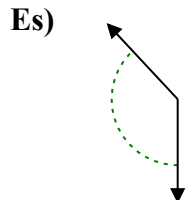




Determina se l'angolo mostrato è acuto, ottuso, retto, o piatto.

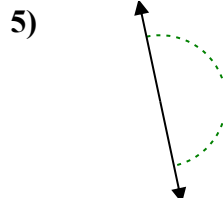
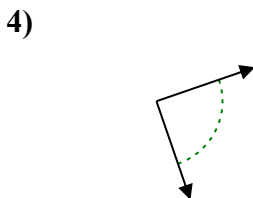
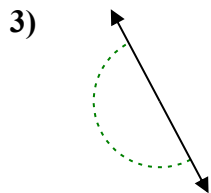
Risposte



Es. ottuso

1. _____

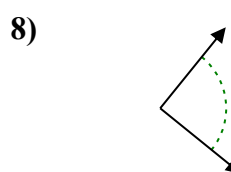
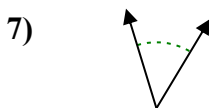
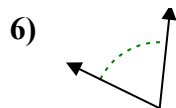
2. _____



3. _____

4. _____

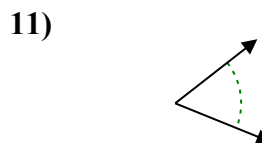
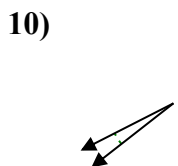
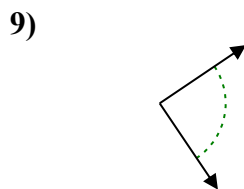
5. _____



6. _____

7. _____

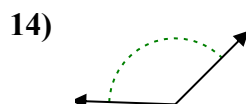
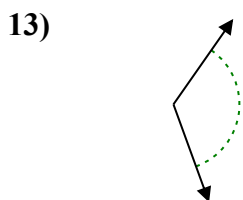
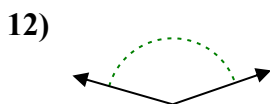
8. _____



9. _____

10. _____

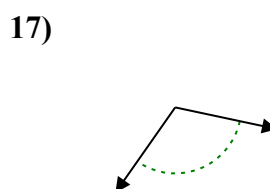
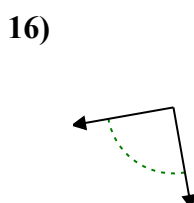
11. _____



12. _____

13. _____

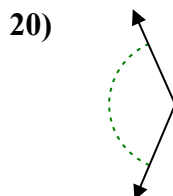
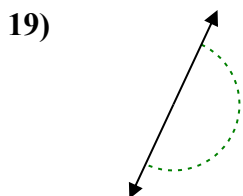
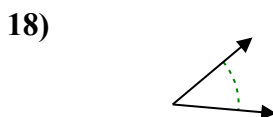
14. _____



15. _____

16. _____

17. _____



18. _____

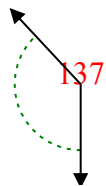
19. _____

20. _____

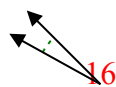


Determina se l'angolo mostrato è acuto, ottuso, retto, o piatto.

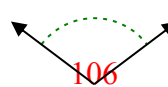
Es)



1)



2)



Risposte

Es. ottuso

1. acuto

2. ottuso

3. piatto

4. retto

5. piatto

6. acuto

7. acuto

8. retto

9. retto

10. acuto

11. acuto

12. ottuso

13. ottuso

14. ottuso

15. acuto

16. retto

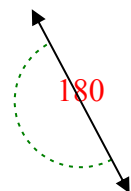
17. ottuso

18. acuto

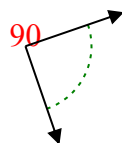
19. piatto

20. ottuso

3)



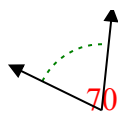
4)



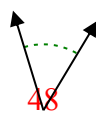
5)



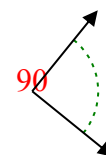
6)



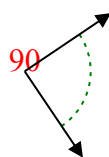
7)



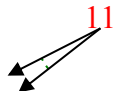
8)



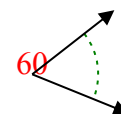
9)



10)



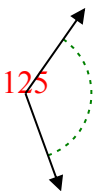
11)



12)



13)



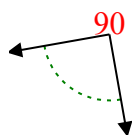
14)



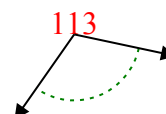
15)



16)



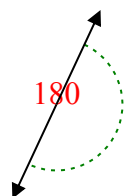
17)



18)



19)



20)

