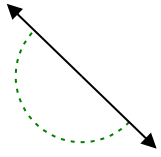




Determina se l'angolo mostrato è acuto, ottuso, retto, o piatto.

Risposte

Es)



1)



2)



Es.

piatto

1.

2.

3.

4.

5.

6.

7.

8.

9.

10.

11.

12.

13.

14.

15.

16.

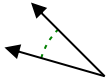
17.

18.

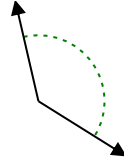
19.

20.

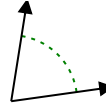
3)



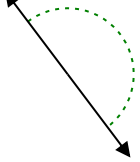
4)



5)



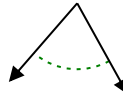
6)



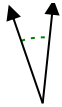
7)



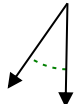
8)



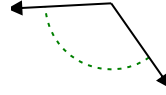
9)



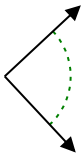
10)



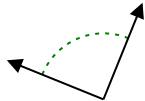
11)



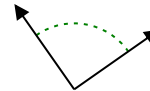
12)



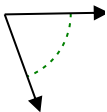
13)




14)



15)



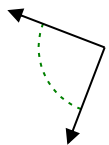
16)



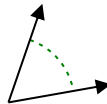
17)



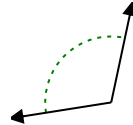
18)



19)



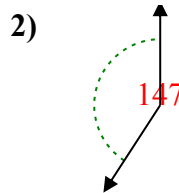
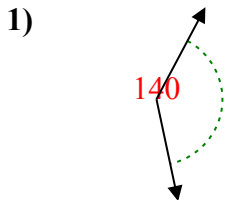
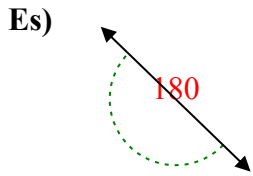
20)



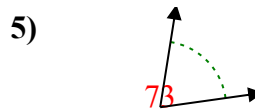
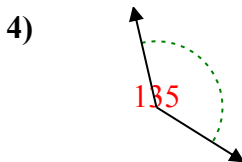
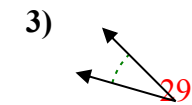


Determina se l'angolo mostrato è acuto, ottuso, retto, o piatto.

Risposte



Es. piatto



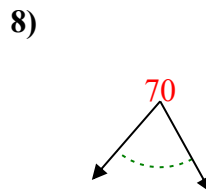
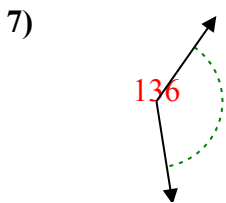
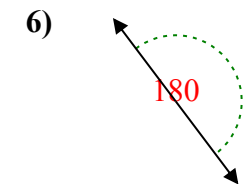
1. ottuso

2. ottuso

3. acuto

4. ottuso

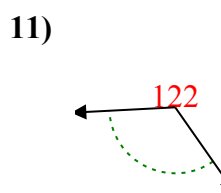
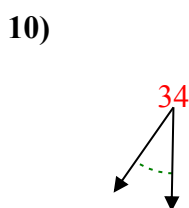
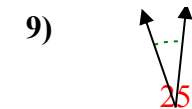
5. acuto



6. piatto

7. ottuso

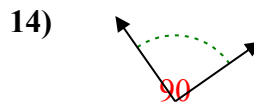
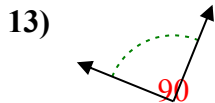
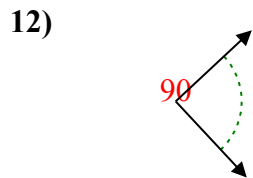
8. acuto



9. acuto

10. acuto

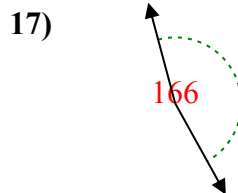
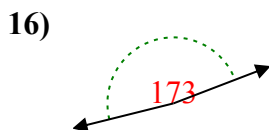
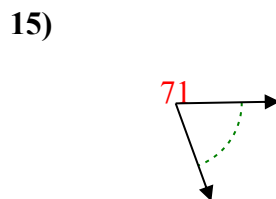
11. ottuso



12. retto

13. retto

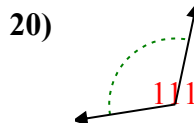
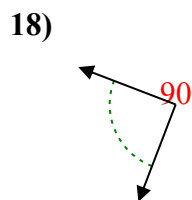
14. retto



15. acuto

16. ottuso

17. ottuso



18. retto

19. acuto

20. ottuso