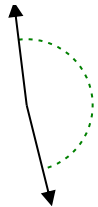




Determina se l'angolo mostrato è acuto, ottuso, retto, o piatto.

Risposte

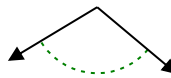
Es)



1)



2)

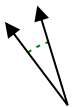


Es. ottuso

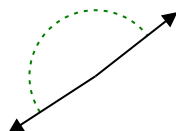
1. _____

2. _____

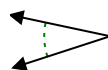
3)



4)



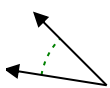
5)



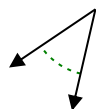
3. _____

4. _____

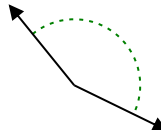
6)



7)



8)

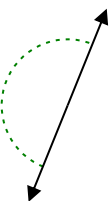


6. _____

7. _____

8. _____

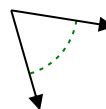
9)



10)



11)

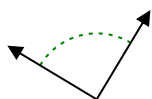


9. _____

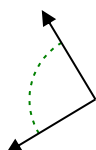
10. _____

11. _____

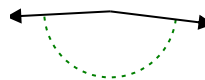
12)



13)



14)

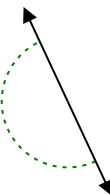


12. _____

13. _____

14. _____

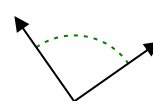
15)



16)



17)

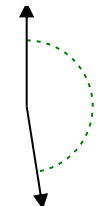


15. _____

16. _____

17. _____

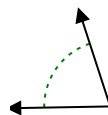
18)



19)



20)



18. _____

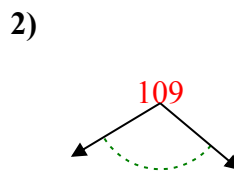
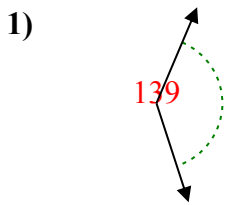
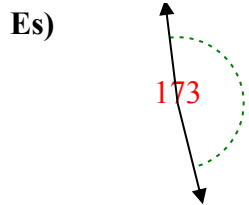
19. _____

20. _____

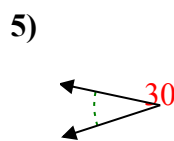
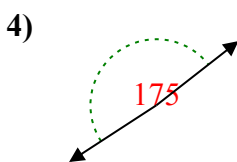
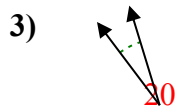


Determina se l'angolo mostrato è acuto, ottuso, retto, o piatto.

Risposte

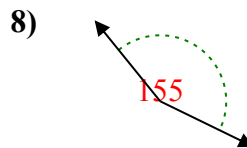
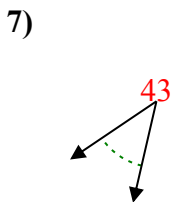
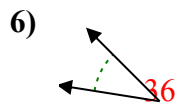


Es. ottuso



1. ottuso

2. ottuso



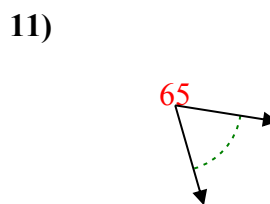
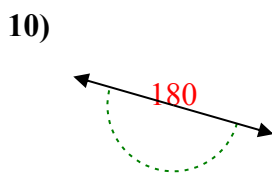
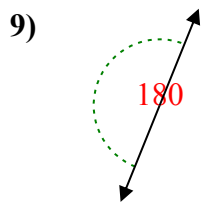
3. acuto

4. ottuso

5. acuto

6. acuto

7. acuto

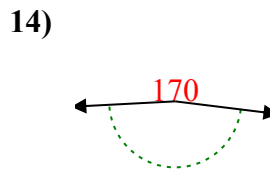
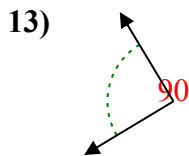
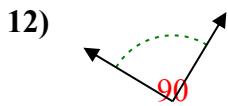


8. ottuso

9. piatto

10. piatto

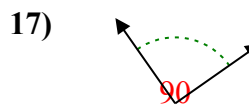
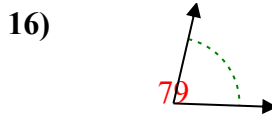
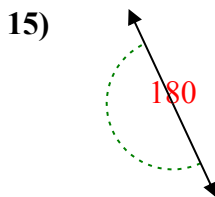
11. acuto



12. retto

13. retto

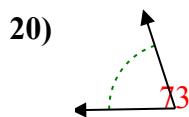
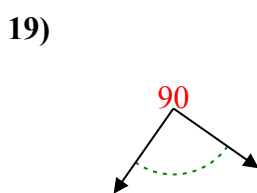
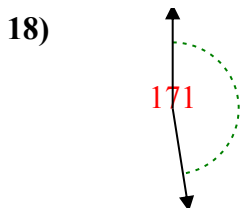
14. ottuso



15. piatto

16. acuto

17. retto



18. ottuso

19. retto

20. acuto

1-10	95	90	85	80	75	70	65	60	55	50
11-20	45	40	35	30	25	20	15	10	5	0