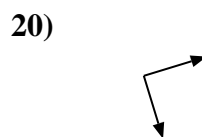
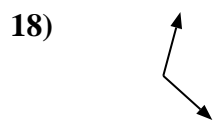

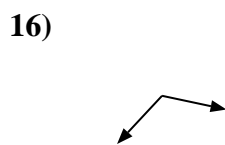
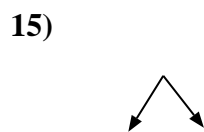
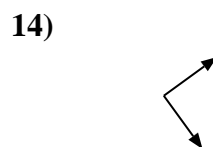
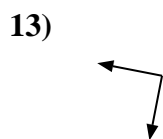
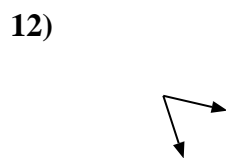
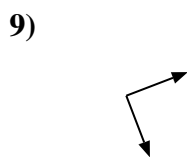
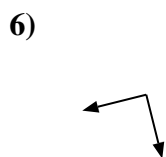
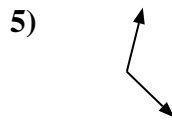
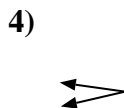
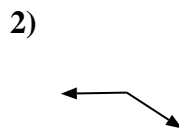
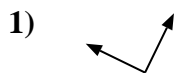
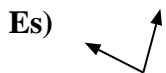




Determina se ogni angolo mostrato è "minore", "maggiore" o "uguale" a 90°.



**Risposte**

Es. minore

1. \_\_\_\_\_

2. \_\_\_\_\_

3. \_\_\_\_\_

4. \_\_\_\_\_

5. \_\_\_\_\_

6. \_\_\_\_\_

7. \_\_\_\_\_

8. \_\_\_\_\_

9. \_\_\_\_\_

10. \_\_\_\_\_

11. \_\_\_\_\_

12. \_\_\_\_\_

13. \_\_\_\_\_

14. \_\_\_\_\_

15. \_\_\_\_\_

16. \_\_\_\_\_

17. \_\_\_\_\_

18. \_\_\_\_\_

19. \_\_\_\_\_

20. \_\_\_\_\_



Determina se ogni angolo mostrato è "minore", "maggiore" o "uguale" a  $90^\circ$ .

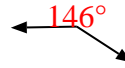
Es)



1)



2)



3)



4)



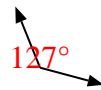
5)



6)



7)



8)



9)



10)



11)



12)



13)



14)



15)



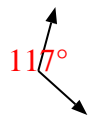
16)



17)



18)



19)



20)



Risposte

Es. minore

1. uguale

2. maggiore

3. maggiore

4. minore

5. maggiore

6. uguale

7. maggiore

8. uguale

9. uguale

10. uguale

11. minore

12. minore

13. uguale

14. uguale

15. minore

16. maggiore

17. minore

18. maggiore

19. minore

20. uguale