



Determina se ogni angolo mostrato è "minore", "maggiore" o "uguale" a 90°.

Es)



1)



2)



Risposte

Es. minore

1. _____

2. _____

3. _____

4. _____

5. _____

6. _____

7. _____

8. _____

9. _____

10. _____

11. _____

12. _____

13. _____

14. _____

15. _____

16. _____

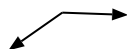
17. _____

18. _____

19. _____

20. _____

3)



4)



5)



6)



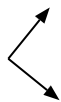
7)



8)



9)



10)



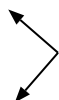
11)



12)



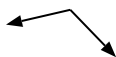
13)



14)



15)



16)



17)



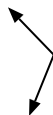
18)



19)



20)





Determina se ogni angolo mostrato è "minore", "maggiore" o "uguale" a 90° .

Es)



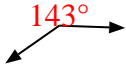
1)



2)



3)



4)



5)



6)



7)



8)




9)



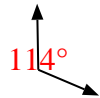
10)



11)



12)



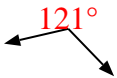
13)



14)



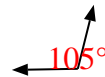
15)



16)



17)



18)



19)



20)



Risposte

Es. minore

1. uguale

2. minore

3. maggiore

4. minore

5. minore

6. uguale

7. uguale

8. minore

9. uguale

10. uguale

11. maggiore

12. maggiore

13. uguale

14. uguale

15. maggiore

16. maggiore

17. maggiore

18. minore

19. minore

20. maggiore