



Determina se ogni angolo mostrato è "minore", "maggiore" o "uguale" a 90°.

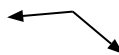
Es)



1)



2)



Risposte

Es. uguale

1. _____

2. _____

3. _____

4. _____

5. _____

6. _____

7. _____

8. _____

9. _____

10. _____

11. _____

12. _____

13. _____

14. _____

15. _____

16. _____

17. _____

18. _____

19. _____

20. _____

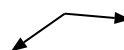
3)



4)



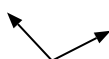
5)



6)



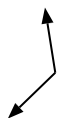
7)



8)



9)



10)



11)



12)



13)



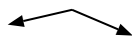
14)



15)



16)



17)



18)



19)



20)





Determina se ogni angolo mostrato è "minore", "maggiore" o "uguale" a 90° .

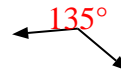
Es)



1)



2)



Risposte

Es. uguale

1. minore

2. maggiore

3. minore

4. minore

5. maggiore

6. minore

7. maggiore

8. uguale

9. maggiore

10. maggiore

11. minore

12. minore

13. uguale

14. minore

15. minore

16. maggiore

17. uguale

18. uguale

19. uguale

20. maggiore

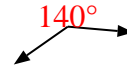
3)



4)



5)



6)



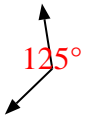
7)




8)



9)



10)



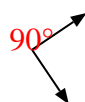
11)



12)



13)




14)



15)



16)



17)



18)



19)



20)

