



Risolvi ogni problema.

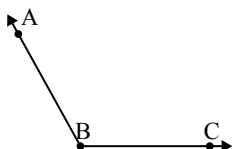
1)



Quale risposta  
corrisponde a  $\angle KLM$ ?

- A.  $31^\circ$
- B.  $120^\circ$
- C.  $160^\circ$
- D.  $71^\circ$

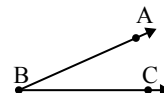
2)



Quale risposta  
corrisponde a  $\angle ABC$ ?

- A.  $71^\circ$
- B.  $45^\circ$
- C.  $119^\circ$
- D.  $159^\circ$

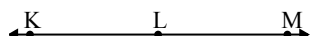
3)



Quale risposta  
corrisponde a  $\angle ABC$ ?

- A.  $2^\circ$
- B.  $150^\circ$
- C.  $24^\circ$
- D.  $76^\circ$

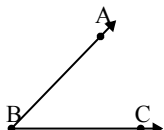
4)



Quale risposta  
corrisponde a  $\angle KLM$ ?

- A.  $129^\circ$
- B.  $105^\circ$
- C.  $3^\circ$
- D.  $180^\circ$

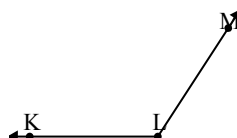
5)



Quale risposta  
corrisponde a  $\angle ABC$ ?

- A.  $172^\circ$
- B.  $46^\circ$
- C.  $94^\circ$
- D.  $128^\circ$

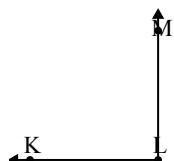
6)



Quale risposta  
corrisponde a  $\angle KLM$ ?

- A.  $123^\circ$
- B.  $61^\circ$
- C.  $27^\circ$
- D.  $2^\circ$

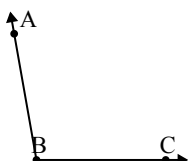
7)



Quale risposta  
corrisponde a  $\angle KLM$ ?

- A.  $90^\circ$
- B.  $17^\circ$
- C.  $139^\circ$
- D.  $38^\circ$

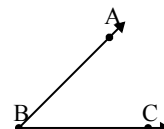
8)



Quale risposta  
corrisponde a  $\angle ABC$ ?

- A.  $175^\circ$
- B.  $100^\circ$
- C.  $20^\circ$
- D.  $70^\circ$

9)



Quale risposta  
corrisponde a  $\angle ABC$ ?

- A.  $108^\circ$
- B.  $158^\circ$
- C.  $45^\circ$
- D.  $11^\circ$

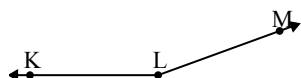
**Risposte**

1. \_\_\_\_\_
2. \_\_\_\_\_
3. \_\_\_\_\_
4. \_\_\_\_\_
5. \_\_\_\_\_
6. \_\_\_\_\_
7. \_\_\_\_\_
8. \_\_\_\_\_
9. \_\_\_\_\_



Risolvi ogni problema.

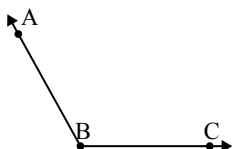
1)



Quale risposta  
corrisponde a  $\angle KLM$ ?

- A.  $31^\circ$
- B.  $120^\circ$
- C.  $160^\circ$
- D.  $71^\circ$

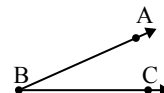
2)



Quale risposta  
corrisponde a  $\angle ABC$ ?

- A.  $71^\circ$
- B.  $45^\circ$
- C.  $119^\circ$
- D.  $159^\circ$

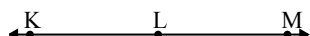
3)



Quale risposta  
corrisponde a  $\angle ABC$ ?

- A.  $2^\circ$
- B.  $150^\circ$
- C.  $24^\circ$
- D.  $76^\circ$

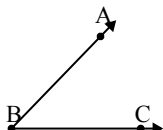
4)



Quale risposta  
corrisponde a  $\angle KLM$ ?

- A.  $129^\circ$
- B.  $105^\circ$
- C.  $3^\circ$
- D.  $180^\circ$

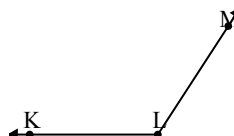
5)



Quale risposta  
corrisponde a  $\angle ABC$ ?

- A.  $172^\circ$
- B.  $46^\circ$
- C.  $94^\circ$
- D.  $128^\circ$

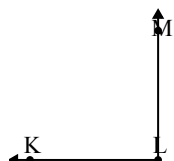
6)



Quale risposta  
corrisponde a  $\angle KLM$ ?

- A.  $123^\circ$
- B.  $61^\circ$
- C.  $27^\circ$
- D.  $2^\circ$

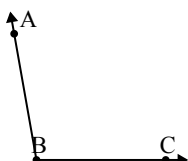
7)



Quale risposta  
corrisponde a  $\angle KLM$ ?

- A.  $90^\circ$
- B.  $17^\circ$
- C.  $139^\circ$
- D.  $38^\circ$

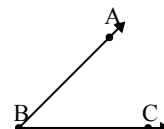
8)



Quale risposta  
corrisponde a  $\angle ABC$ ?

- A.  $175^\circ$
- B.  $100^\circ$
- C.  $20^\circ$
- D.  $70^\circ$

9)



Quale risposta  
corrisponde a  $\angle ABC$ ?

- A.  $108^\circ$
- B.  $158^\circ$
- C.  $45^\circ$
- D.  $11^\circ$

Risposte

1.     **C**
2.     **C**
3.     **C**
4.     **D**
5.     **B**
6.     **A**
7.     **A**
8.     **B**
9.     **C**