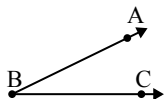




Risolvi ogni problema.

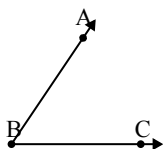
1)



Quale risposta
corrisponde a $\angle ABC$?

- A. 55°
- B. 26°
- C. 120°
- D. 156°

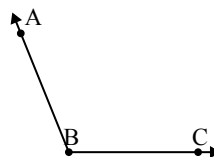
2)



Quale risposta
corrisponde a $\angle ABC$?

- A. 106°
- B. 160°
- C. 138°
- D. 56°

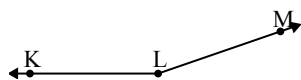
3)



Quale risposta
corrisponde a $\angle ABC$?

- A. 166°
- B. 63°
- C. 112°
- D. 90°

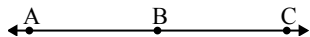
4)



Quale risposta
corrisponde a $\angle KLM$?

- A. 161°
- B. 29°
- C. 103°
- D. 127°

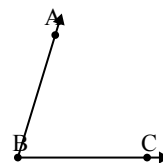
5)



Quale risposta
corrisponde a $\angle ABC$?

- A. 180°
- B. 158°
- C. 119°
- D. 14°

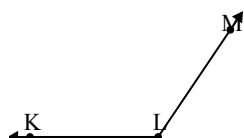
6)



Quale risposta
corrisponde a $\angle ABC$?

- A. 154°
- B. 1°
- C. 73°
- D. 130°

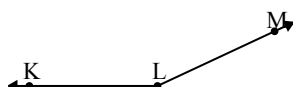
7)



Quale risposta
corrisponde a $\angle KLM$?

- A. 54°
- B. 177°
- C. 124°
- D. 103°

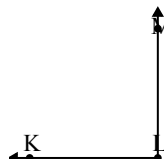
8)



Quale risposta
corrisponde a $\angle KLM$?

- A. 36°
- B. 106°
- C. 155°
- D. 62°

9)



Quale risposta
corrisponde a $\angle KLM$?

- A. 9°
- B. 31°
- C. 90°
- D. 131°

Risposte

1. _____

2. _____

3. _____

4. _____

5. _____

6. _____

7. _____

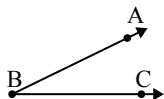
8. _____

9. _____



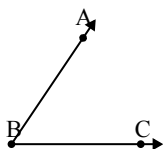
Risolvi ogni problema.

1)

Quale risposta
corrisponde a $\sphericalangle ABC$?

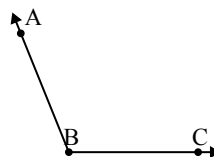
- A. 55°
- B. 26°
- C. 120°
- D. 156°

2)

Quale risposta
corrisponde a $\sphericalangle ABC$?

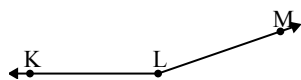
- A. 106°
- B. 160°
- C. 138°
- D. 56°

3)

Quale risposta
corrisponde a $\sphericalangle ABC$?

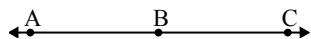
- A. 166°
- B. 63°
- C. 112°
- D. 90°

4)

Quale risposta
corrisponde a $\sphericalangle KLM$?

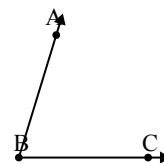
- A. 161°
- B. 29°
- C. 103°
- D. 127°

5)

Quale risposta
corrisponde a $\sphericalangle ABC$?

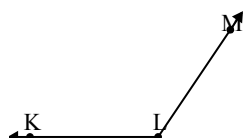
- A. 180°
- B. 158°
- C. 119°
- D. 14°

6)

Quale risposta
corrisponde a $\sphericalangle ABC$?

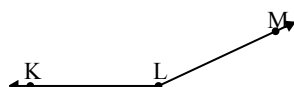
- A. 154°
- B. 1°
- C. 73°
- D. 130°

7)

Quale risposta
corrisponde a $\sphericalangle KLM$?

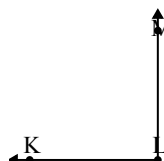
- A. 54°
- B. 177°
- C. 124°
- D. 103°

8)

Quale risposta
corrisponde a $\sphericalangle KLM$?

- A. 36°
- B. 106°
- C. 155°
- D. 62°

9)

Quale risposta
corrisponde a $\sphericalangle KLM$?

- A. 9°
- B. 31°
- C. 90°
- D. 131°

Risposte1. **B**2. **D**3. **C**4. **A**5. **A**6. **C**7. **C**8. **C**9. **C**