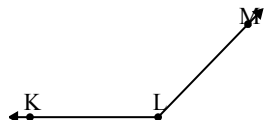




Risolvi ogni problema.

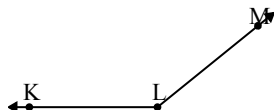
1)



Quale risposta  
corrisponde a  $\sphericalangle$  KLM?

- A.  $69^\circ$
- B.  $112^\circ$
- C.  $134^\circ$
- D.  $30^\circ$

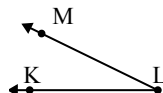
2)



Quale risposta  
corrisponde a  $\sphericalangle$  KLM?

- A.  $2^\circ$
- B.  $23^\circ$
- C.  $53^\circ$
- D.  $141^\circ$

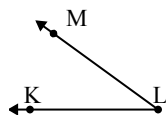
3)



Quale risposta  
corrisponde a  $\sphericalangle$  KLM?

- A.  $26^\circ$
- B.  $95^\circ$
- C.  $158^\circ$
- D.  $74^\circ$

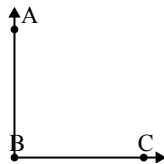
4)



Quale risposta  
corrisponde a  $\sphericalangle$  KLM?

- A.  $109^\circ$
- B.  $153^\circ$
- C.  $6^\circ$
- D.  $36^\circ$

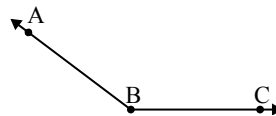
5)



Quale risposta  
corrisponde a  $\sphericalangle$  ABC?

- A.  $178^\circ$
- B.  $32^\circ$
- C.  $4^\circ$
- D.  $90^\circ$

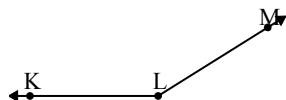
6)



Quale risposta  
corrisponde a  $\sphericalangle$  ABC?

- A.  $143^\circ$
- B.  $175^\circ$
- C.  $53^\circ$
- D.  $118^\circ$

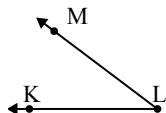
7)



Quale risposta  
corrisponde a  $\sphericalangle$  KLM?

- A.  $148^\circ$
- B.  $23^\circ$
- C.  $127^\circ$
- D.  $44^\circ$

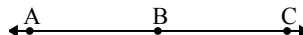
8)



Quale risposta  
corrisponde a  $\sphericalangle$  KLM?

- A.  $70^\circ$
- B.  $96^\circ$
- C.  $37^\circ$
- D.  $174^\circ$

9)



Quale risposta  
corrisponde a  $\sphericalangle$  ABC?

- A.  $77^\circ$
- B.  $120^\circ$
- C.  $24^\circ$
- D.  $180^\circ$

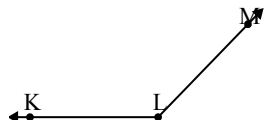
**Risposte**

1. \_\_\_\_\_
2. \_\_\_\_\_
3. \_\_\_\_\_
4. \_\_\_\_\_
5. \_\_\_\_\_
6. \_\_\_\_\_
7. \_\_\_\_\_
8. \_\_\_\_\_
9. \_\_\_\_\_



Risolvi ogni problema.

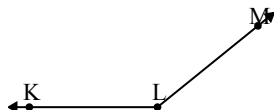
1)



Quale risposta  
corrisponde a  $\sphericalangle$  KLM?

- A.  $69^\circ$
- B.  $112^\circ$
- C.  $134^\circ$
- D.  $30^\circ$

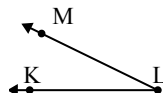
2)



Quale risposta  
corrisponde a  $\sphericalangle$  KLM?

- A.  $2^\circ$
- B.  $23^\circ$
- C.  $53^\circ$
- D.  $141^\circ$

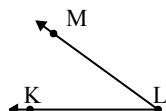
3)



Quale risposta  
corrisponde a  $\sphericalangle$  KLM?

- A.  $26^\circ$
- B.  $95^\circ$
- C.  $158^\circ$
- D.  $74^\circ$

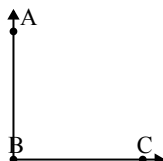
4)



Quale risposta  
corrisponde a  $\sphericalangle$  KLM?

- A.  $109^\circ$
- B.  $153^\circ$
- C.  $6^\circ$
- D.  $36^\circ$

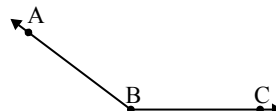
5)



Quale risposta  
corrisponde a  $\sphericalangle$  ABC?

- A.  $178^\circ$
- B.  $32^\circ$
- C.  $4^\circ$
- D.  $90^\circ$

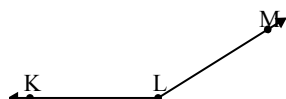
6)



Quale risposta  
corrisponde a  $\sphericalangle$  ABC?

- A.  $143^\circ$
- B.  $175^\circ$
- C.  $53^\circ$
- D.  $118^\circ$

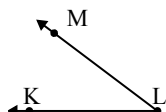
7)



Quale risposta  
corrisponde a  $\sphericalangle$  KLM?

- A.  $148^\circ$
- B.  $23^\circ$
- C.  $127^\circ$
- D.  $44^\circ$

8)



Quale risposta  
corrisponde a  $\sphericalangle$  KLM?

- A.  $70^\circ$
- B.  $96^\circ$
- C.  $37^\circ$
- D.  $174^\circ$

9)



Quale risposta  
corrisponde a  $\sphericalangle$  ABC?

- A.  $77^\circ$
- B.  $120^\circ$
- C.  $24^\circ$
- D.  $180^\circ$

**Risposte**1. **C**2. **D**3. **A**4. **D**5. **D**6. **A**7. **A**8. **C**9. **D**