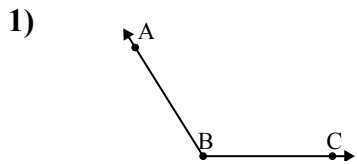


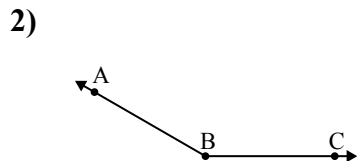


Risolvi ogni problema.



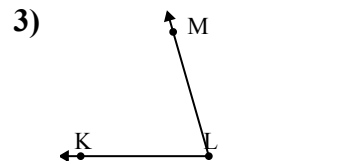
Quale risposta  
corrisponde a  $\angle ABC$ ?

- A.  $75^\circ$
- B.  $166^\circ$
- C.  $122^\circ$
- D.  $99^\circ$



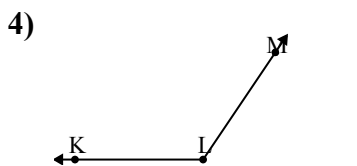
Quale risposta  
corrisponde a  $\angle ABC$ ?

- A.  $76^\circ$
- B.  $50^\circ$
- C.  $113^\circ$
- D.  $150^\circ$



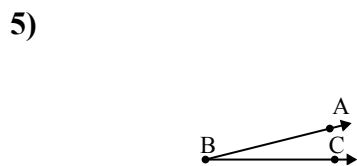
Quale risposta  
corrisponde a  $\angle KLM$ ?

- A.  $74^\circ$
- B.  $123^\circ$
- C.  $161^\circ$
- D.  $29^\circ$



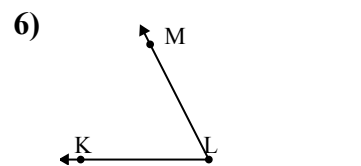
Quale risposta  
corrisponde a  $\angle KLM$ ?

- A.  $124^\circ$
- B.  $83^\circ$
- C.  $169^\circ$
- D.  $13^\circ$



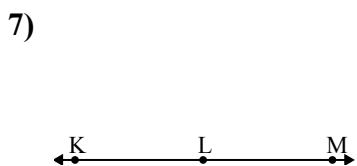
Quale risposta  
corrisponde a  $\angle ABC$ ?

- A.  $165^\circ$
- B.  $14^\circ$
- C.  $73^\circ$
- D.  $51^\circ$



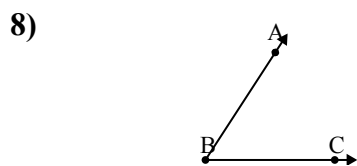
Quale risposta  
corrisponde a  $\angle KLM$ ?

- A.  $173^\circ$
- B.  $132^\circ$
- C.  $63^\circ$
- D.  $97^\circ$



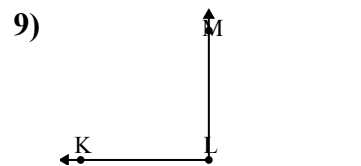
Quale risposta  
corrisponde a  $\angle KLM$ ?

- A.  $46^\circ$
- B.  $79^\circ$
- C.  $13^\circ$
- D.  $180^\circ$



Quale risposta  
corrisponde a  $\angle ABC$ ?

- A.  $57^\circ$
- B.  $36^\circ$
- C.  $124^\circ$
- D.  $145^\circ$



Quale risposta  
corrisponde a  $\angle KLM$ ?

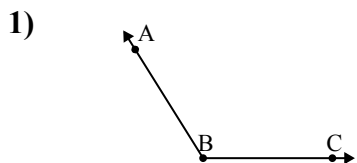
- A.  $90^\circ$
- B.  $59^\circ$
- C.  $22^\circ$
- D.  $148^\circ$

**Risposte**

1. \_\_\_\_\_
2. \_\_\_\_\_
3. \_\_\_\_\_
4. \_\_\_\_\_
5. \_\_\_\_\_
6. \_\_\_\_\_
7. \_\_\_\_\_
8. \_\_\_\_\_
9. \_\_\_\_\_

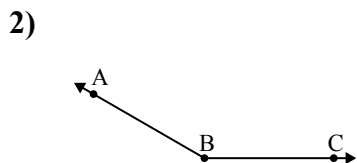


Risolvi ogni problema.



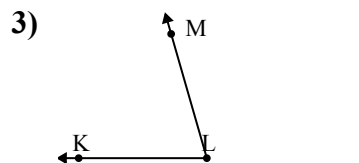
Quale risposta  
corrisponde a  $\angle ABC$ ?

- A.  $75^\circ$
- B.  $166^\circ$
- C.  $122^\circ$
- D.  $99^\circ$



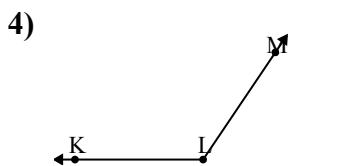
Quale risposta  
corrisponde a  $\angle ABC$ ?

- A.  $76^\circ$
- B.  $50^\circ$
- C.  $113^\circ$
- D.  $150^\circ$



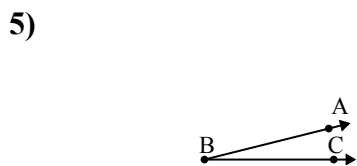
Quale risposta  
corrisponde a  $\angle KLM$ ?

- A.  $74^\circ$
- B.  $123^\circ$
- C.  $161^\circ$
- D.  $29^\circ$



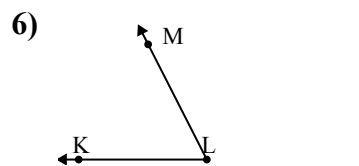
Quale risposta  
corrisponde a  $\angle KLM$ ?

- A.  $124^\circ$
- B.  $83^\circ$
- C.  $169^\circ$
- D.  $13^\circ$



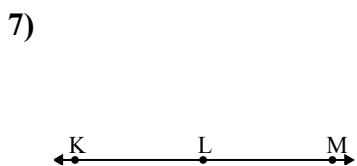
Quale risposta  
corrisponde a  $\angle ABC$ ?

- A.  $165^\circ$
- B.  $14^\circ$
- C.  $73^\circ$
- D.  $51^\circ$



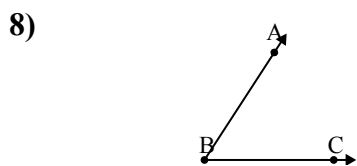
Quale risposta  
corrisponde a  $\angle KLM$ ?

- A.  $173^\circ$
- B.  $132^\circ$
- C.  $63^\circ$
- D.  $97^\circ$



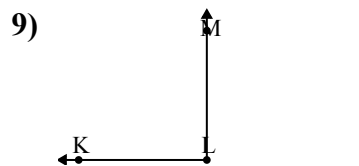
Quale risposta  
corrisponde a  $\angle KLM$ ?

- A.  $46^\circ$
- B.  $79^\circ$
- C.  $13^\circ$
- D.  $180^\circ$



Quale risposta  
corrisponde a  $\angle ABC$ ?

- A.  $57^\circ$
- B.  $36^\circ$
- C.  $124^\circ$
- D.  $145^\circ$



Quale risposta  
corrisponde a  $\angle KLM$ ?

- A.  $90^\circ$
- B.  $59^\circ$
- C.  $22^\circ$
- D.  $148^\circ$

**Risposte**1. **C**2. **D**3. **A**4. **A**5. **B**6. **C**7. **D**8. **A**9. **A**