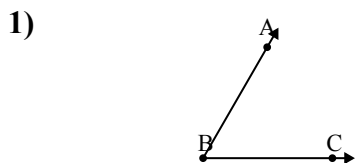


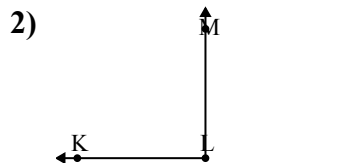


Risolvi ogni problema.



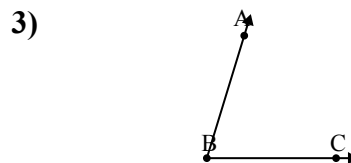
Quale risposta  
corrisponde a  $\angle ABC$ ?

- A.  $60^\circ$
- B.  $14^\circ$
- C.  $176^\circ$
- D.  $127^\circ$



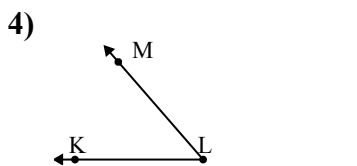
Quale risposta  
corrisponde a  $\angle KLM$ ?

- A.  $121^\circ$
- B.  $90^\circ$
- C.  $44^\circ$
- D.  $149^\circ$



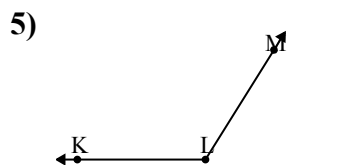
Quale risposta  
corrisponde a  $\angle ABC$ ?

- A.  $38^\circ$
- B.  $122^\circ$
- C.  $73^\circ$
- D.  $167^\circ$



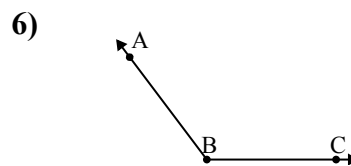
Quale risposta  
corrisponde a  $\angle KLM$ ?

- A.  $169^\circ$
- B.  $97^\circ$
- C.  $133^\circ$
- D.  $49^\circ$



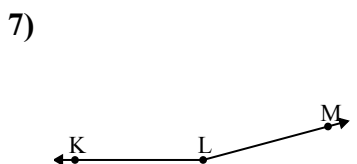
Quale risposta  
corrisponde a  $\angle KLM$ ?

- A.  $162^\circ$
- B.  $54^\circ$
- C.  $0^\circ$
- D.  $122^\circ$



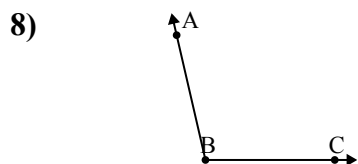
Quale risposta  
corrisponde a  $\angle ABC$ ?

- A.  $48^\circ$
- B.  $127^\circ$
- C.  $154^\circ$
- D.  $20^\circ$



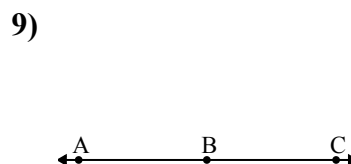
Quale risposta  
corrisponde a  $\angle KLM$ ?

- A.  $165^\circ$
- B.  $92^\circ$
- C.  $54^\circ$
- D.  $26^\circ$



Quale risposta  
corrisponde a  $\angle ABC$ ?

- A.  $168^\circ$
- B.  $73^\circ$
- C.  $103^\circ$
- D.  $51^\circ$



Quale risposta  
corrisponde a  $\angle ABC$ ?

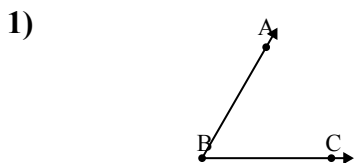
- A.  $23^\circ$
- B.  $180^\circ$
- C.  $145^\circ$
- D.  $1^\circ$

Risposte

1. \_\_\_\_\_
2. \_\_\_\_\_
3. \_\_\_\_\_
4. \_\_\_\_\_
5. \_\_\_\_\_
6. \_\_\_\_\_
7. \_\_\_\_\_
8. \_\_\_\_\_
9. \_\_\_\_\_

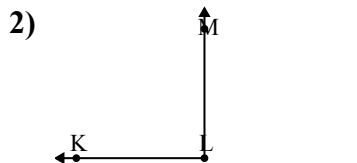


Risolvi ogni problema.



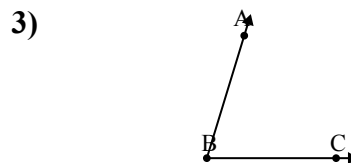
Quale risposta  
corrisponde a  $\angle ABC$ ?

- A.  $60^\circ$
- B.  $14^\circ$
- C.  $176^\circ$
- D.  $127^\circ$



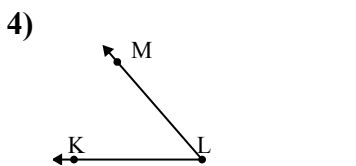
Quale risposta  
corrisponde a  $\angle KLM$ ?

- A.  $121^\circ$
- B.  $90^\circ$
- C.  $44^\circ$
- D.  $149^\circ$



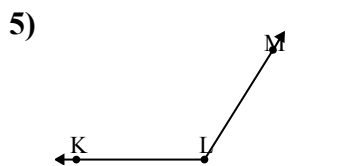
Quale risposta  
corrisponde a  $\angle ABC$ ?

- A.  $38^\circ$
- B.  $122^\circ$
- C.  $73^\circ$
- D.  $167^\circ$



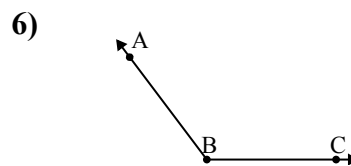
Quale risposta  
corrisponde a  $\angle KLM$ ?

- A.  $169^\circ$
- B.  $97^\circ$
- C.  $133^\circ$
- D.  $49^\circ$



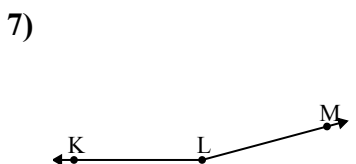
Quale risposta  
corrisponde a  $\angle KLM$ ?

- A.  $162^\circ$
- B.  $54^\circ$
- C.  $0^\circ$
- D.  $122^\circ$



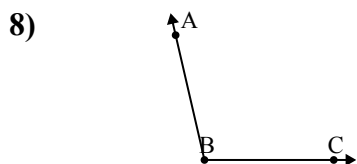
Quale risposta  
corrisponde a  $\angle ABC$ ?

- A.  $48^\circ$
- B.  $127^\circ$
- C.  $154^\circ$
- D.  $20^\circ$



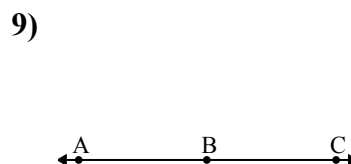
Quale risposta  
corrisponde a  $\angle KLM$ ?

- A.  $165^\circ$
- B.  $92^\circ$
- C.  $54^\circ$
- D.  $26^\circ$



Quale risposta  
corrisponde a  $\angle ABC$ ?

- A.  $168^\circ$
- B.  $73^\circ$
- C.  $103^\circ$
- D.  $51^\circ$



Quale risposta  
corrisponde a  $\angle ABC$ ?

- A.  $23^\circ$
- B.  $180^\circ$
- C.  $145^\circ$
- D.  $1^\circ$

**Risposte**1. **A**2. **B**3. **C**4. **D**5. **D**6. **B**7. **A**8. **C**9. **B**