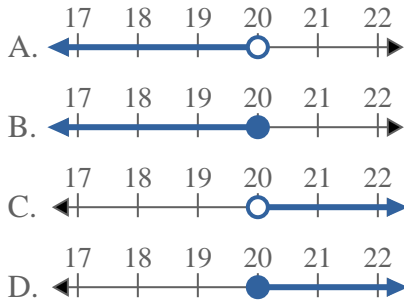


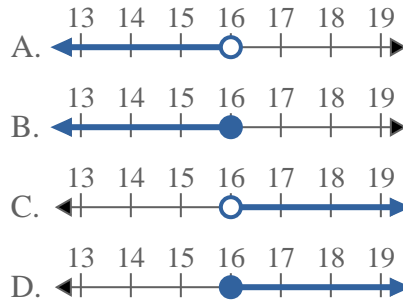


Risolvi ogni problema.

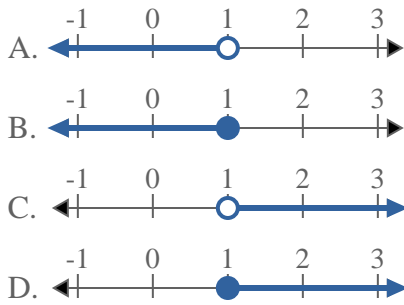
1) Quale opzione rappresenta correttamente $X \geq 20$



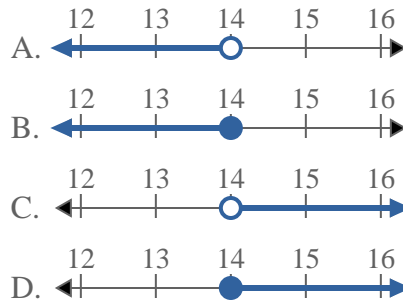
2) Quale opzione rappresenta correttamente $X < 16$



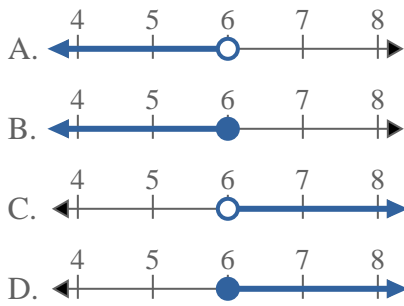
3) Quale opzione rappresenta correttamente $X \geq 1$



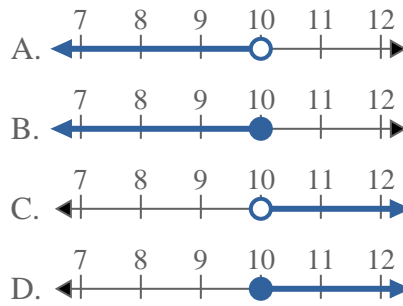
4) Quale opzione rappresenta correttamente $X > 14$



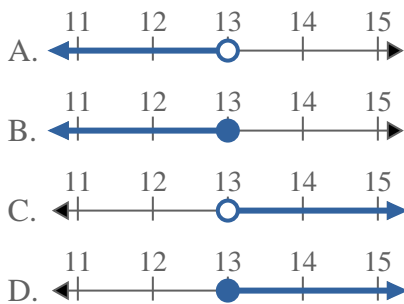
5) Quale opzione rappresenta correttamente $X < 6$



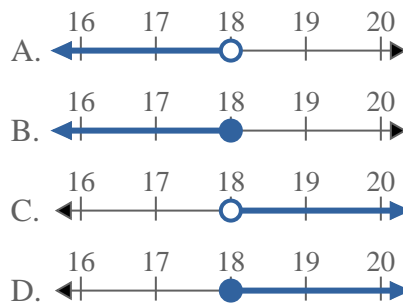
6) Quale opzione rappresenta correttamente $X < 10$



7) Quale opzione rappresenta correttamente $X \leq 13$



8) Quale opzione rappresenta correttamente $X > 18$



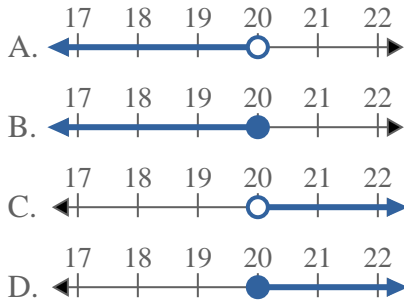
Risposte

1. _____
2. _____
3. _____
4. _____
5. _____
6. _____
7. _____
8. _____

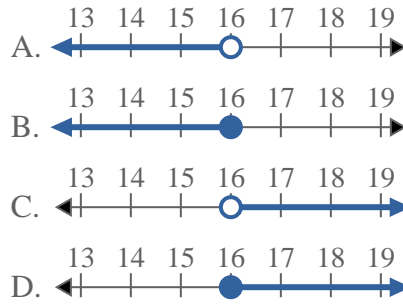


Risolvi ogni problema.

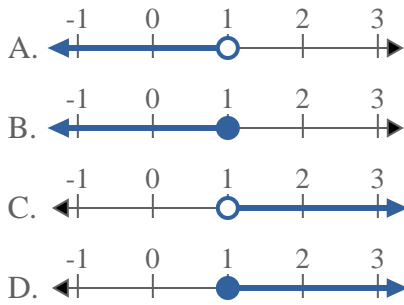
1) Quale opzione rappresenta correttamente $X \geq 20$



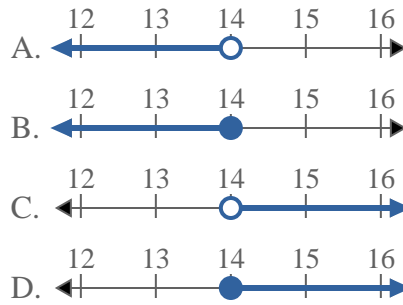
2) Quale opzione rappresenta correttamente $X < 16$



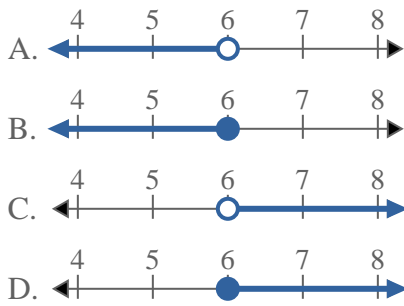
3) Quale opzione rappresenta correttamente $X \geq 1$



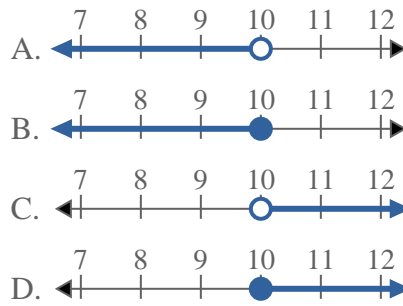
4) Quale opzione rappresenta correttamente $X > 14$



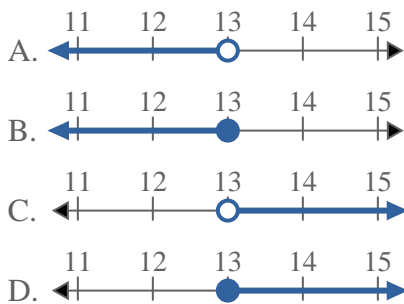
5) Quale opzione rappresenta correttamente $X < 6$



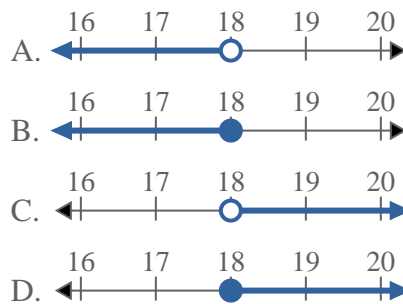
6) Quale opzione rappresenta correttamente $X < 10$



7) Quale opzione rappresenta correttamente $X \leq 13$



8) Quale opzione rappresenta correttamente $X > 18$



Risposte

1. **D**
2. **A**
3. **D**
4. **C**
5. **A**
6. **A**
7. **B**
8. **C**