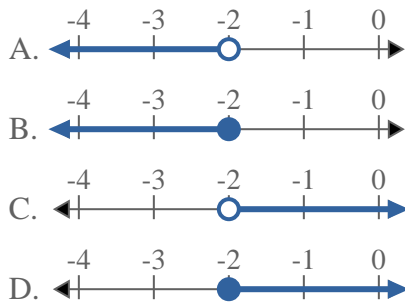


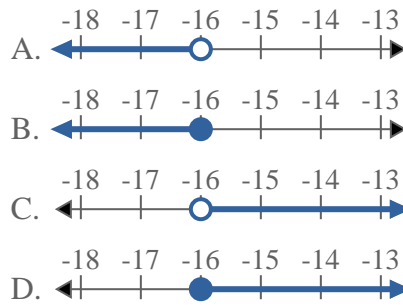


**Risolvi ogni problema.**

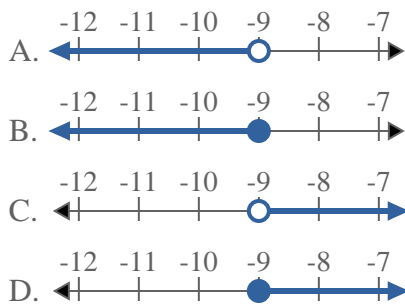
1) Quale opzione rappresenta correttamente  $X < -2$



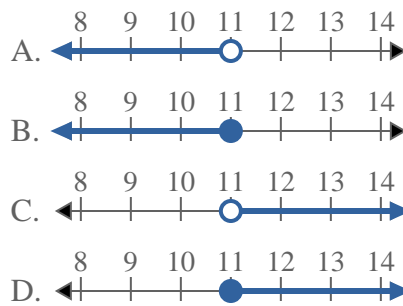
2) Quale opzione rappresenta correttamente  $X < -16$



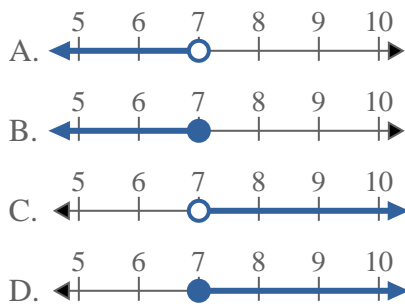
3) Quale opzione rappresenta correttamente  $X < -9$



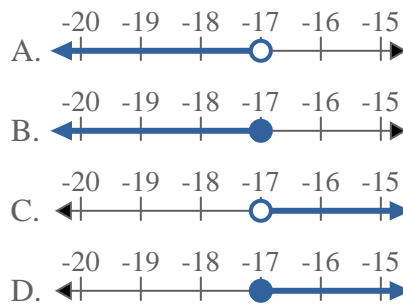
4) Quale opzione rappresenta correttamente  $X < 11$



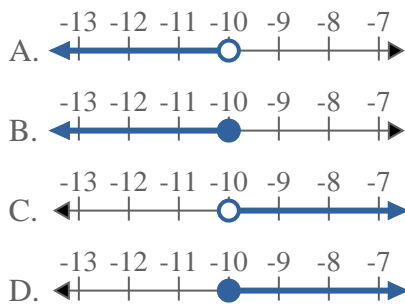
5) Quale opzione rappresenta correttamente  $X \geq 7$



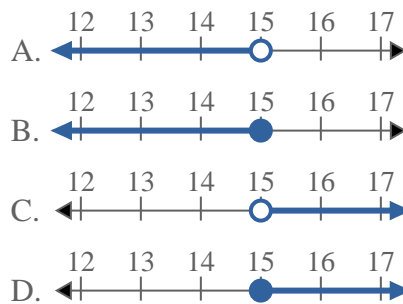
6) Quale opzione rappresenta correttamente  $X < -17$



7) Quale opzione rappresenta correttamente  $X < -10$



8) Quale opzione rappresenta correttamente  $X > 15$



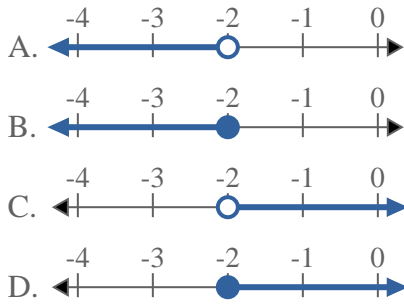
**Risposte**

1. \_\_\_\_\_
2. \_\_\_\_\_
3. \_\_\_\_\_
4. \_\_\_\_\_
5. \_\_\_\_\_
6. \_\_\_\_\_
7. \_\_\_\_\_
8. \_\_\_\_\_

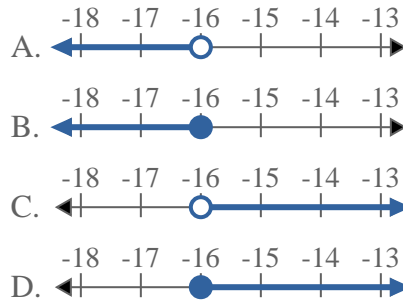


**Risolvi ogni problema.**

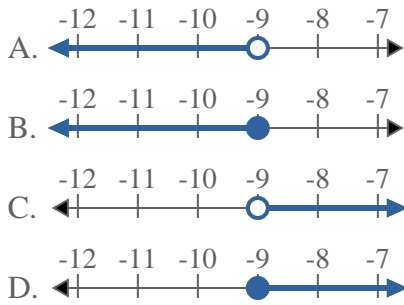
1) Quale opzione rappresenta correttamente  $X < -2$



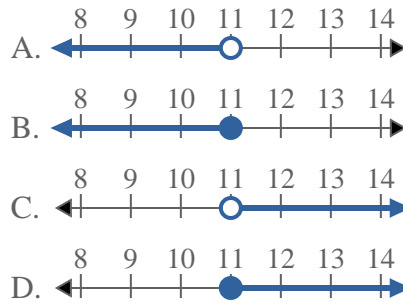
2) Quale opzione rappresenta correttamente  $X < -16$



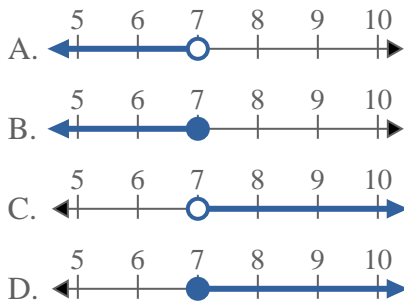
3) Quale opzione rappresenta correttamente  $X < -9$



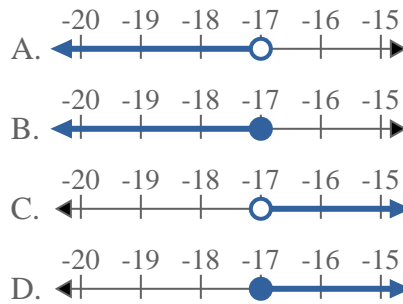
4) Quale opzione rappresenta correttamente  $X < 11$



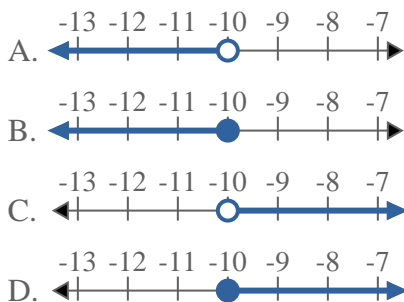
5) Quale opzione rappresenta correttamente  $X \geq 7$



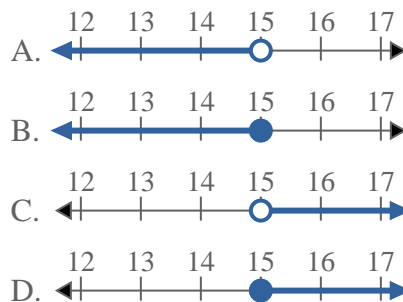
6) Quale opzione rappresenta correttamente  $X < -17$



7) Quale opzione rappresenta correttamente  $X < -10$



8) Quale opzione rappresenta correttamente  $X > 15$



**Risposte**

1.     **A**
2.     **A**
3.     **A**
4.     **A**
5.     **D**
6.     **A**
7.     **A**
8.     **C**