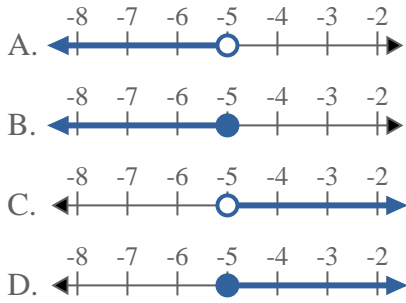


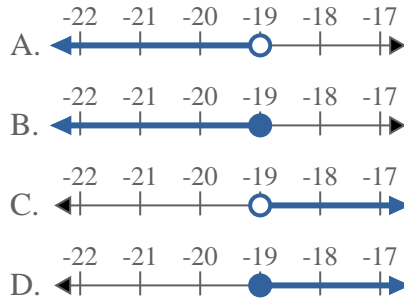


Risolvi ogni problema.

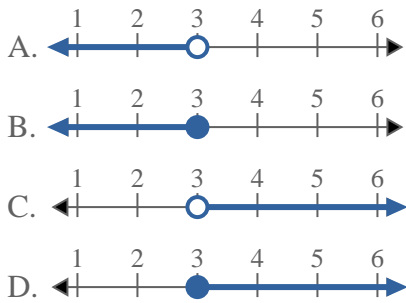
1) Quale opzione rappresenta correttamente $X > -5$



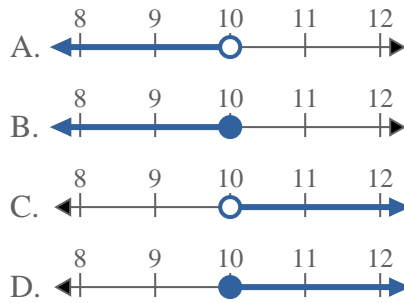
2) Quale opzione rappresenta correttamente $X > -19$



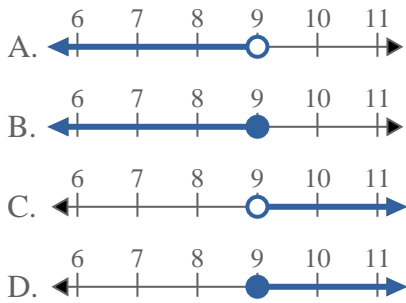
3) Quale opzione rappresenta correttamente $X > 3$



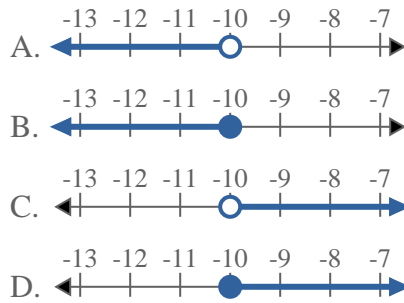
4) Quale opzione rappresenta correttamente $X > 10$



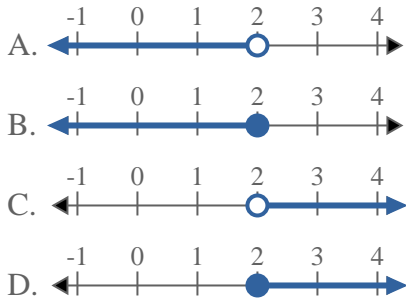
5) Quale opzione rappresenta correttamente $X > 9$



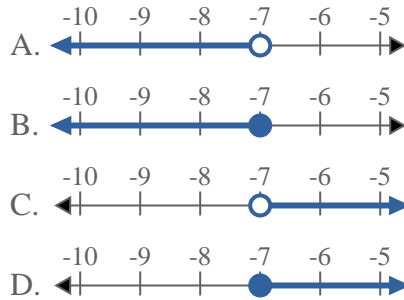
6) Quale opzione rappresenta correttamente $X \leq -10$



7) Quale opzione rappresenta correttamente $X < 2$



8) Quale opzione rappresenta correttamente $X \geq -7$



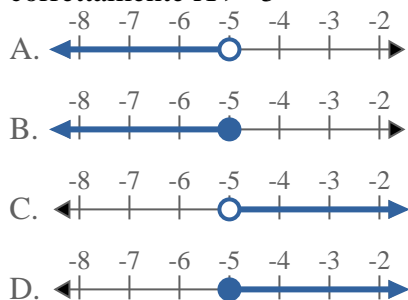
Risposte

1. _____
2. _____
3. _____
4. _____
5. _____
6. _____
7. _____
8. _____

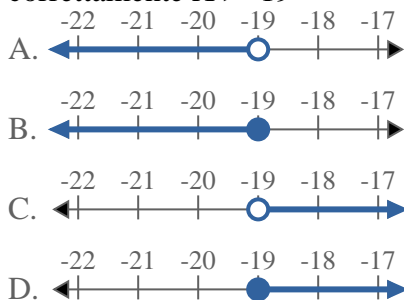


Risolvi ogni problema.

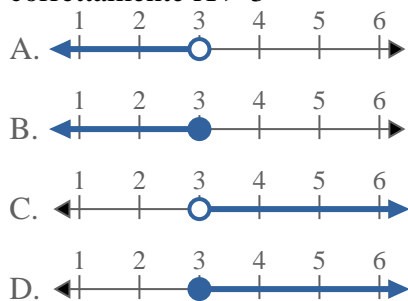
1) Quale opzione rappresenta correttamente $X > -5$



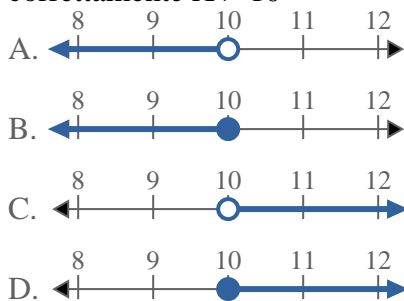
2) Quale opzione rappresenta correttamente $X > -19$



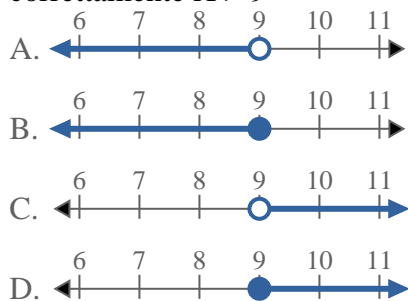
3) Quale opzione rappresenta correttamente $X > 3$



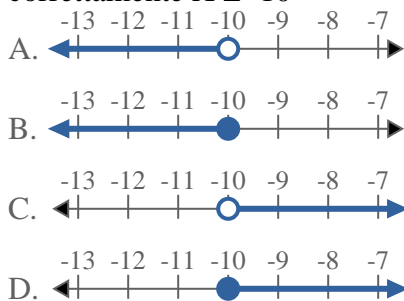
4) Quale opzione rappresenta correttamente $X > 10$



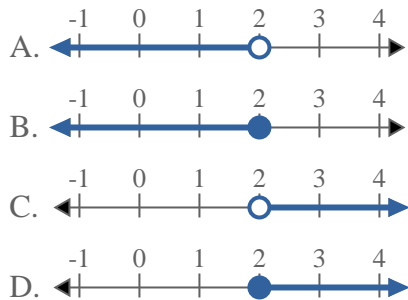
5) Quale opzione rappresenta correttamente $X > 9$



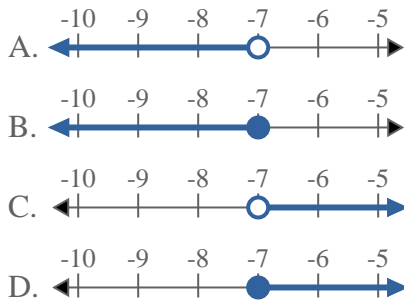
6) Quale opzione rappresenta correttamente $X \leq -10$



7) Quale opzione rappresenta correttamente $X < 2$



8) Quale opzione rappresenta correttamente $X \geq -7$



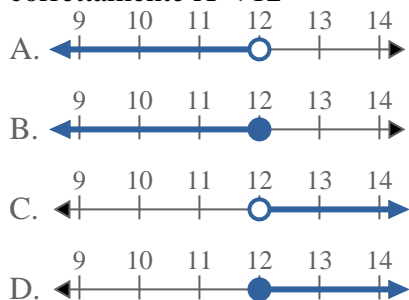
Risposte

1. **C**
2. **C**
3. **C**
4. **C**
5. **C**
6. **B**
7. **A**
8. **D**

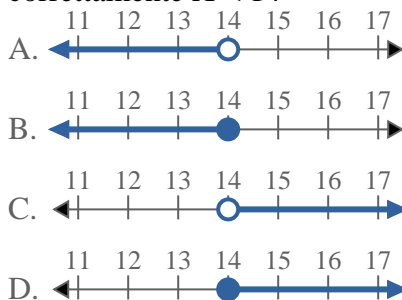


Risolvi ogni problema.

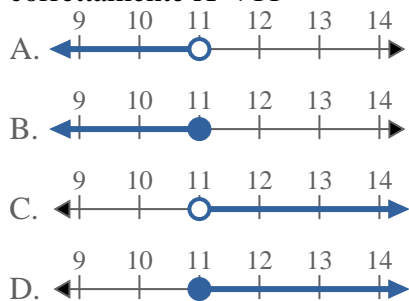
1) Quale opzione rappresenta correttamente $X < 12$



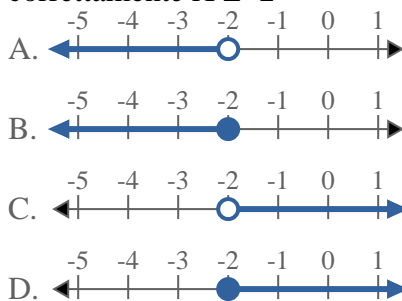
2) Quale opzione rappresenta correttamente $X < 14$



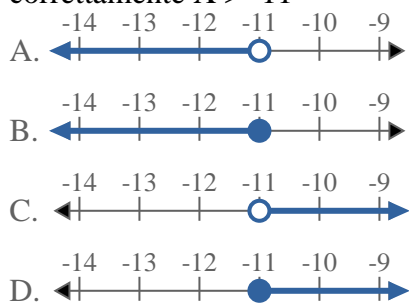
3) Quale opzione rappresenta correttamente $X < 11$



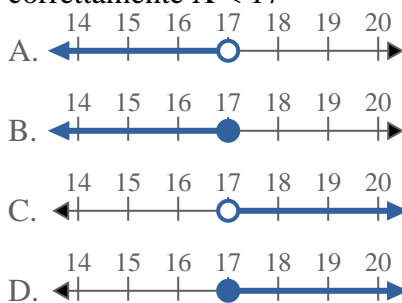
4) Quale opzione rappresenta correttamente $X \geq -2$



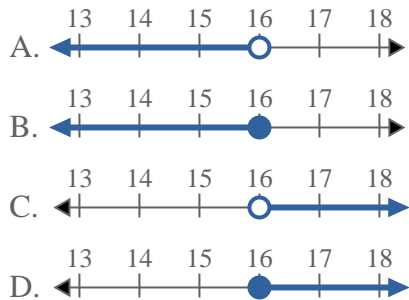
5) Quale opzione rappresenta correttamente $X > -11$



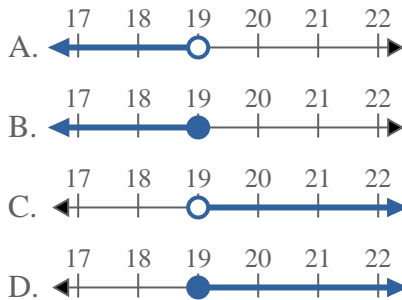
6) Quale opzione rappresenta correttamente $X < 17$



7) Quale opzione rappresenta correttamente $X \geq 16$

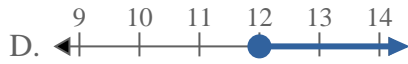
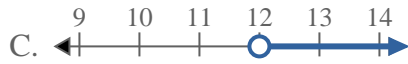
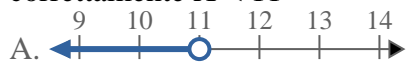
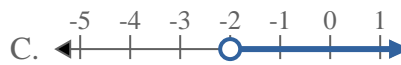
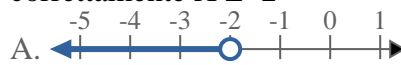
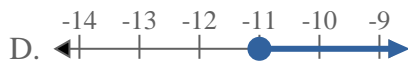
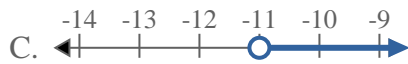
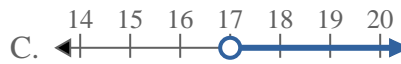
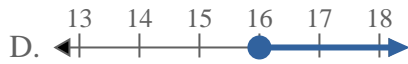
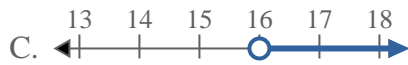
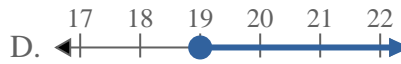


8) Quale opzione rappresenta correttamente $X \leq 19$



Risposte

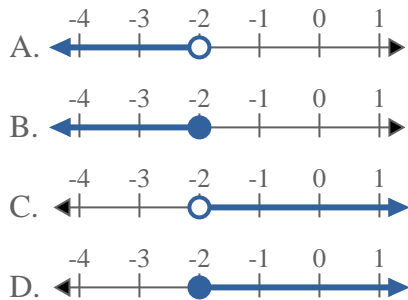
1. _____
2. _____
3. _____
4. _____
5. _____
6. _____
7. _____
8. _____

**Risolvi ogni problema.**1) Quale opzione rappresenta correttamente $X < 12$ 2) Quale opzione rappresenta correttamente $X < 14$ 3) Quale opzione rappresenta correttamente $X < 11$ 4) Quale opzione rappresenta correttamente $X \geq -2$ 5) Quale opzione rappresenta correttamente $X > -11$ 6) Quale opzione rappresenta correttamente $X < 17$ 7) Quale opzione rappresenta correttamente $X \geq 16$ 8) Quale opzione rappresenta correttamente $X \leq 19$ **Risposte**1. **A** 2. **A** 3. **A** 4. **D** 5. **C** 6. **A** 7. **D** 8. **B**

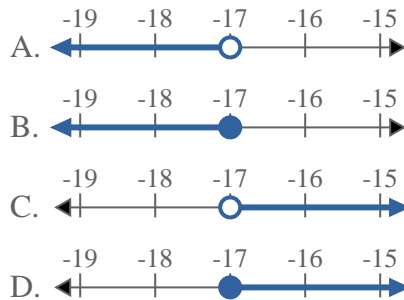


Risolvi ogni problema.

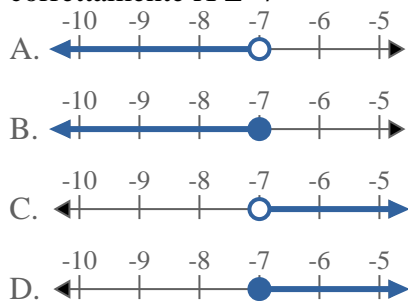
1) Quale opzione rappresenta correttamente $X \geq -2$



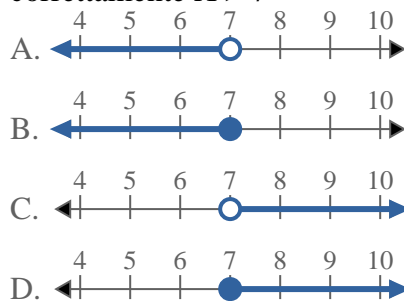
2) Quale opzione rappresenta correttamente $X < -17$



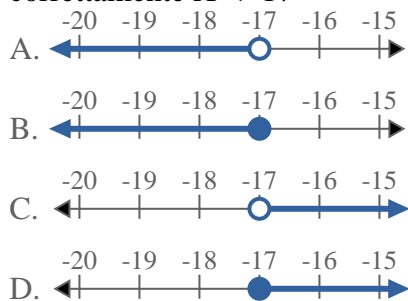
3) Quale opzione rappresenta correttamente $X \geq -7$



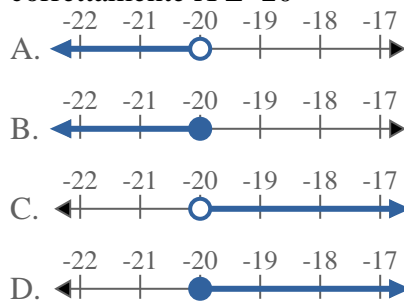
4) Quale opzione rappresenta correttamente $X > 7$



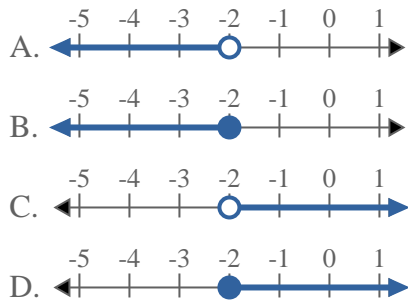
5) Quale opzione rappresenta correttamente $X < -17$



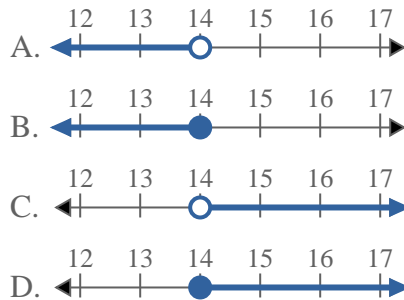
6) Quale opzione rappresenta correttamente $X \leq -20$



7) Quale opzione rappresenta correttamente $X \geq -2$

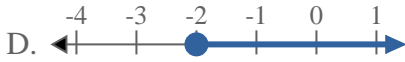
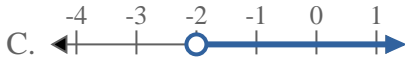
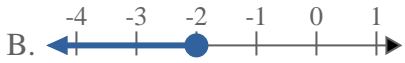
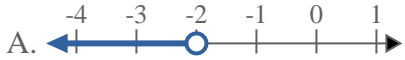
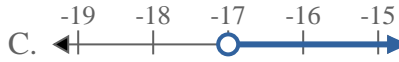
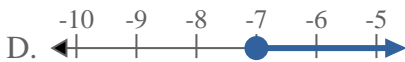
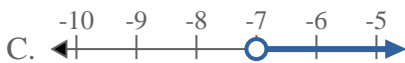
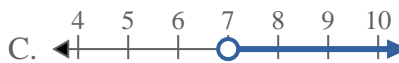
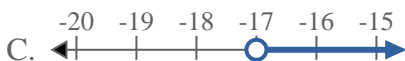
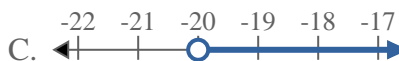
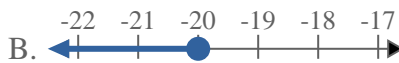
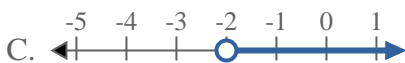


8) Quale opzione rappresenta correttamente $X \leq 14$



Risposte

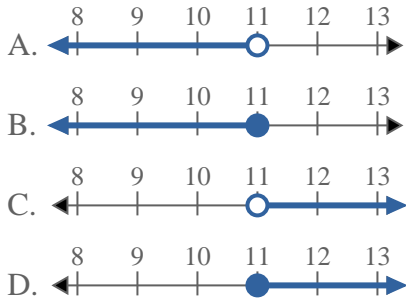
1. _____
2. _____
3. _____
4. _____
5. _____
6. _____
7. _____
8. _____

**Risolvi ogni problema.**1) Quale opzione rappresenta correttamente $X \geq -2$ 2) Quale opzione rappresenta correttamente $X < -17$ 3) Quale opzione rappresenta correttamente $X \geq -7$ 4) Quale opzione rappresenta correttamente $X > 7$ 5) Quale opzione rappresenta correttamente $X < -17$ 6) Quale opzione rappresenta correttamente $X \leq -20$ 7) Quale opzione rappresenta correttamente $X \geq -2$ 8) Quale opzione rappresenta correttamente $X \leq 14$ **Risposte**1. **D**2. **A**3. **D**4. **C**5. **A**6. **B**7. **D**8. **B**

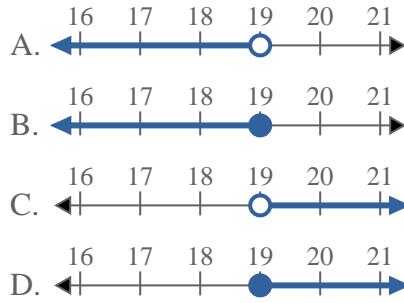


Risolvi ogni problema.

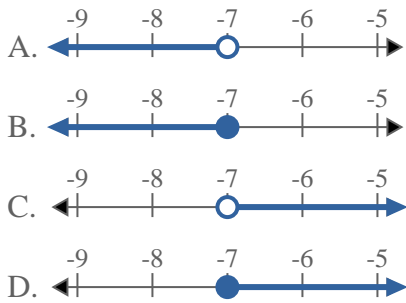
1) Quale opzione rappresenta correttamente $X \leq 11$



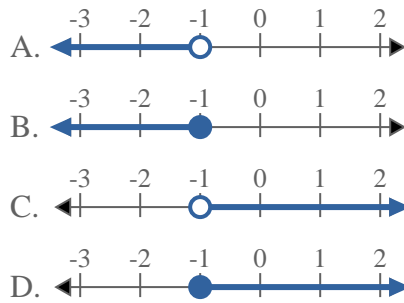
2) Quale opzione rappresenta correttamente $X < 19$



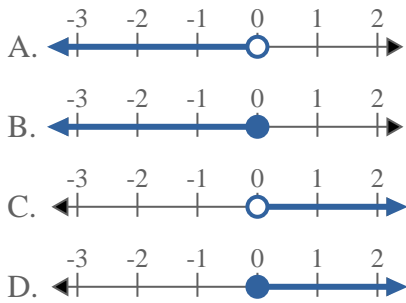
3) Quale opzione rappresenta correttamente $X < -7$



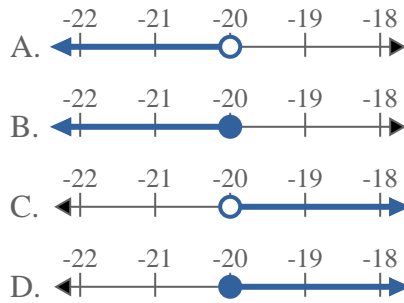
4) Quale opzione rappresenta correttamente $X \geq -1$



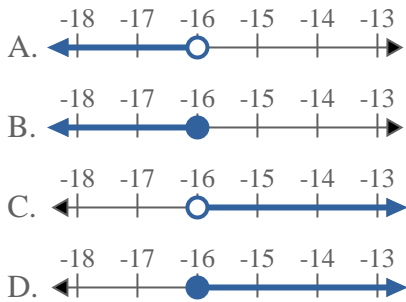
5) Quale opzione rappresenta correttamente $X \leq 0$



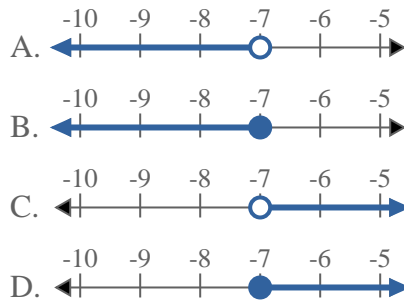
6) Quale opzione rappresenta correttamente $X < -20$



7) Quale opzione rappresenta correttamente $X < -16$



8) Quale opzione rappresenta correttamente $X \leq -7$



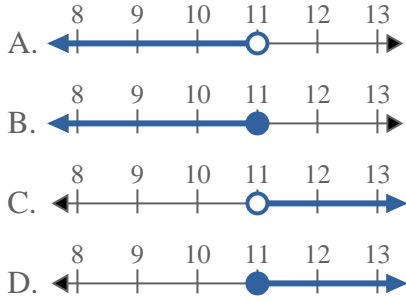
Risposte

1. _____
2. _____
3. _____
4. _____
5. _____
6. _____
7. _____
8. _____

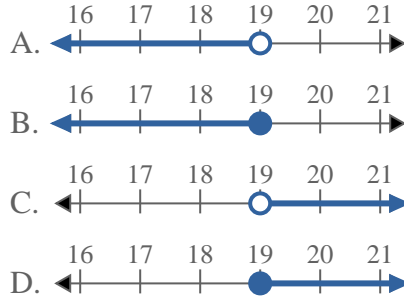


Risolvi ogni problema.

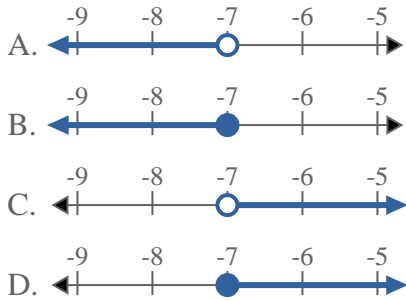
1) Quale opzione rappresenta correttamente $X \leq 11$



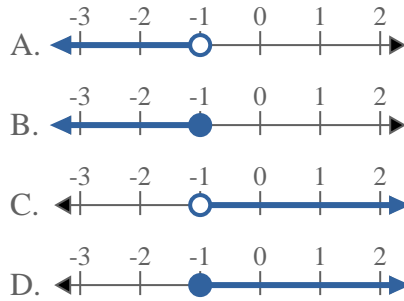
2) Quale opzione rappresenta correttamente $X < 19$



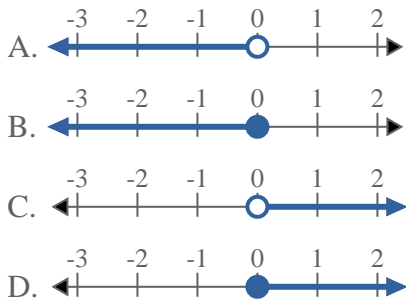
3) Quale opzione rappresenta correttamente $X < -7$



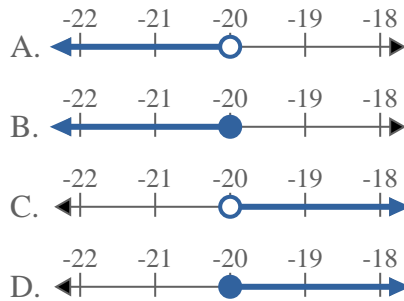
4) Quale opzione rappresenta correttamente $X \geq -1$



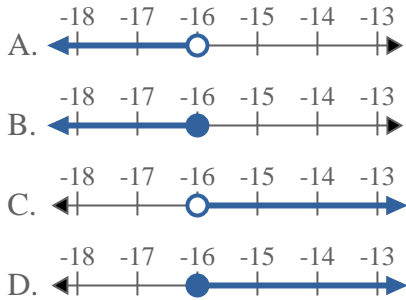
5) Quale opzione rappresenta correttamente $X \leq 0$



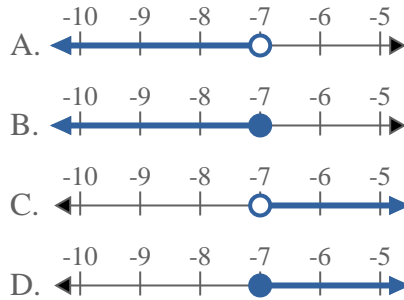
6) Quale opzione rappresenta correttamente $X < -20$



7) Quale opzione rappresenta correttamente $X < -16$



8) Quale opzione rappresenta correttamente $X \leq -7$



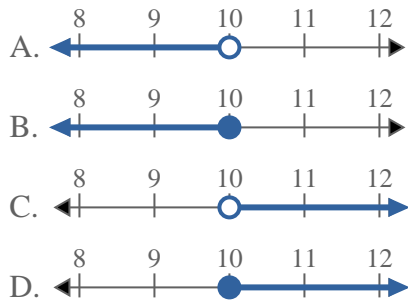
Risposte

1. **B**
2. **A**
3. **A**
4. **D**
5. **B**
6. **A**
7. **A**
8. **B**

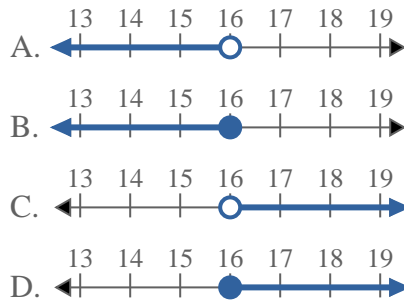


Risolvi ogni problema.

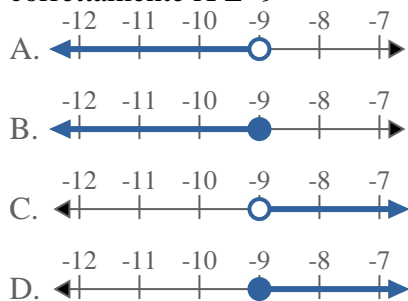
1) Quale opzione rappresenta correttamente $X < 10$



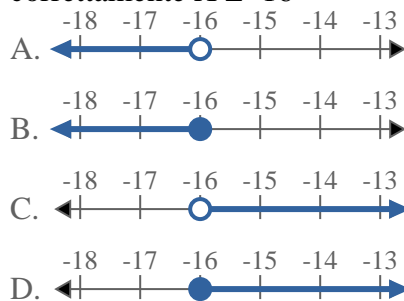
2) Quale opzione rappresenta correttamente $X < 16$



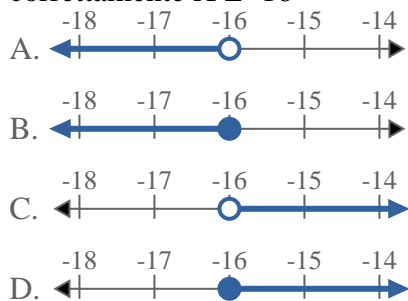
3) Quale opzione rappresenta correttamente $X \leq -9$



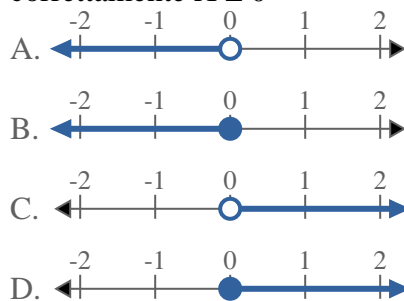
4) Quale opzione rappresenta correttamente $X \leq -16$



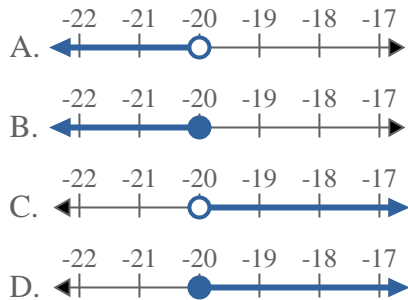
5) Quale opzione rappresenta correttamente $X \geq -16$



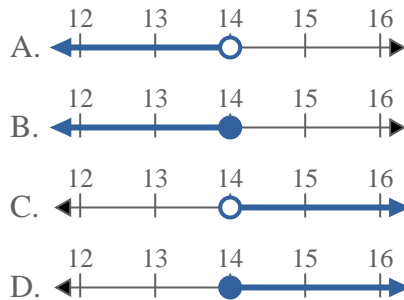
6) Quale opzione rappresenta correttamente $X \leq 0$



7) Quale opzione rappresenta correttamente $X > -20$

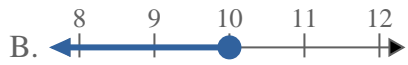
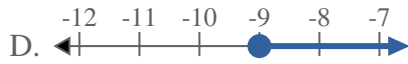
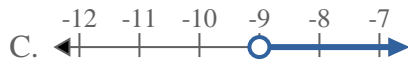
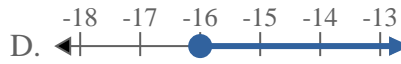
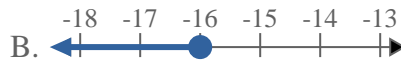
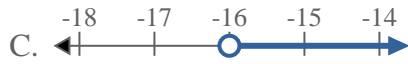
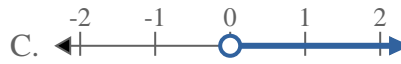


8) Quale opzione rappresenta correttamente $X > 14$



Risposte

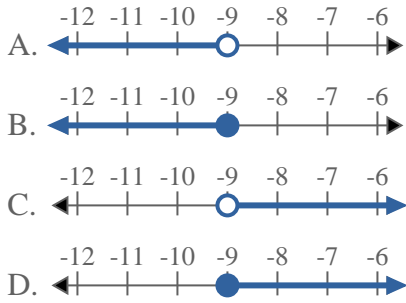
1. _____
2. _____
3. _____
4. _____
5. _____
6. _____
7. _____
8. _____

**Risolvi ogni problema.**1) Quale opzione rappresenta correttamente $X < 10$ 2) Quale opzione rappresenta correttamente $X < 16$ 3) Quale opzione rappresenta correttamente $X \leq -9$ 4) Quale opzione rappresenta correttamente $X \leq -16$ 5) Quale opzione rappresenta correttamente $X \geq -16$ 6) Quale opzione rappresenta correttamente $X \leq 0$ 7) Quale opzione rappresenta correttamente $X > -20$ 8) Quale opzione rappresenta correttamente $X > 14$ **Risposte**1. **A** 2. **A** 3. **B** 4. **B** 5. **D** 6. **B** 7. **C** 8. **C**

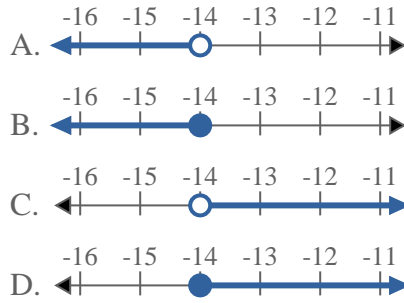


Risolvi ogni problema.

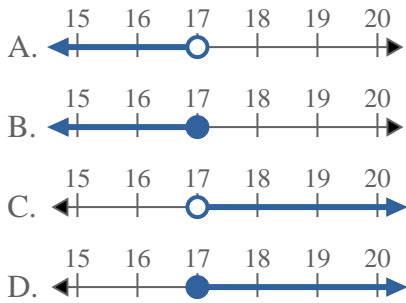
1) Quale opzione rappresenta correttamente $X < -9$



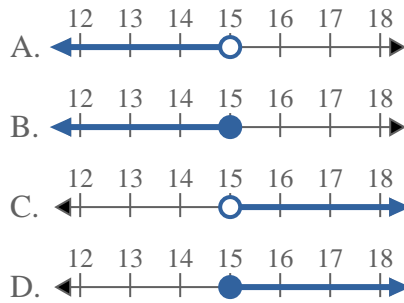
2) Quale opzione rappresenta correttamente $X > -14$



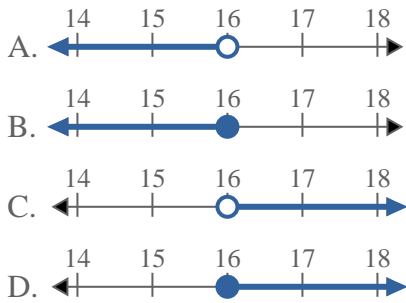
3) Quale opzione rappresenta correttamente $X \leq 17$



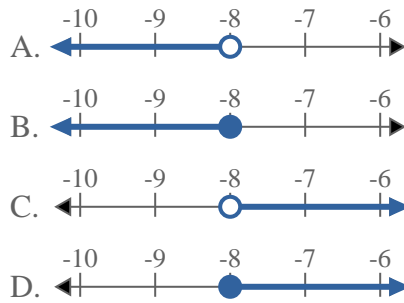
4) Quale opzione rappresenta correttamente $X \leq 15$



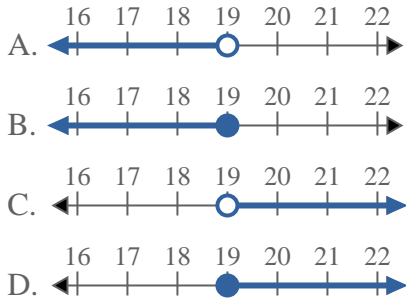
5) Quale opzione rappresenta correttamente $X > 16$



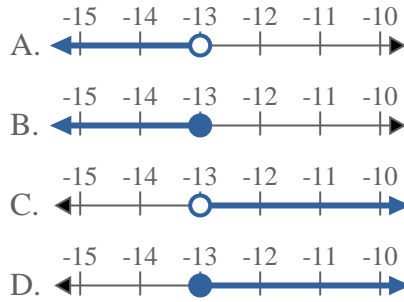
6) Quale opzione rappresenta correttamente $X < -8$



7) Quale opzione rappresenta correttamente $X < 19$

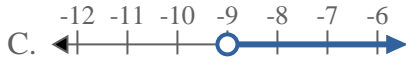
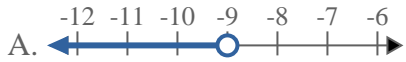
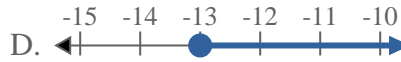
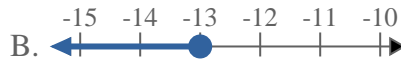


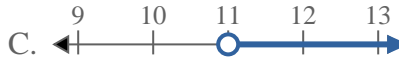
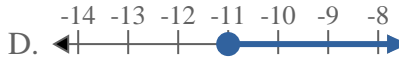
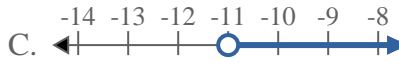
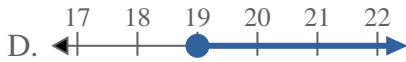
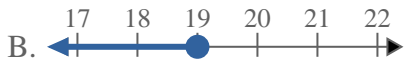
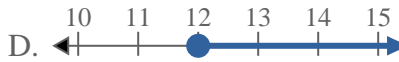
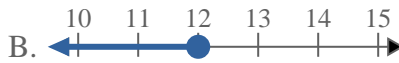
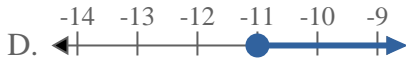
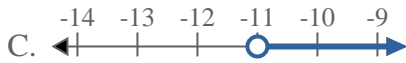
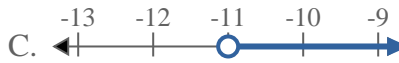
8) Quale opzione rappresenta correttamente $X \leq -13$



Risposte

1. _____
2. _____
3. _____
4. _____
5. _____
6. _____
7. _____
8. _____

**Risolvi ogni problema.**1) Quale opzione rappresenta correttamente $X < -9$ 2) Quale opzione rappresenta correttamente $X > -14$ 3) Quale opzione rappresenta correttamente $X \leq 17$ 4) Quale opzione rappresenta correttamente $X \leq 15$ 5) Quale opzione rappresenta correttamente $X > 16$ 6) Quale opzione rappresenta correttamente $X < -8$ 7) Quale opzione rappresenta correttamente $X < 19$ 8) Quale opzione rappresenta correttamente $X \leq -13$ **Risposte**1. **A** 2. **C** 3. **B** 4. **B** 5. **C** 6. **A** 7. **A** 8. **B**

**Risolvi ogni problema.**1) Quale opzione rappresenta correttamente $X \leq 4$ 2) Quale opzione rappresenta correttamente $X > 11$ 3) Quale opzione rappresenta correttamente $X < 7$ 4) Quale opzione rappresenta correttamente $X \geq -11$ 5) Quale opzione rappresenta correttamente $X > 19$ 6) Quale opzione rappresenta correttamente $X \leq 12$ 7) Quale opzione rappresenta correttamente $X \geq -11$ 8) Quale opzione rappresenta correttamente $X < -11$ **Risposte**

1. _____

2. _____

3. _____

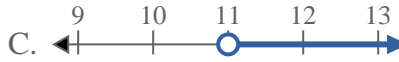
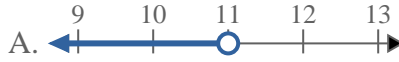
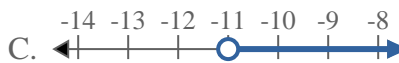
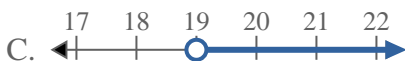
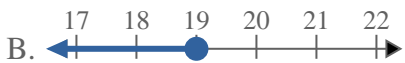
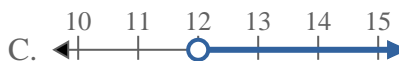
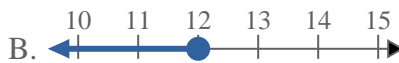
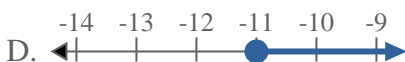
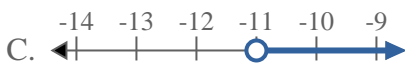
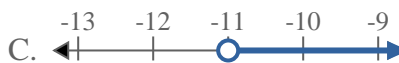
4. _____

5. _____

6. _____

7. _____

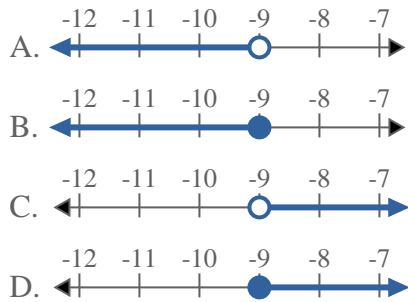
8. _____

**Risolvi ogni problema.**1) Quale opzione rappresenta correttamente $X \leq 4$ 2) Quale opzione rappresenta correttamente $X > 11$ 3) Quale opzione rappresenta correttamente $X < 7$ 4) Quale opzione rappresenta correttamente $X \geq -11$ 5) Quale opzione rappresenta correttamente $X > 19$ 6) Quale opzione rappresenta correttamente $X \leq 12$ 7) Quale opzione rappresenta correttamente $X \geq -11$ 8) Quale opzione rappresenta correttamente $X < -11$ **Risposte**1. **B** 2. **C** 3. **A** 4. **D** 5. **C** 6. **B** 7. **D** 8. **A**

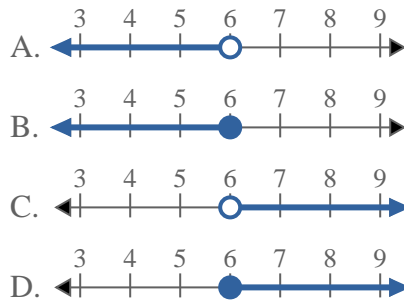


Risolvi ogni problema.

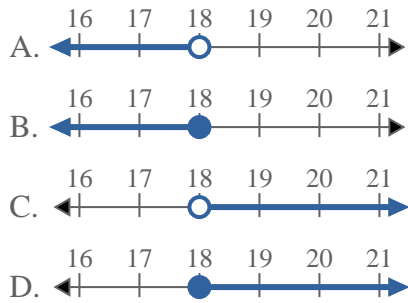
1) Quale opzione rappresenta correttamente $X \leq -9$



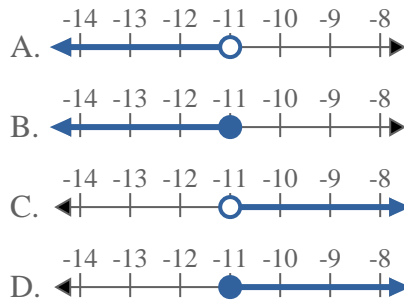
2) Quale opzione rappresenta correttamente $X \leq 6$



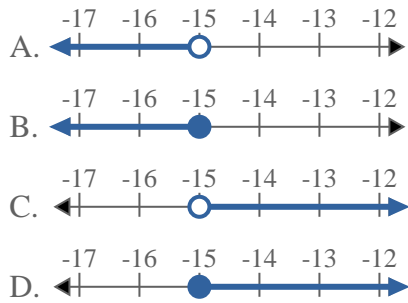
3) Quale opzione rappresenta correttamente $X \geq 18$



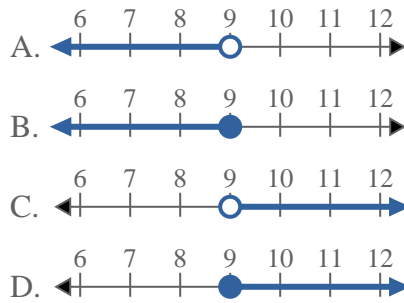
4) Quale opzione rappresenta correttamente $X < -11$



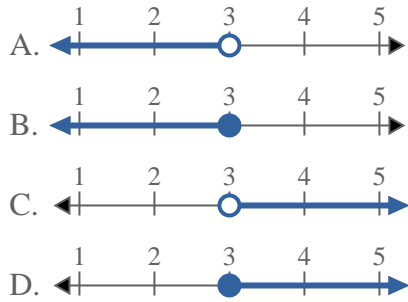
5) Quale opzione rappresenta correttamente $X > -15$



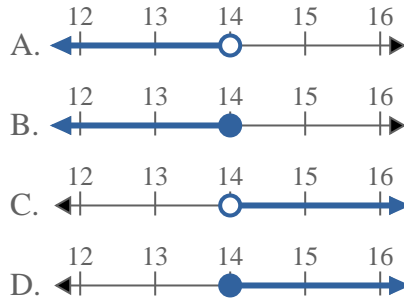
6) Quale opzione rappresenta correttamente $X \leq 9$



7) Quale opzione rappresenta correttamente $X > 3$

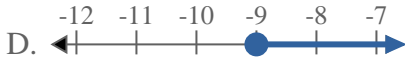
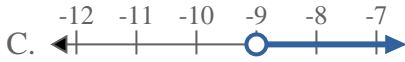
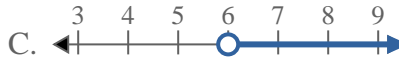
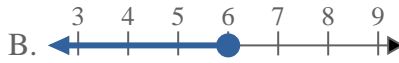
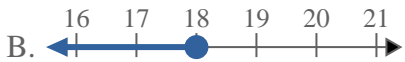
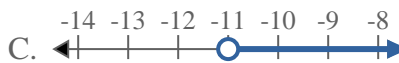
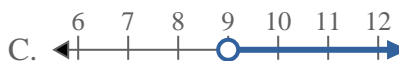
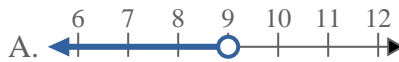
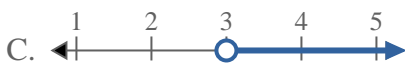


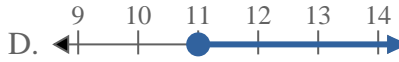
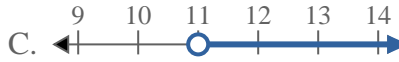
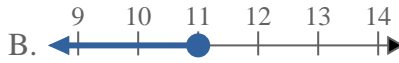
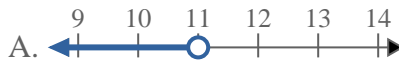
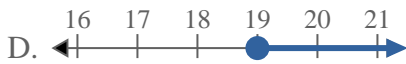
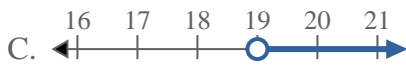
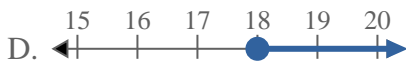
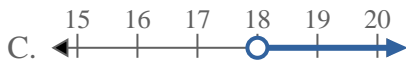
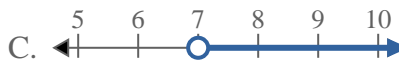
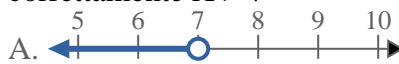
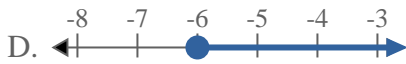
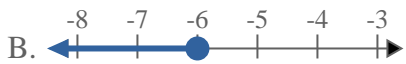
8) Quale opzione rappresenta correttamente $X \geq 14$



Risposte

1. _____
2. _____
3. _____
4. _____
5. _____
6. _____
7. _____
8. _____

**Risolvi ogni problema.**1) Quale opzione rappresenta correttamente $X \leq -9$ 2) Quale opzione rappresenta correttamente $X \leq 6$ 3) Quale opzione rappresenta correttamente $X \geq 18$ 4) Quale opzione rappresenta correttamente $X < -11$ 5) Quale opzione rappresenta correttamente $X > -15$ 6) Quale opzione rappresenta correttamente $X \leq 9$ 7) Quale opzione rappresenta correttamente $X > 3$ 8) Quale opzione rappresenta correttamente $X \geq 14$ **Risposte**1. **B**2. **B**3. **D**4. **A**5. **C**6. **B**7. **C**8. **D**

**Risolvi ogni problema.**1) Quale opzione rappresenta correttamente $X \leq 7$ 2) Quale opzione rappresenta correttamente $X < 11$ 3) Quale opzione rappresenta correttamente $X > 19$ 4) Quale opzione rappresenta correttamente $X \leq 18$ 5) Quale opzione rappresenta correttamente $X \leq 18$ 6) Quale opzione rappresenta correttamente $X > 7$ 7) Quale opzione rappresenta correttamente $X > -6$ 8) Quale opzione rappresenta correttamente $X \leq 8$ **Risposte**

1. _____

2. _____

3. _____

4. _____

5. _____

6. _____

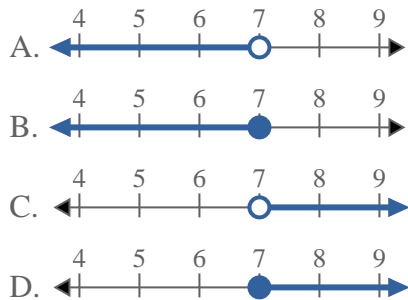
7. _____

8. _____

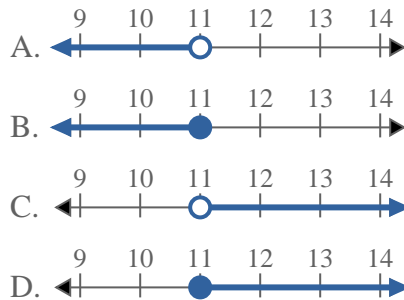


Risolvi ogni problema.

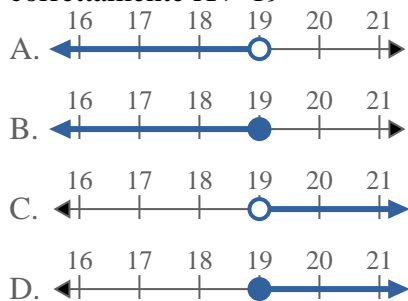
1) Quale opzione rappresenta correttamente $X \leq 7$



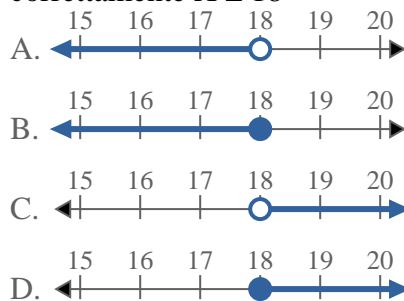
2) Quale opzione rappresenta correttamente $X < 11$



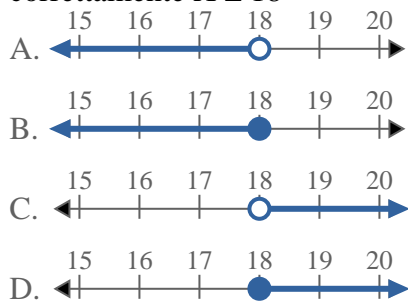
3) Quale opzione rappresenta correttamente $X > 19$



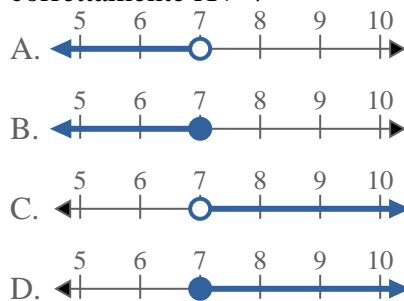
4) Quale opzione rappresenta correttamente $X \leq 18$



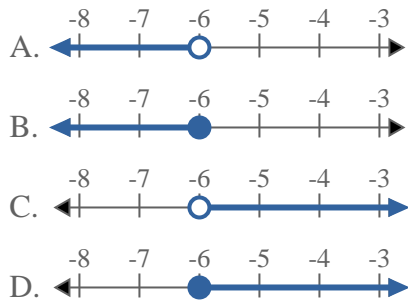
5) Quale opzione rappresenta correttamente $X \leq 18$



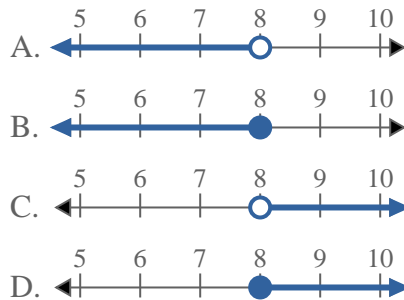
6) Quale opzione rappresenta correttamente $X > 7$



7) Quale opzione rappresenta correttamente $X > -6$

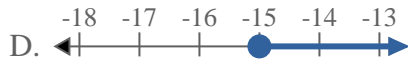
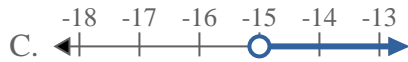
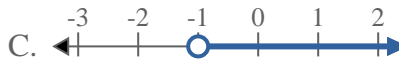
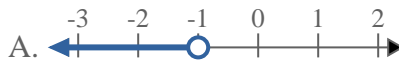
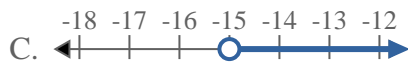
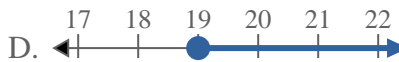
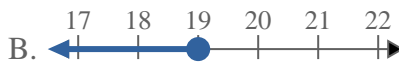
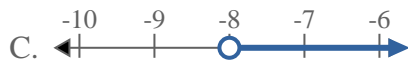
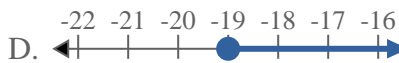
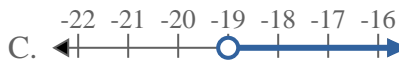
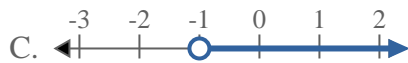
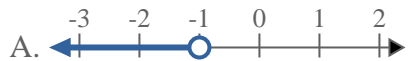
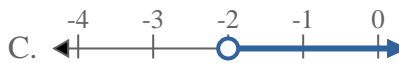


8) Quale opzione rappresenta correttamente $X \leq 8$



Risposte

1. **B**
2. **A**
3. **C**
4. **B**
5. **B**
6. **C**
7. **C**
8. **B**

**Risolvi ogni problema.**1) Quale opzione rappresenta correttamente $X < -15$ 2) Quale opzione rappresenta correttamente $X < -1$ 3) Quale opzione rappresenta correttamente $X < -15$ 4) Quale opzione rappresenta correttamente $X \leq 19$ 5) Quale opzione rappresenta correttamente $X > -8$ 6) Quale opzione rappresenta correttamente $X \leq -19$ 7) Quale opzione rappresenta correttamente $X < -1$ 8) Quale opzione rappresenta correttamente $X \leq -2$ **Risposte**

1. _____

2. _____

3. _____

4. _____

5. _____

6. _____

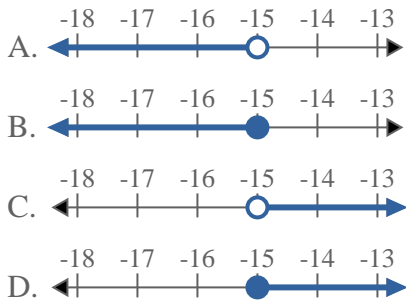
7. _____

8. _____

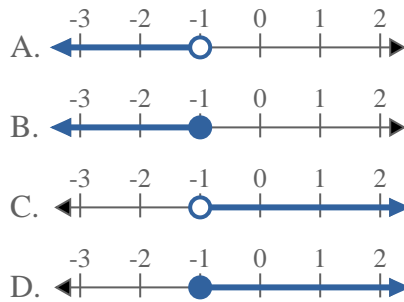


Risolvi ogni problema.

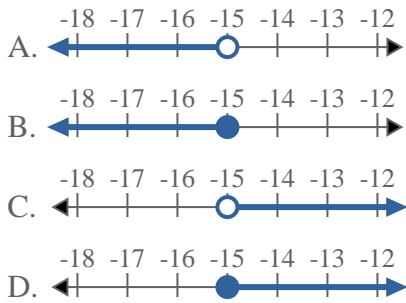
1) Quale opzione rappresenta correttamente $X < -15$



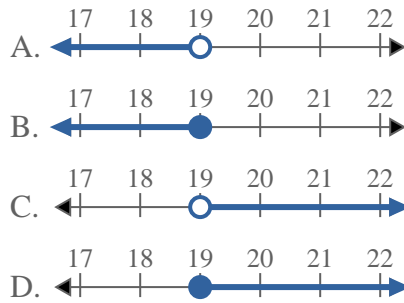
2) Quale opzione rappresenta correttamente $X < -1$



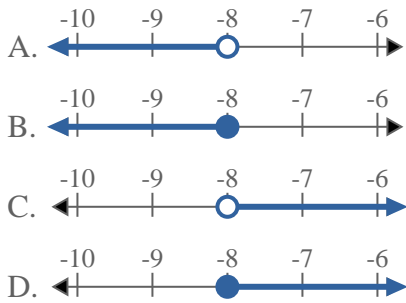
3) Quale opzione rappresenta correttamente $X < -15$



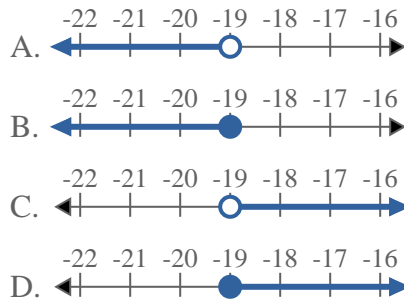
4) Quale opzione rappresenta correttamente $X \leq 19$



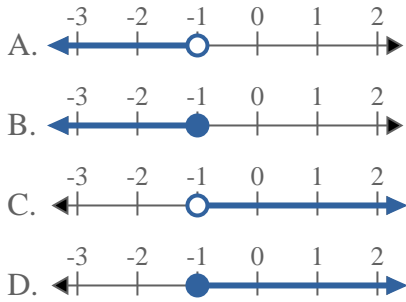
5) Quale opzione rappresenta correttamente $X > -8$



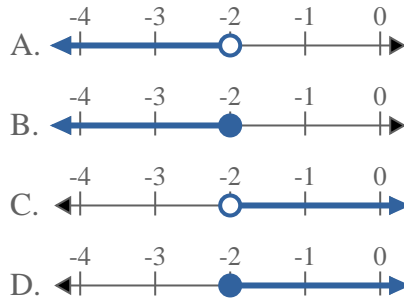
6) Quale opzione rappresenta correttamente $X \leq -19$



7) Quale opzione rappresenta correttamente $X < -1$



8) Quale opzione rappresenta correttamente $X \leq -2$



Risposte

1. **A**
2. **A**
3. **A**
4. **B**
5. **C**
6. **B**
7. **A**
8. **B**