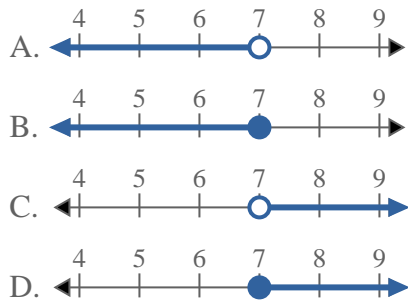


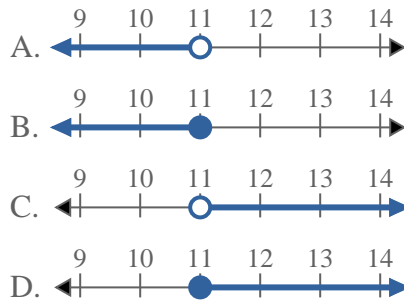


Risolvi ogni problema.

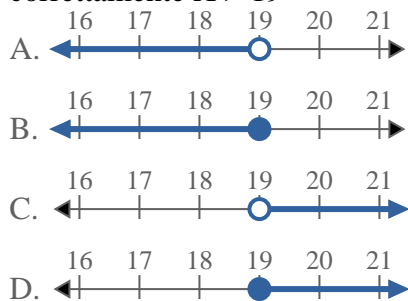
1) Quale opzione rappresenta correttamente $X \leq 7$



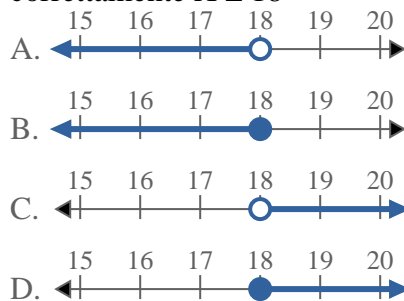
2) Quale opzione rappresenta correttamente $X < 11$



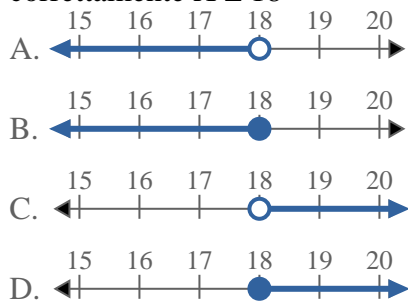
3) Quale opzione rappresenta correttamente $X > 19$



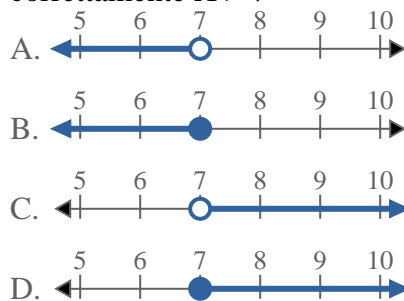
4) Quale opzione rappresenta correttamente $X \leq 18$



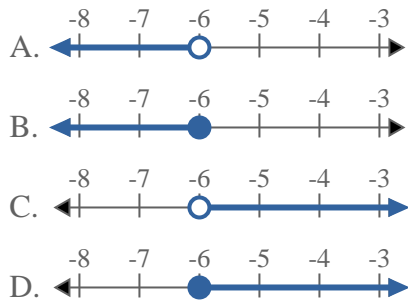
5) Quale opzione rappresenta correttamente $X \leq 18$



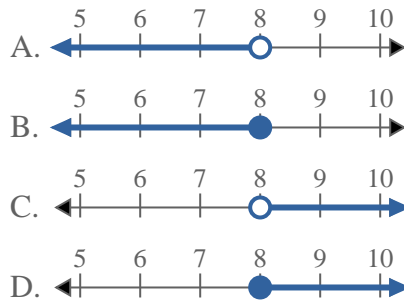
6) Quale opzione rappresenta correttamente $X > 7$



7) Quale opzione rappresenta correttamente $X > -6$

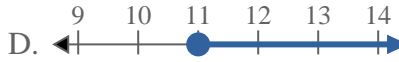
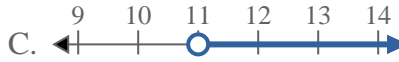
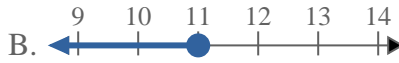
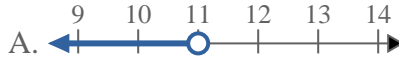
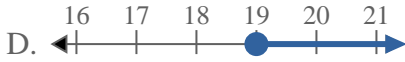
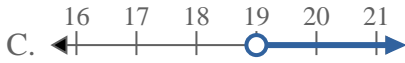
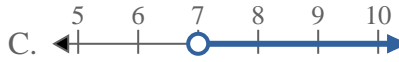
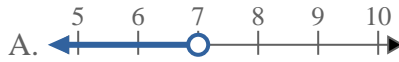
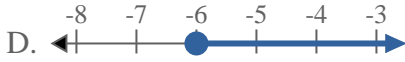
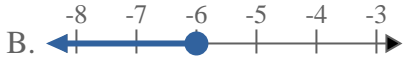


8) Quale opzione rappresenta correttamente $X \leq 8$



Risposte

1. _____
2. _____
3. _____
4. _____
5. _____
6. _____
7. _____
8. _____

**Risolvi ogni problema.**1) Quale opzione rappresenta correttamente $X \leq 7$ 2) Quale opzione rappresenta correttamente $X < 11$ 3) Quale opzione rappresenta correttamente $X > 19$ 4) Quale opzione rappresenta correttamente $X \leq 18$ 5) Quale opzione rappresenta correttamente $X \leq 18$ 6) Quale opzione rappresenta correttamente $X > 7$ 7) Quale opzione rappresenta correttamente $X > -6$ 8) Quale opzione rappresenta correttamente $X \leq 8$ **Risposte**1. **B**2. **A**3. **C**4. **B**5. **B**6. **C**7. **C**8. **B**