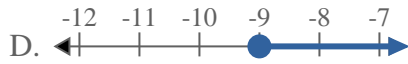
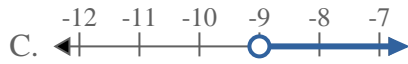
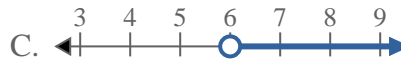
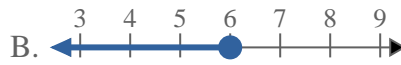
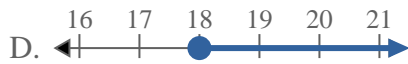
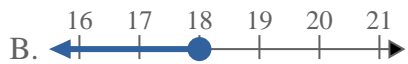
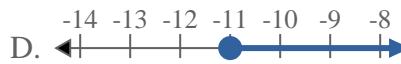
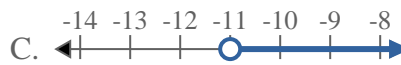
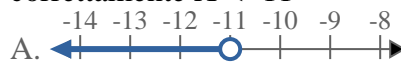
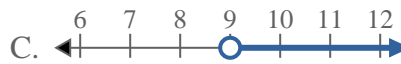
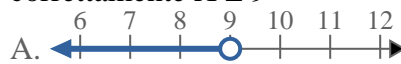



**Risolvi ogni problema.**1) Quale opzione rappresenta correttamente $X \leq -9$ 2) Quale opzione rappresenta correttamente $X \leq 6$ 3) Quale opzione rappresenta correttamente $X \geq 18$ 4) Quale opzione rappresenta correttamente $X < -11$ 5) Quale opzione rappresenta correttamente $X > -15$ 6) Quale opzione rappresenta correttamente $X \leq 9$ 7) Quale opzione rappresenta correttamente $X > 3$ 8) Quale opzione rappresenta correttamente $X \geq 14$ **Risposte**

1. _____

2. _____

3. _____

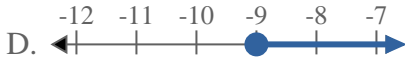
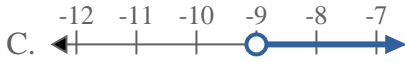
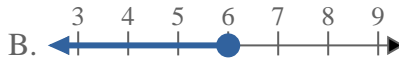
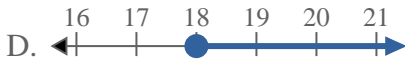
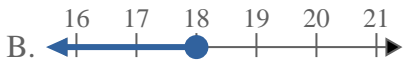
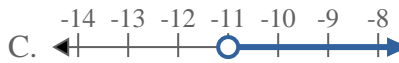
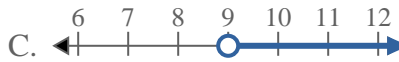
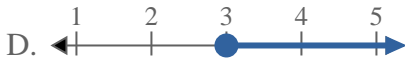

4. _____

5. _____

6. _____

7. _____

8. _____

**Risolvi ogni problema.**1) Quale opzione rappresenta correttamente $X \leq -9$ 2) Quale opzione rappresenta correttamente $X \leq 6$ 3) Quale opzione rappresenta correttamente $X \geq 18$ 4) Quale opzione rappresenta correttamente $X < -11$ 5) Quale opzione rappresenta correttamente $X > -15$ 6) Quale opzione rappresenta correttamente $X \leq 9$ 7) Quale opzione rappresenta correttamente $X > 3$ 8) Quale opzione rappresenta correttamente $X \geq 14$ **Risposte**1. **B**2. **B**3. **D**4. **A**5. **C**6. **B**7. **C**8. **D**