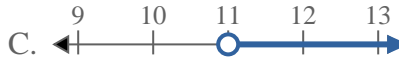
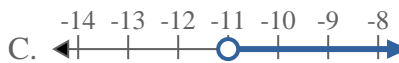
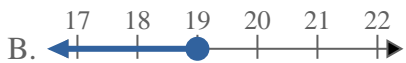
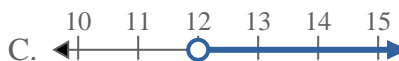
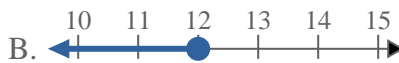
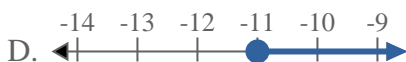
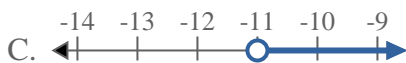
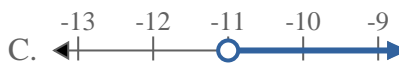


**Risolvi ogni problema.**1) Quale opzione rappresenta correttamente  $X \leq 4$ 2) Quale opzione rappresenta correttamente  $X > 11$ 3) Quale opzione rappresenta correttamente  $X < 7$ 4) Quale opzione rappresenta correttamente  $X \geq -11$ 5) Quale opzione rappresenta correttamente  $X > 19$ 6) Quale opzione rappresenta correttamente  $X \leq 12$ 7) Quale opzione rappresenta correttamente  $X \geq -11$ 8) Quale opzione rappresenta correttamente  $X < -11$ **Risposte**

1. \_\_\_\_\_

2. \_\_\_\_\_

3. \_\_\_\_\_

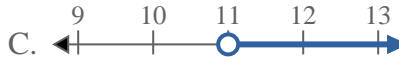
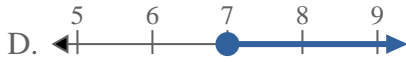
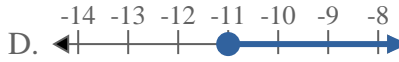
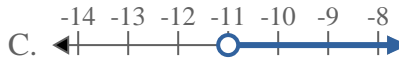
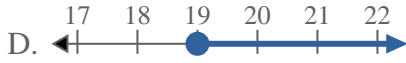
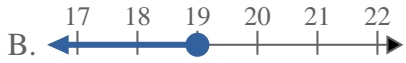
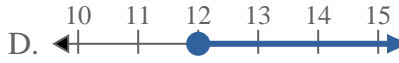
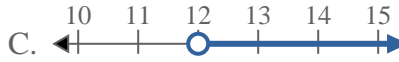
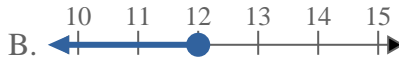
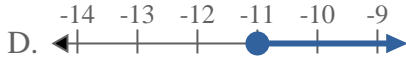
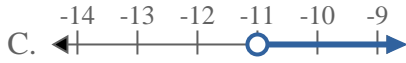
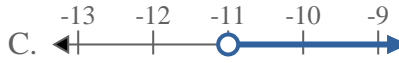
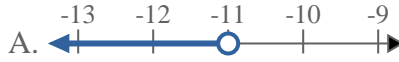
4. \_\_\_\_\_

5. \_\_\_\_\_

6. \_\_\_\_\_

7. \_\_\_\_\_

8. \_\_\_\_\_

**Risolvi ogni problema.**1) Quale opzione rappresenta correttamente  $X \leq 4$ 2) Quale opzione rappresenta correttamente  $X > 11$ 3) Quale opzione rappresenta correttamente  $X < 7$ 4) Quale opzione rappresenta correttamente  $X \geq -11$ 5) Quale opzione rappresenta correttamente  $X > 19$ 6) Quale opzione rappresenta correttamente  $X \leq 12$ 7) Quale opzione rappresenta correttamente  $X \geq -11$ 8) Quale opzione rappresenta correttamente  $X < -11$ **Risposte**1.     **B**    2.     **C**    3.     **A**    4.     **D**    5.     **C**    6.     **B**    7.     **D**    8.     **A**