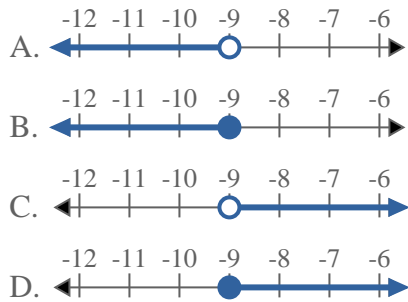


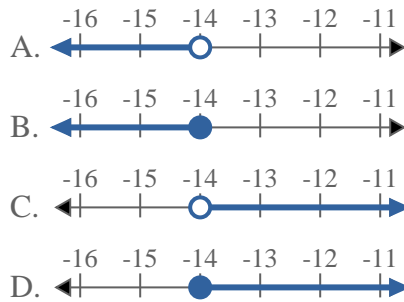


**Risolvi ogni problema.**

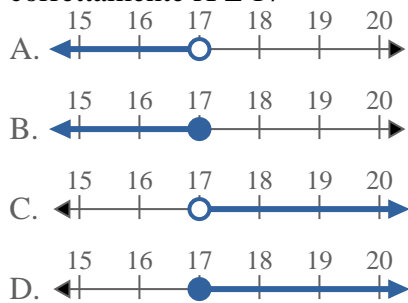
1) Quale opzione rappresenta correttamente  $X < -9$



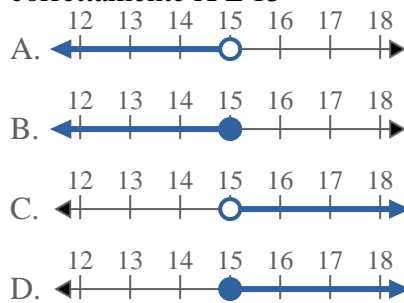
2) Quale opzione rappresenta correttamente  $X > -14$



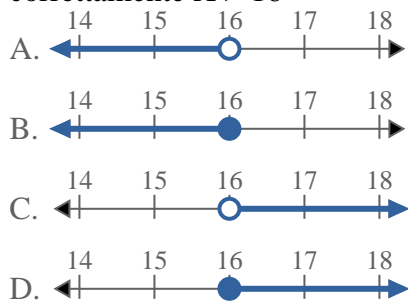
3) Quale opzione rappresenta correttamente  $X \leq 17$



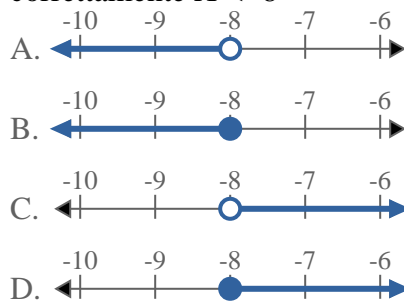
4) Quale opzione rappresenta correttamente  $X \leq 15$



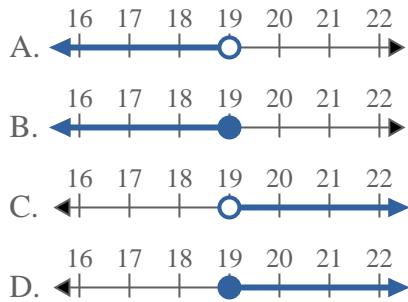
5) Quale opzione rappresenta correttamente  $X > 16$



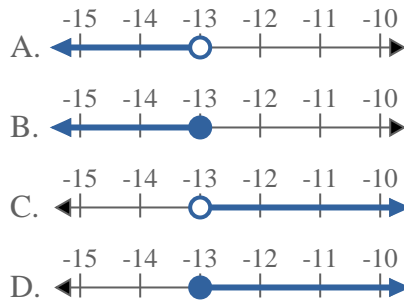
6) Quale opzione rappresenta correttamente  $X < -8$



7) Quale opzione rappresenta correttamente  $X < 19$

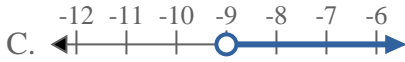
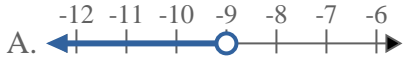
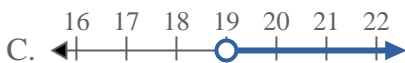
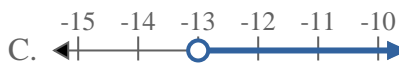


8) Quale opzione rappresenta correttamente  $X \leq -13$



**Risposte**

1. \_\_\_\_\_
2. \_\_\_\_\_
3. \_\_\_\_\_
4. \_\_\_\_\_
5. \_\_\_\_\_
6. \_\_\_\_\_
7. \_\_\_\_\_
8. \_\_\_\_\_

**Risolvi ogni problema.**1) Quale opzione rappresenta correttamente  $X < -9$ 2) Quale opzione rappresenta correttamente  $X > -14$ 3) Quale opzione rappresenta correttamente  $X \leq 17$ 4) Quale opzione rappresenta correttamente  $X \leq 15$ 5) Quale opzione rappresenta correttamente  $X > 16$ 6) Quale opzione rappresenta correttamente  $X < -8$ 7) Quale opzione rappresenta correttamente  $X < 19$ 8) Quale opzione rappresenta correttamente  $X \leq -13$ **Risposte**1.     **A**    2.     **C**    3.     **B**    4.     **B**    5.     **C**    6.     **A**    7.     **A**    8.     **B**