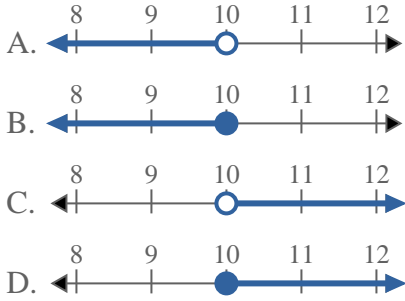


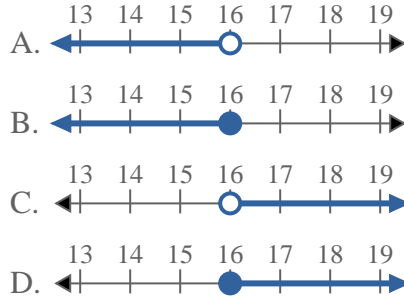


Risolvi ogni problema.

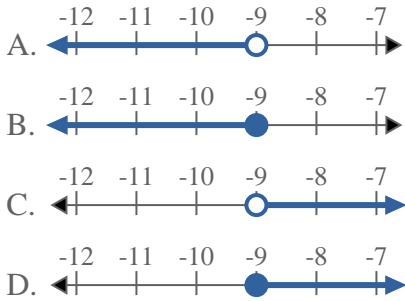
1) Quale opzione rappresenta correttamente $X < 10$



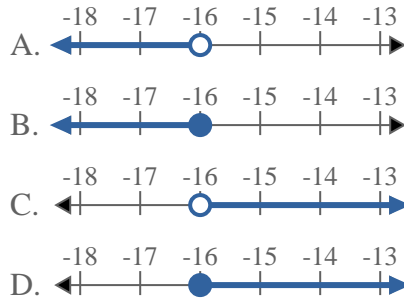
2) Quale opzione rappresenta correttamente $X < 16$



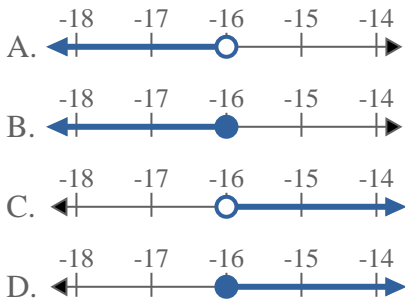
3) Quale opzione rappresenta correttamente $X \leq -9$



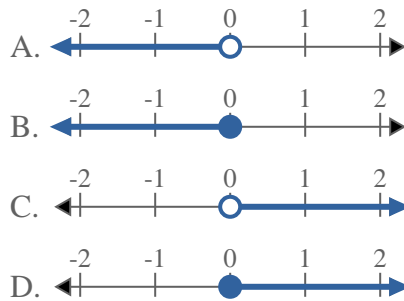
4) Quale opzione rappresenta correttamente $X \leq -16$



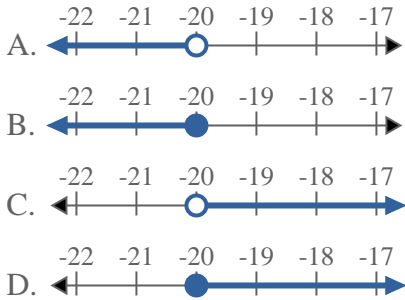
5) Quale opzione rappresenta correttamente $X \geq -16$



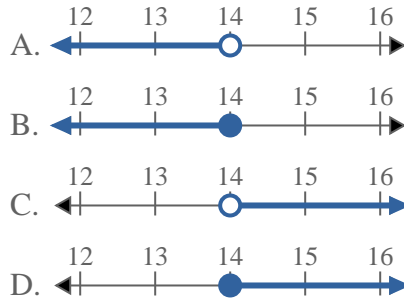
6) Quale opzione rappresenta correttamente $X \leq 0$



7) Quale opzione rappresenta correttamente $X > -20$

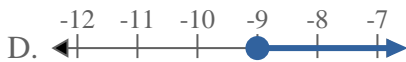
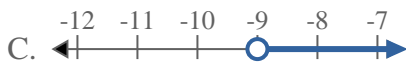
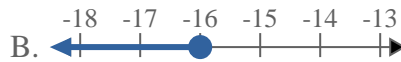
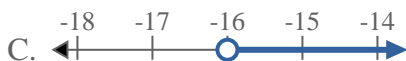


8) Quale opzione rappresenta correttamente $X > 14$



Risposte

1. _____
2. _____
3. _____
4. _____
5. _____
6. _____
7. _____
8. _____

**Risolvi ogni problema.**1) Quale opzione rappresenta correttamente $X < 10$ 2) Quale opzione rappresenta correttamente $X < 16$ 3) Quale opzione rappresenta correttamente $X \leq -9$ 4) Quale opzione rappresenta correttamente $X \leq -16$ 5) Quale opzione rappresenta correttamente $X \geq -16$ 6) Quale opzione rappresenta correttamente $X \leq 0$ 7) Quale opzione rappresenta correttamente $X > -20$ 8) Quale opzione rappresenta correttamente $X > 14$ **Risposte**1. **A** 2. **A** 3. **B** 4. **B** 5. **D** 6. **B** 7. **C** 8. **C**