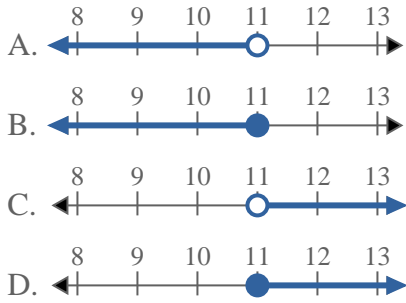


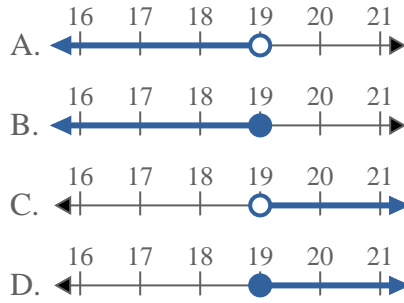


Risolvi ogni problema.

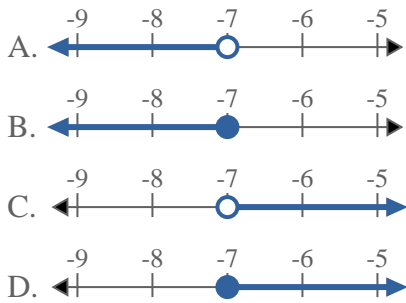
1) Quale opzione rappresenta correttamente $X \leq 11$



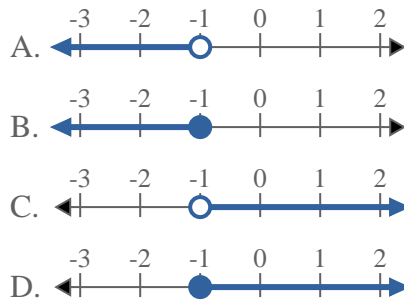
2) Quale opzione rappresenta correttamente $X < 19$



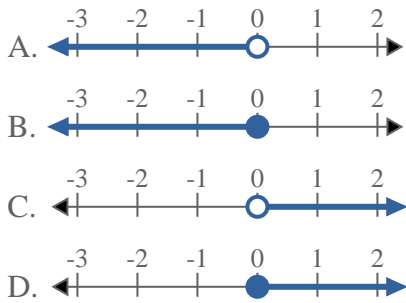
3) Quale opzione rappresenta correttamente $X < -7$



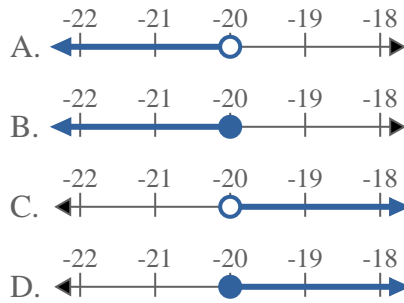
4) Quale opzione rappresenta correttamente $X \geq -1$



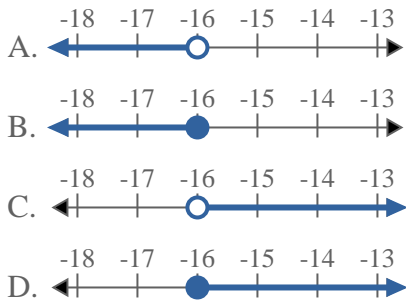
5) Quale opzione rappresenta correttamente $X \leq 0$



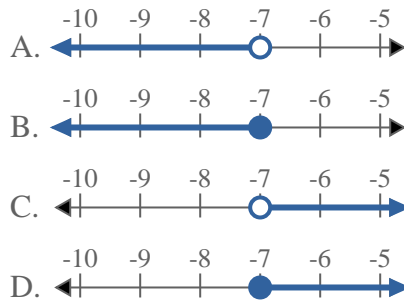
6) Quale opzione rappresenta correttamente $X < -20$



7) Quale opzione rappresenta correttamente $X < -16$



8) Quale opzione rappresenta correttamente $X \leq -7$



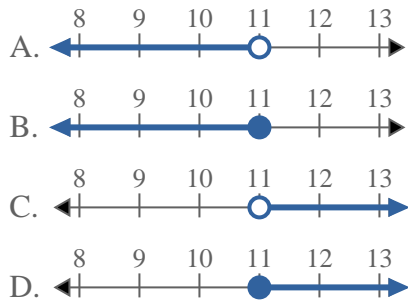
Risposte

1. _____
2. _____
3. _____
4. _____
5. _____
6. _____
7. _____
8. _____

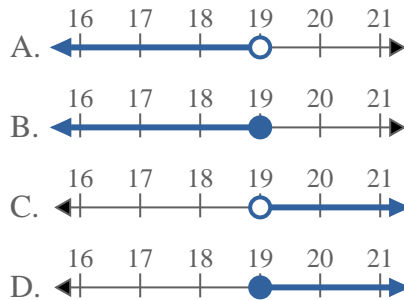


Risolvi ogni problema.

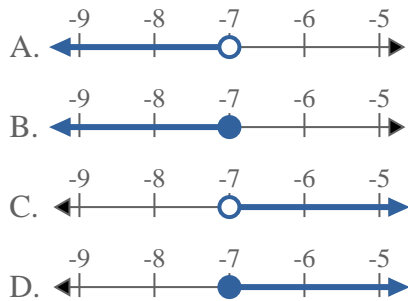
1) Quale opzione rappresenta correttamente $X \leq 11$



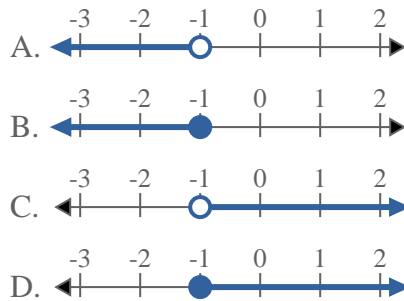
2) Quale opzione rappresenta correttamente $X < 19$



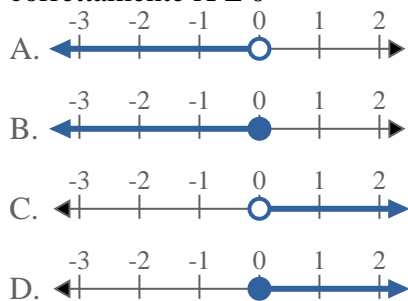
3) Quale opzione rappresenta correttamente $X < -7$



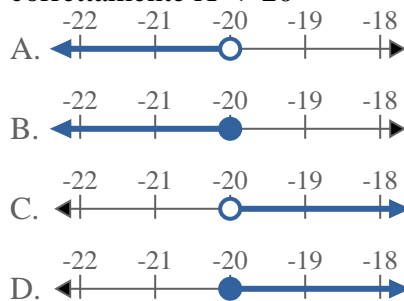
4) Quale opzione rappresenta correttamente $X \geq -1$



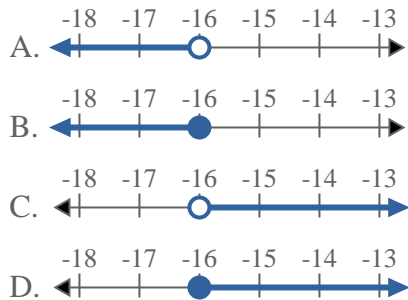
5) Quale opzione rappresenta correttamente $X \leq 0$



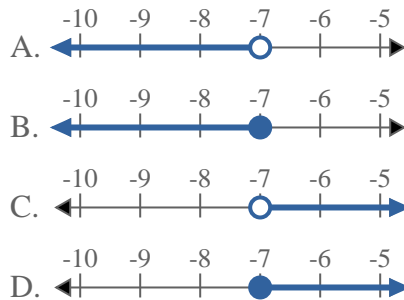
6) Quale opzione rappresenta correttamente $X < -20$



7) Quale opzione rappresenta correttamente $X < -16$



8) Quale opzione rappresenta correttamente $X \leq -7$



Risposte

1. **B**
2. **A**
3. **A**
4. **D**
5. **B**
6. **A**
7. **A**
8. **B**