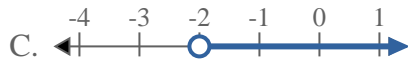
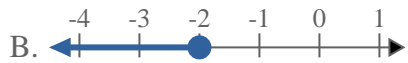
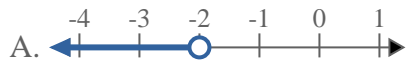
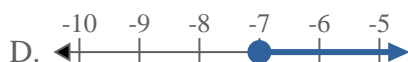
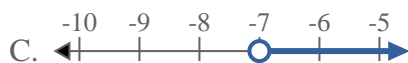
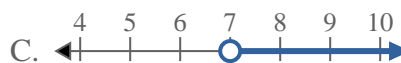
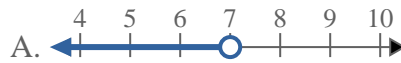
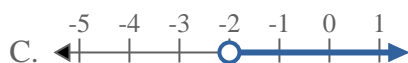
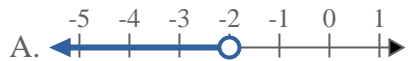


**Risolvi ogni problema.**1) Quale opzione rappresenta correttamente $X \geq -2$ 2) Quale opzione rappresenta correttamente $X < -17$ 3) Quale opzione rappresenta correttamente $X \geq -7$ 4) Quale opzione rappresenta correttamente $X > 7$ 5) Quale opzione rappresenta correttamente $X < -17$ 6) Quale opzione rappresenta correttamente $X \leq -20$ 7) Quale opzione rappresenta correttamente $X \geq -2$ 8) Quale opzione rappresenta correttamente $X \leq 14$ **Risposte**

1. _____

2. _____

3. _____

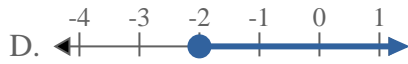
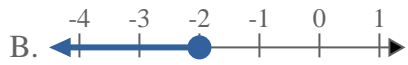
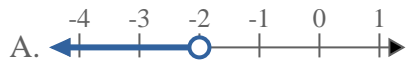
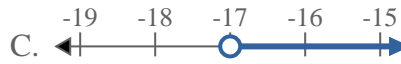
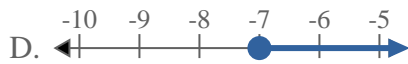
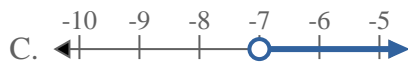
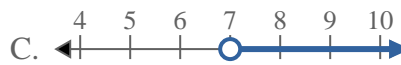
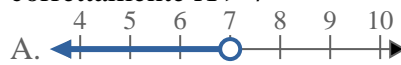
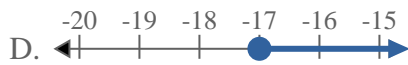
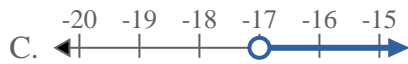
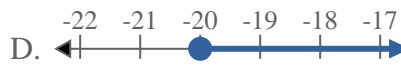
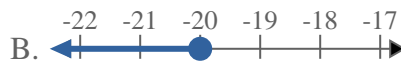
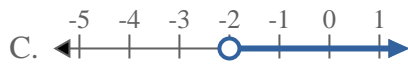
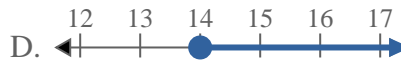
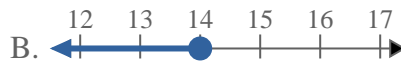
4. _____

5. _____

6. _____

7. _____

8. _____

**Risolvi ogni problema.**1) Quale opzione rappresenta correttamente $X \geq -2$ 2) Quale opzione rappresenta correttamente $X < -17$ 3) Quale opzione rappresenta correttamente $X \geq -7$ 4) Quale opzione rappresenta correttamente $X > 7$ 5) Quale opzione rappresenta correttamente $X < -17$ 6) Quale opzione rappresenta correttamente $X \leq -20$ 7) Quale opzione rappresenta correttamente $X \geq -2$ 8) Quale opzione rappresenta correttamente $X \leq 14$ **Risposte**1. **D**2. **A**3. **D**4. **C**5. **A**6. **B**7. **D**8. **B**