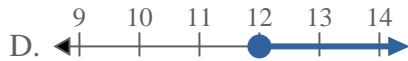
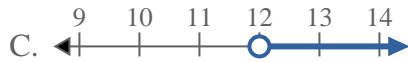
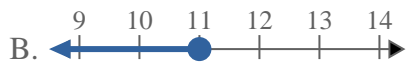
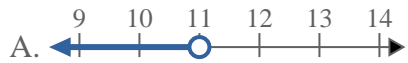
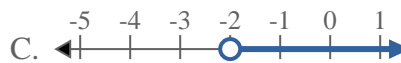
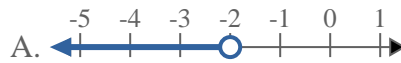
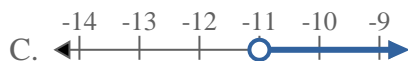
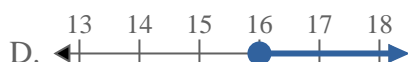
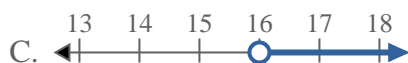


**Risolvi ogni problema.**1) Quale opzione rappresenta correttamente $X < 12$ 2) Quale opzione rappresenta correttamente $X < 14$ 3) Quale opzione rappresenta correttamente $X < 11$ 4) Quale opzione rappresenta correttamente $X \geq -2$ 5) Quale opzione rappresenta correttamente $X > -11$ 6) Quale opzione rappresenta correttamente $X < 17$ 7) Quale opzione rappresenta correttamente $X \geq 16$ 8) Quale opzione rappresenta correttamente $X \leq 19$ **Risposte**

1. _____

2. _____

3. _____

4. _____

5. _____

6. _____

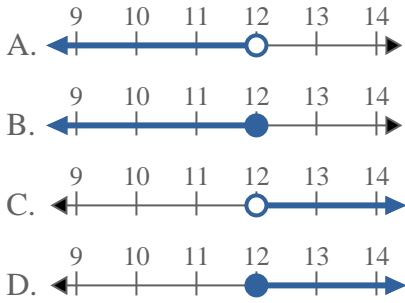
7. _____

8. _____

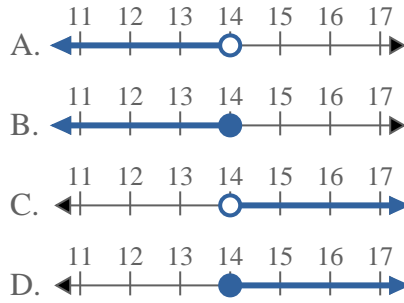


Risolvi ogni problema.

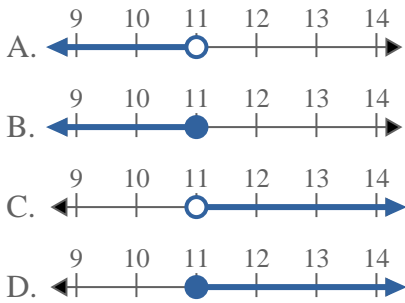
1) Quale opzione rappresenta correttamente $X < 12$



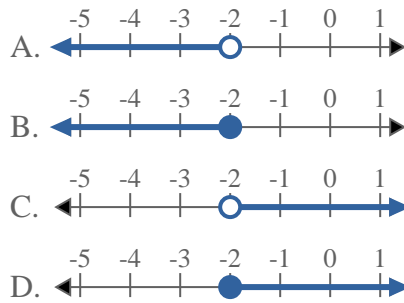
2) Quale opzione rappresenta correttamente $X < 14$



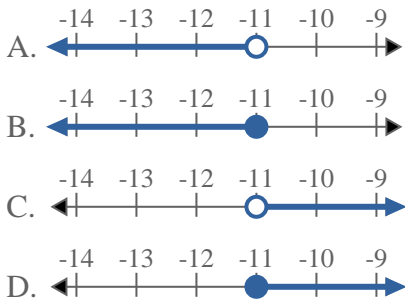
3) Quale opzione rappresenta correttamente $X < 11$



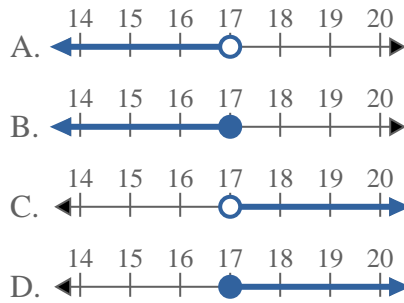
4) Quale opzione rappresenta correttamente $X \geq -2$



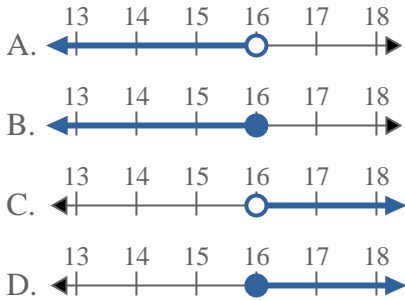
5) Quale opzione rappresenta correttamente $X > -11$



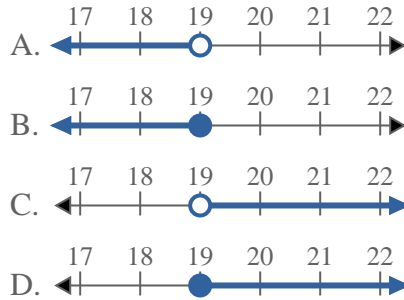
6) Quale opzione rappresenta correttamente $X < 17$



7) Quale opzione rappresenta correttamente $X \geq 16$



8) Quale opzione rappresenta correttamente $X \leq 19$



Risposte

1. **A**
2. **A**
3. **A**
4. **D**
5. **C**
6. **A**
7. **D**
8. **B**