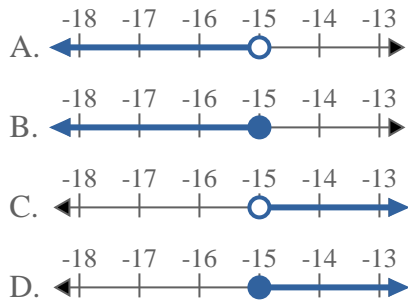


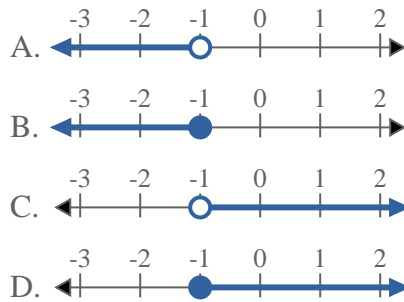


Risolvi ogni problema.

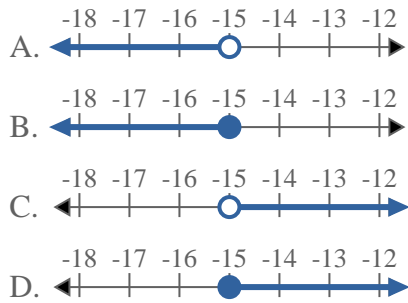
1) Quale opzione rappresenta correttamente $X < -15$



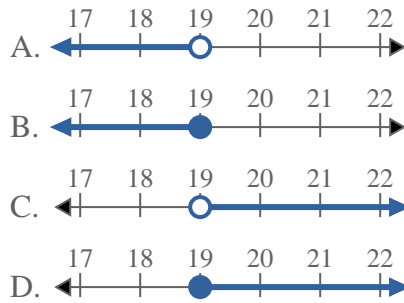
2) Quale opzione rappresenta correttamente $X < -1$



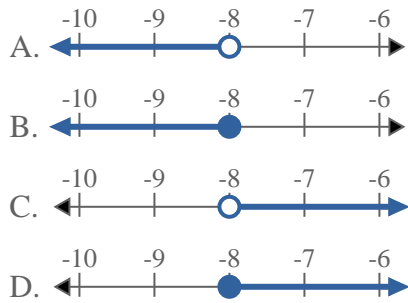
3) Quale opzione rappresenta correttamente $X < -15$



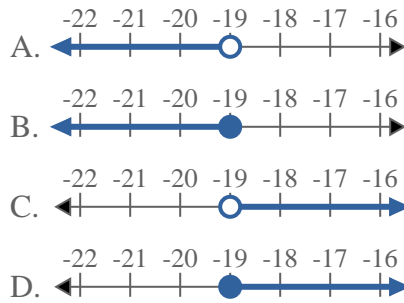
4) Quale opzione rappresenta correttamente $X \leq 19$



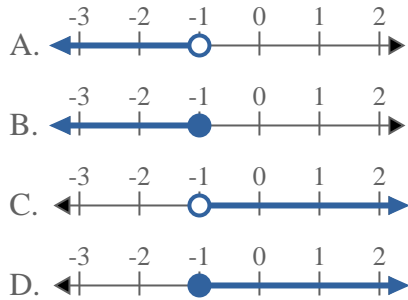
5) Quale opzione rappresenta correttamente $X > -8$



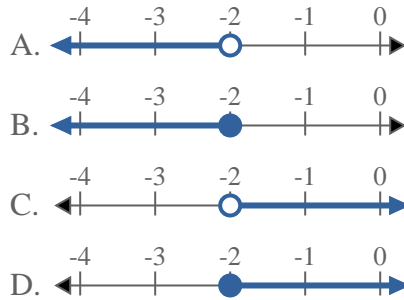
6) Quale opzione rappresenta correttamente $X \leq -19$



7) Quale opzione rappresenta correttamente $X < -1$

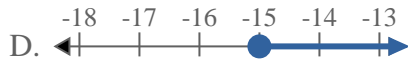
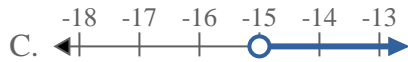
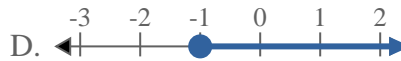
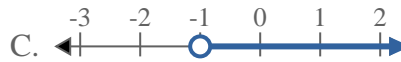
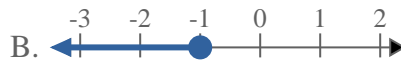
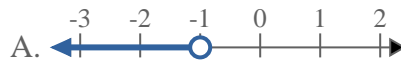
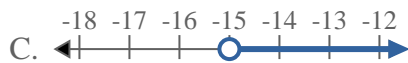
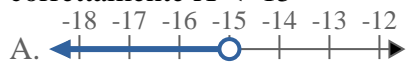
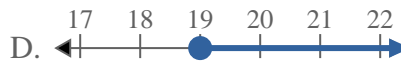
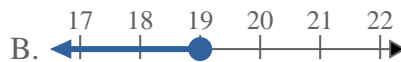
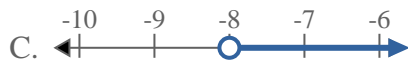
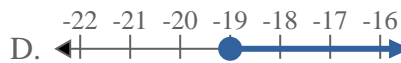
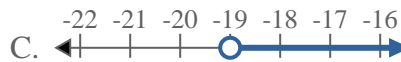
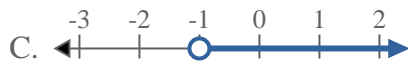
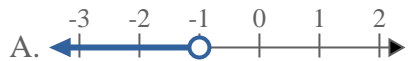
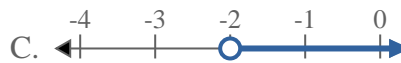


8) Quale opzione rappresenta correttamente $X \leq -2$



Risposte

1. _____
2. _____
3. _____
4. _____
5. _____
6. _____
7. _____
8. _____

**Risolvi ogni problema.**1) Quale opzione rappresenta correttamente $X < -15$ 2) Quale opzione rappresenta correttamente $X < -1$ 3) Quale opzione rappresenta correttamente $X < -15$ 4) Quale opzione rappresenta correttamente $X \leq 19$ 5) Quale opzione rappresenta correttamente $X > -8$ 6) Quale opzione rappresenta correttamente $X \leq -19$ 7) Quale opzione rappresenta correttamente $X < -1$ 8) Quale opzione rappresenta correttamente $X \leq -2$ **Risposte**1. **A** 2. **A** 3. **A** 4. **B** 5. **C** 6. **B** 7. **A** 8. **B**