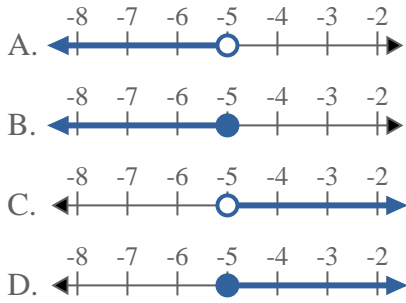


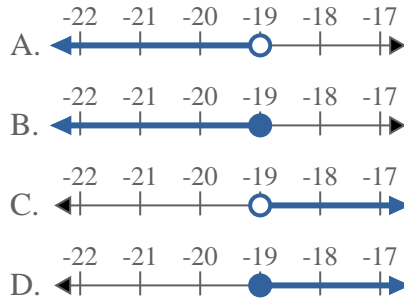


Risolvi ogni problema.

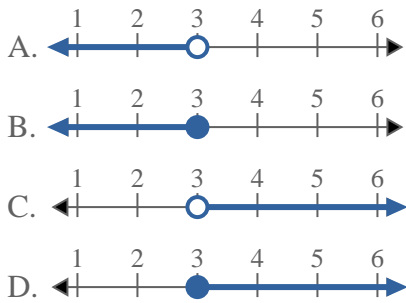
1) Quale opzione rappresenta correttamente $X > -5$



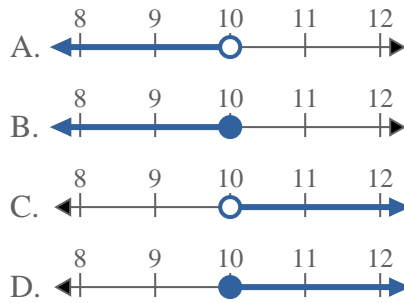
2) Quale opzione rappresenta correttamente $X > -19$



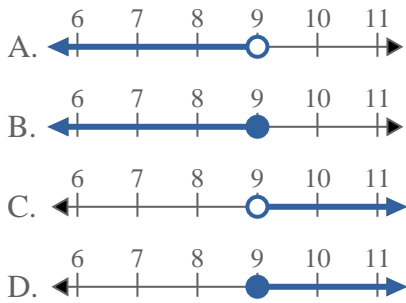
3) Quale opzione rappresenta correttamente $X > 3$



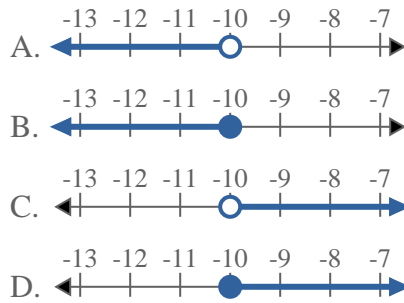
4) Quale opzione rappresenta correttamente $X > 10$



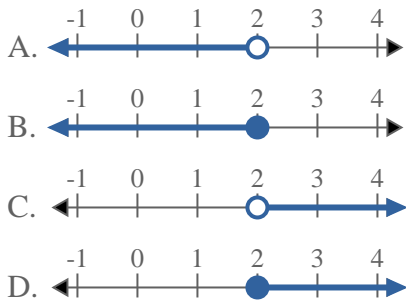
5) Quale opzione rappresenta correttamente $X > 9$



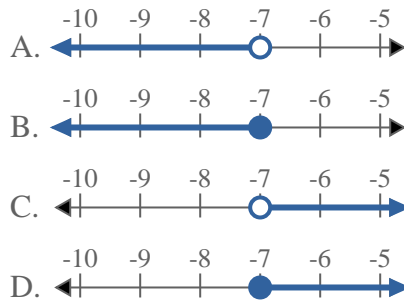
6) Quale opzione rappresenta correttamente $X \leq -10$



7) Quale opzione rappresenta correttamente $X < 2$



8) Quale opzione rappresenta correttamente $X \geq -7$



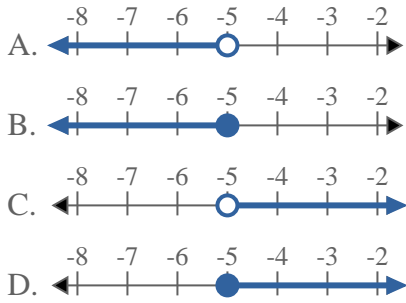
Risposte

1. _____
2. _____
3. _____
4. _____
5. _____
6. _____
7. _____
8. _____

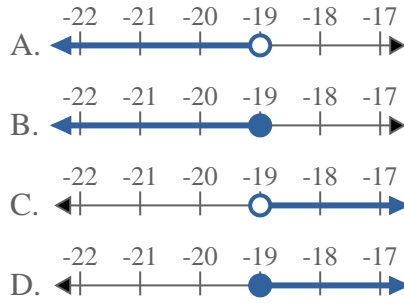


Risolvi ogni problema.

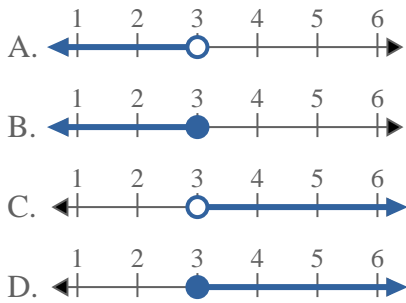
1) Quale opzione rappresenta correttamente $X > -5$



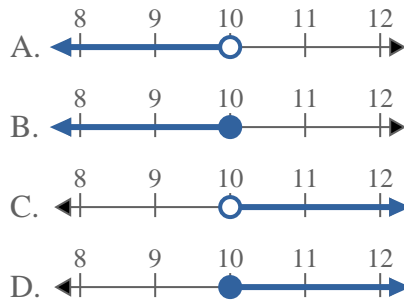
2) Quale opzione rappresenta correttamente $X > -19$



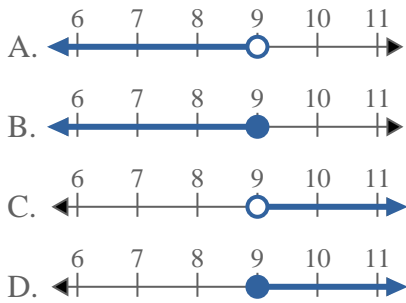
3) Quale opzione rappresenta correttamente $X > 3$



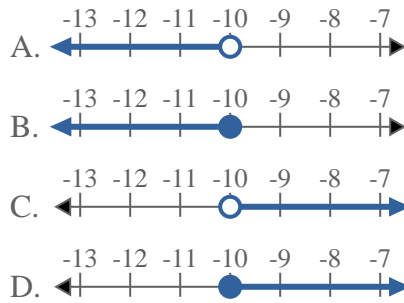
4) Quale opzione rappresenta correttamente $X > 10$



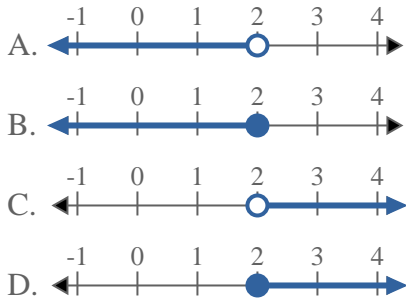
5) Quale opzione rappresenta correttamente $X > 9$



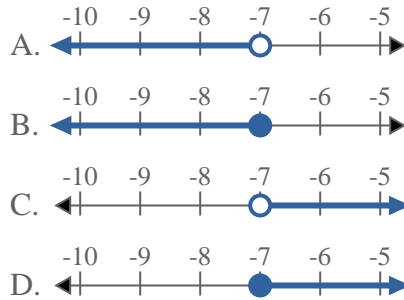
6) Quale opzione rappresenta correttamente $X \leq -10$



7) Quale opzione rappresenta correttamente $X < 2$



8) Quale opzione rappresenta correttamente $X \geq -7$



Risposte

1. **C**
2. **C**
3. **C**
4. **C**
5. **C**
6. **B**
7. **A**
8. **D**