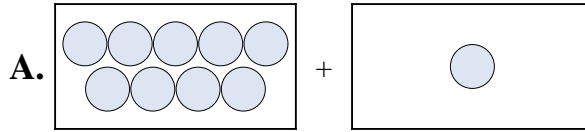




Abbina ogni addizione con il suo equivalente grafico.

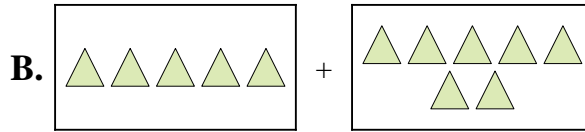
Risposte

1) $1 + 8$



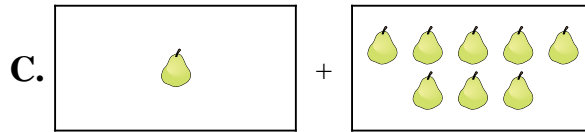
1. _____

2) $1 + 1$



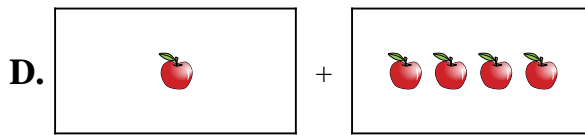
2. _____

3) $3 + 3$



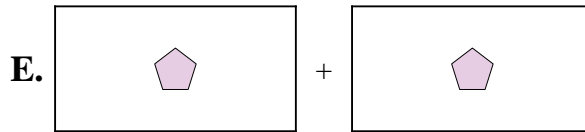
3. _____

4) $10 + 8$



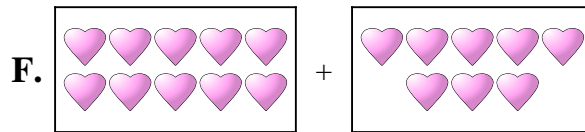
4. _____

5) $1 + 4$



5. _____

6) $5 + 7$



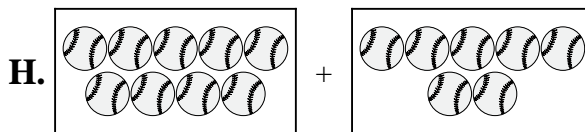
6. _____

7) $1 + 7$



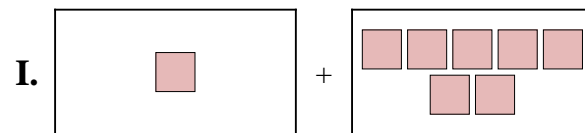
7. _____

8) $9 + 7$



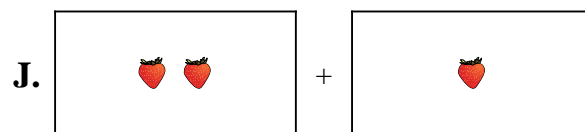
8. _____

9) $9 + 1$



9. _____

10) $2 + 1$



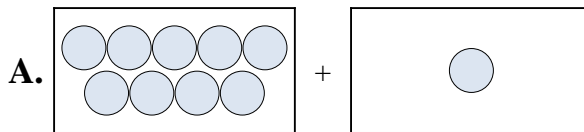
10. _____



Abbina ogni addizione con il suo equivalente grafico.

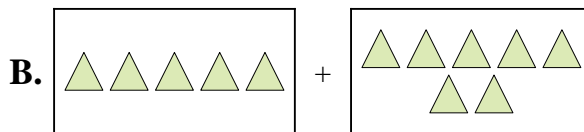
Risposte

1) $1 + 8$



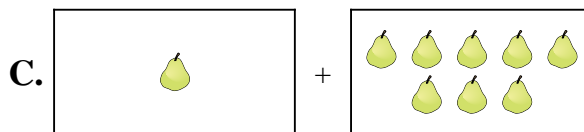
1. **C**

2) $1 + 1$



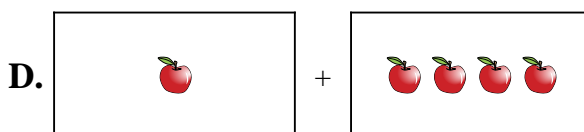
2. **E**

3) $3 + 3$



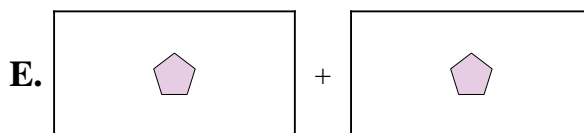
3. **G**

4) $10 + 8$



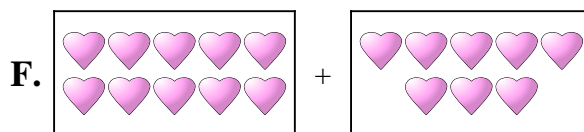
4. **F**

5) $1 + 4$




5. **D**

6) $5 + 7$



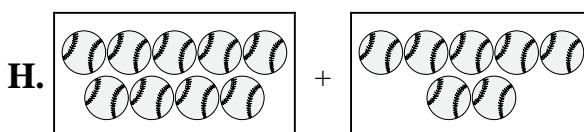
6. **B**

7) $1 + 7$



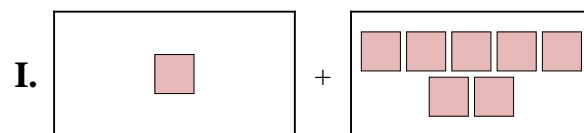
7. **I**

8) $9 + 7$



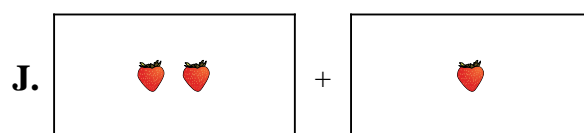
8. **H**

9) $9 + 1$



9. **A**

10) $2 + 1$



10. **J**