




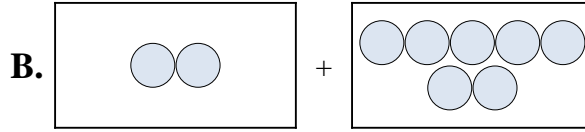
Abbina ogni addizione con il suo equivalente grafico.

Risposte

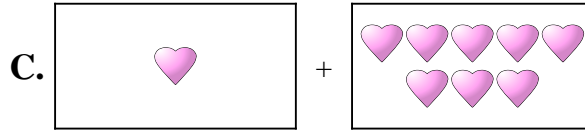
1) $7 + 6$



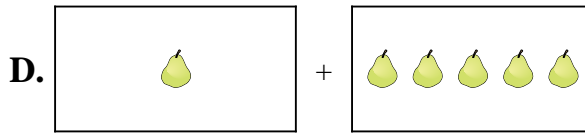
2) $7 + 7$



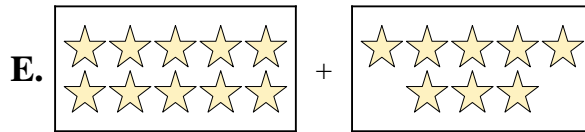
3) $1 + 5$



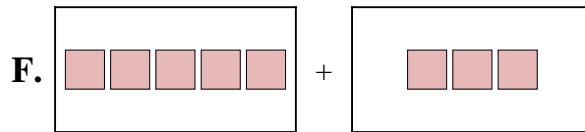
4) $8 + 3$



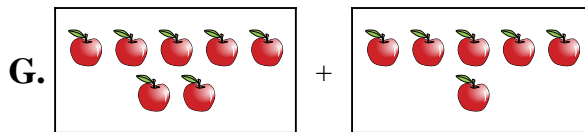
5) $4 + 5$



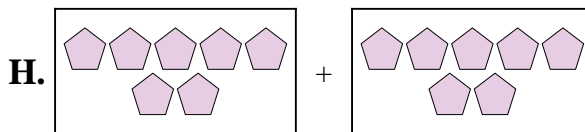
6) $1 + 8$



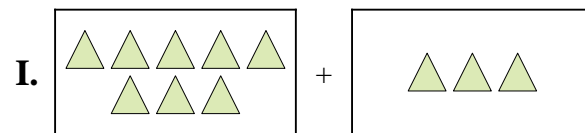
7) $2 + 7$



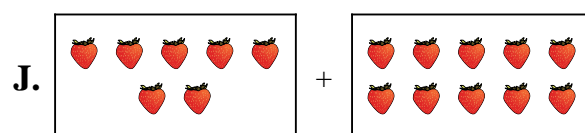
8) $5 + 3$



9) $10 + 8$



10) $7 + 10$




1. _____
2. _____
3. _____
4. _____
5. _____
6. _____
7. _____
8. _____
9. _____
10. _____

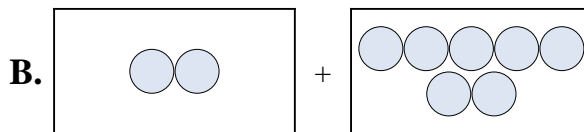


Abbina ogni addizione con il suo equivalente grafico.

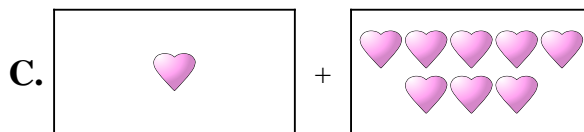
1) $7 + 6$



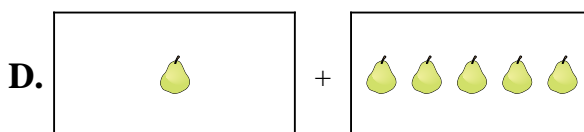
2) $7 + 7$



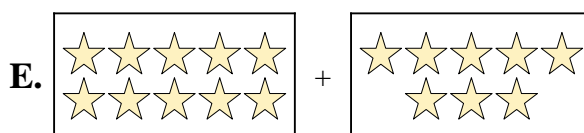
3) $1 + 5$



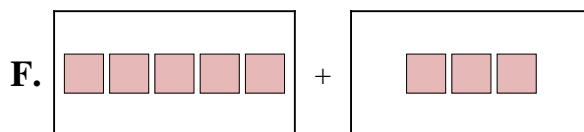
4) $8 + 3$



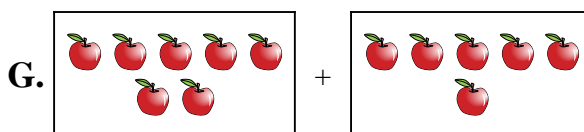
5) $4 + 5$



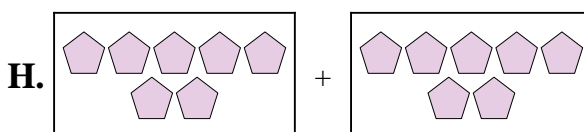
6) $1 + 8$



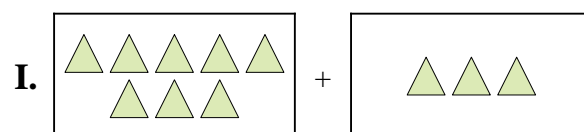
7) $2 + 7$



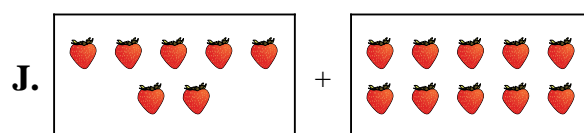
8) $5 + 3$



9) $10 + 8$



10) $7 + 10$



Risposte

1. **G**

2. **H**

3. **D**

4. **I**

5. **A**

6. **C**

7. **B**

8. **F**

9. **E**

10. **J**