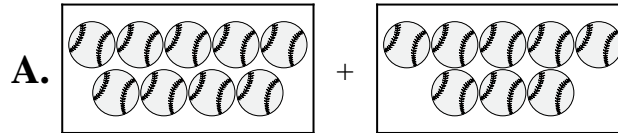


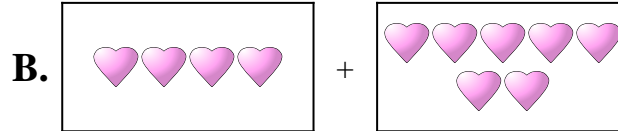


Abbina ogni addizione con il suo equivalente grafico.

1)  $6 + 3$



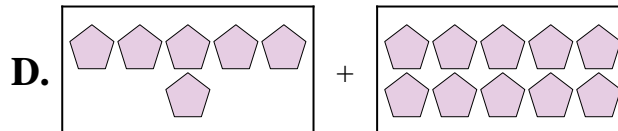
2)  $8 + 6$



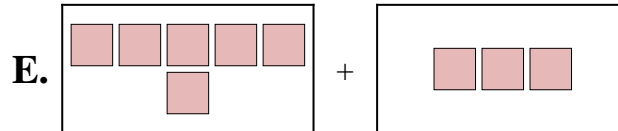
3)  $9 + 8$



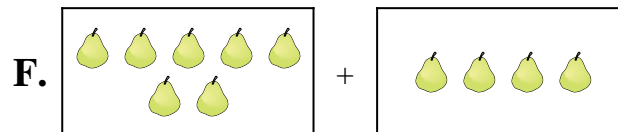
4)  $7 + 4$



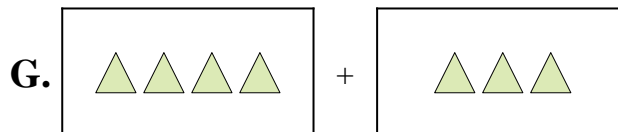
5)  $6 + 10$



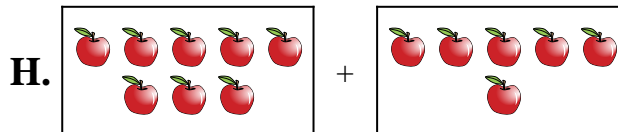
6)  $9 + 9$



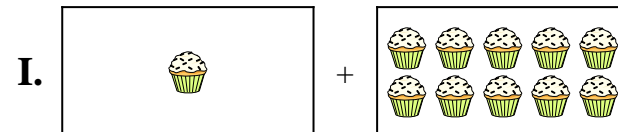
7)  $1 + 10$



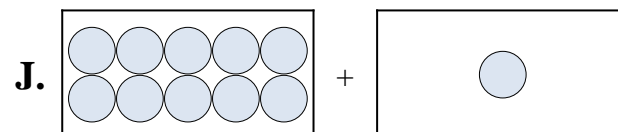
8)  $4 + 7$



9)  $4 + 3$



10)  $10 + 1$



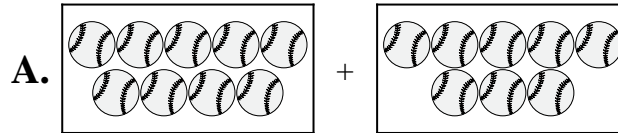
Risposte

1. \_\_\_\_\_
2. \_\_\_\_\_
3. \_\_\_\_\_
4. \_\_\_\_\_
5. \_\_\_\_\_
6. \_\_\_\_\_
7. \_\_\_\_\_
8. \_\_\_\_\_
9. \_\_\_\_\_
10. \_\_\_\_\_

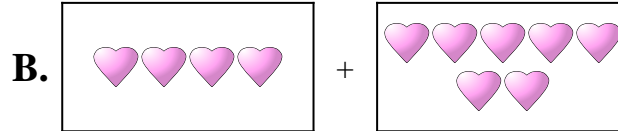


Abbina ogni addizione con il suo equivalente grafico.

1)  $6 + 3$



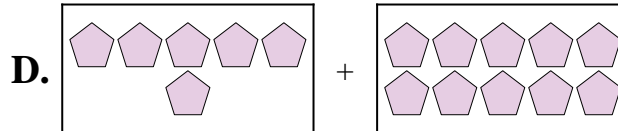
2)  $8 + 6$



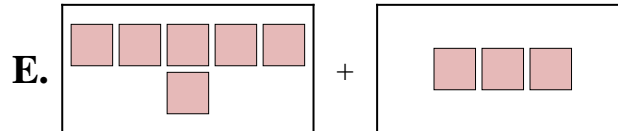
3)  $9 + 8$



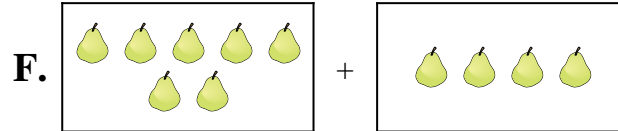
4)  $7 + 4$



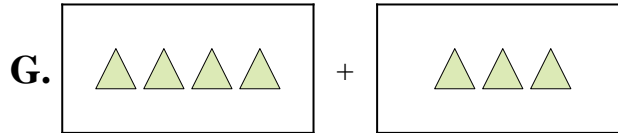
5)  $6 + 10$



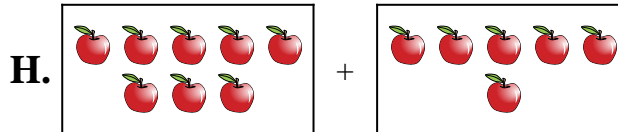
6)  $9 + 9$



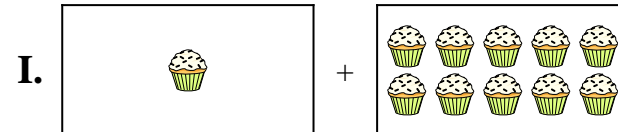
7)  $1 + 10$



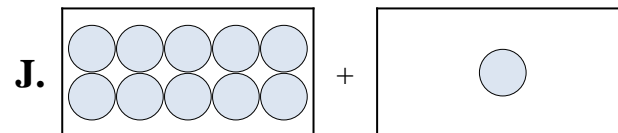
8)  $4 + 7$



9)  $4 + 3$



10)  $10 + 1$



Risposte

1.     **E**    

2.     **H**    

3.     **A**    

4.     **F**    

5.     **D**    

6.     **C**    

7.     **I**    

8.     **B**    

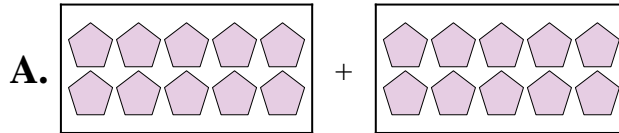
9.     **G**    

10.     **J**

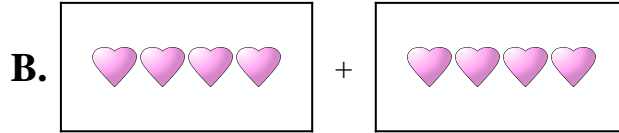


Abbina ogni addizione con il suo equivalente grafico.

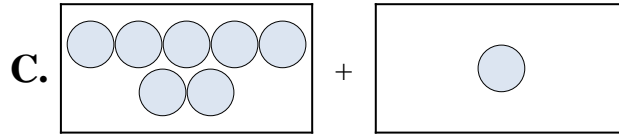
1)  $1 + 1$



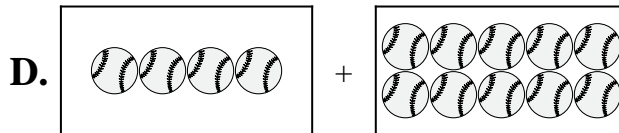
2)  $2 + 7$



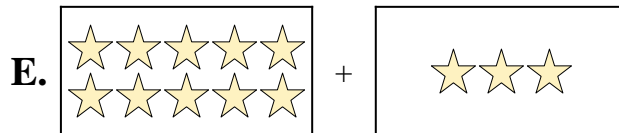
3)  $10 + 10$



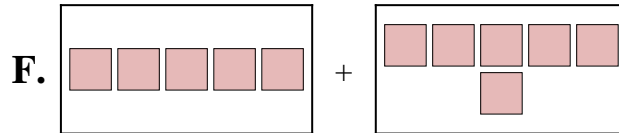
4)  $10 + 2$




5)  $4 + 10$



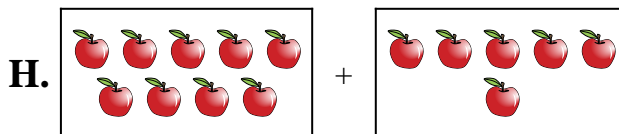
6)  $5 + 6$



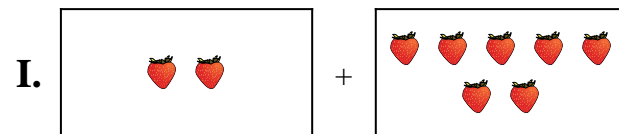
7)  $9 + 6$



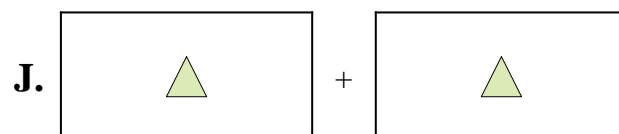
8)  $10 + 3$



9)  $7 + 1$



10)  $4 + 4$



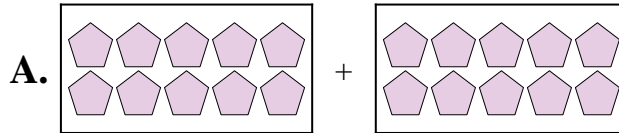
Risposte

1. \_\_\_\_\_
2. \_\_\_\_\_
3. \_\_\_\_\_
4. \_\_\_\_\_
5. \_\_\_\_\_
6. \_\_\_\_\_
7. \_\_\_\_\_
8. \_\_\_\_\_
9. \_\_\_\_\_
10. \_\_\_\_\_

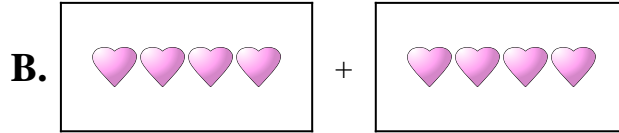


Abbina ogni addizione con il suo equivalente grafico.

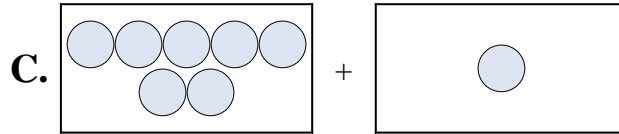
1)  $1 + 1$



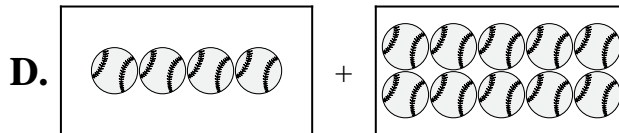
2)  $2 + 7$



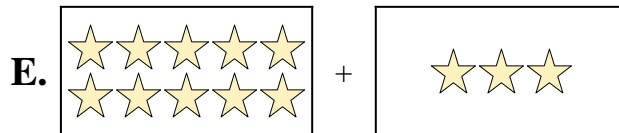
3)  $10 + 10$



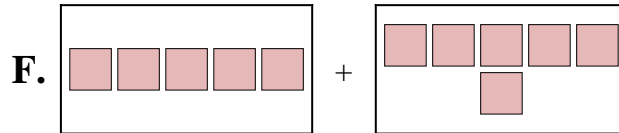
4)  $10 + 2$




5)  $4 + 10$



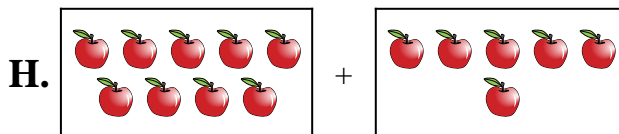
6)  $5 + 6$



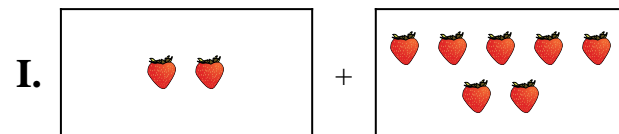
7)  $9 + 6$



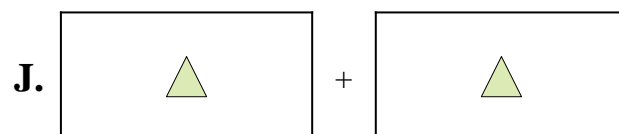
8)  $10 + 3$



9)  $7 + 1$



10)  $4 + 4$



Risposte

1.     **J**    

2.     **I**    

3.     **A**    

4.     **G**    

5.     **D**    

6.     **F**    

7.     **H**    

8.     **E**    

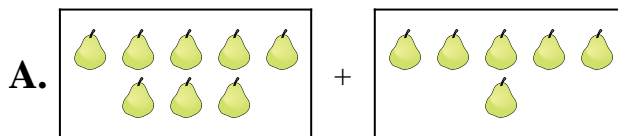
9.     **C**    

10.     **B**

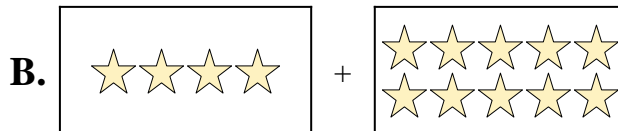


Abbina ogni addizione con il suo equivalente grafico.

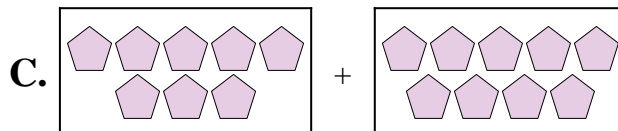
1)  $2 + 5$



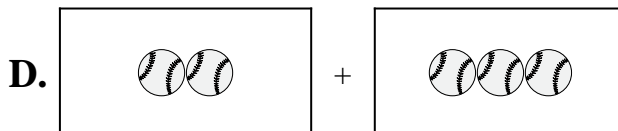
2)  $10 + 10$



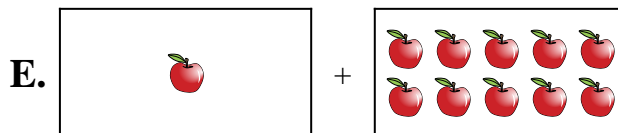
3)  $4 + 10$




4)  $3 + 2$



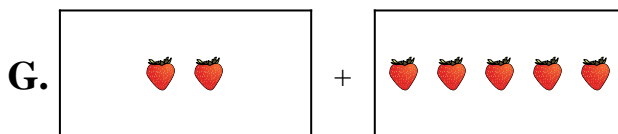
5)  $8 + 9$



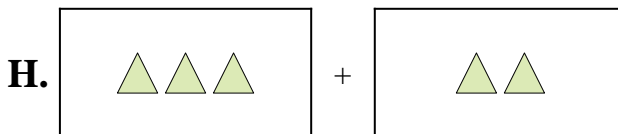
6)  $10 + 4$



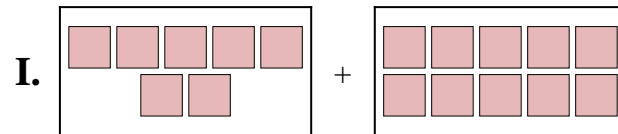
7)  $7 + 10$



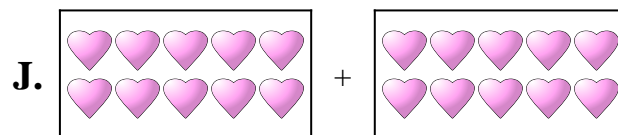
8)  $2 + 3$



9)  $8 + 6$



10)  $1 + 10$



Risposte

1. \_\_\_\_\_

2. \_\_\_\_\_

3. \_\_\_\_\_

4. \_\_\_\_\_

5. \_\_\_\_\_

6. \_\_\_\_\_

7. \_\_\_\_\_

8. \_\_\_\_\_

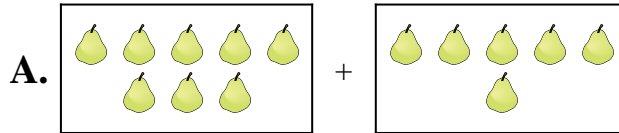
9. \_\_\_\_\_

10. \_\_\_\_\_



Abbina ogni addizione con il suo equivalente grafico.

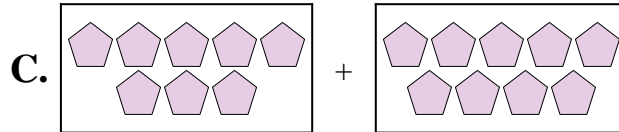
1)  $2 + 5$



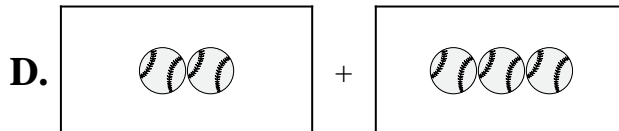
2)  $10 + 10$



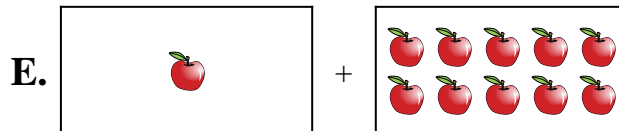
3)  $4 + 10$




4)  $3 + 2$



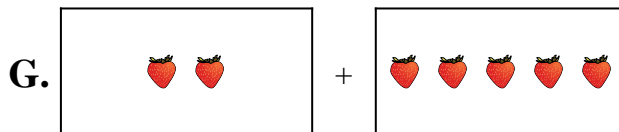
5)  $8 + 9$



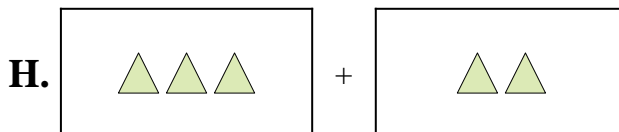
6)  $10 + 4$



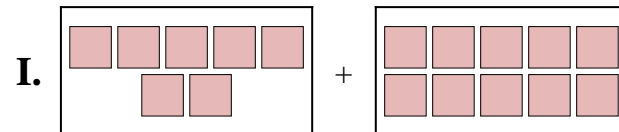
7)  $7 + 10$



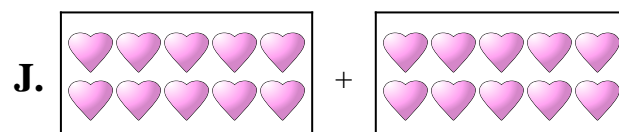
8)  $2 + 3$



9)  $8 + 6$



10)  $1 + 10$



Risposte

1.     **G**    

2.     **J**    

3.     **B**    

4.     **H**    

5.     **C**    

6.     **F**    

7.     **I**    

8.     **D**    

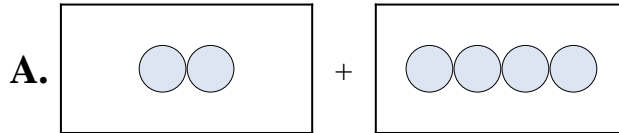
9.     **A**    

10.     **E**



Abbina ogni addizione con il suo equivalente grafico.

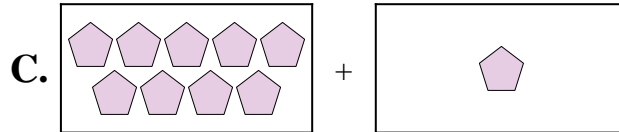
1)  $5 + 7$



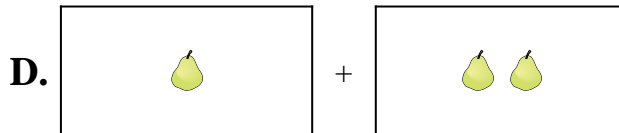
2)  $3 + 10$



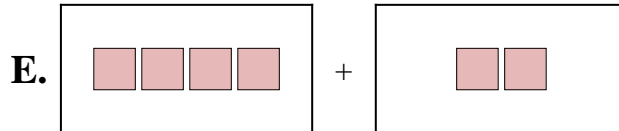
3)  $2 + 4$



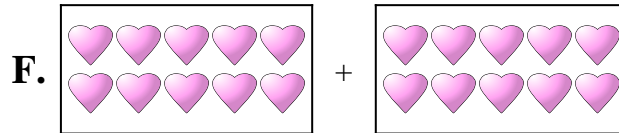
4)  $4 + 2$



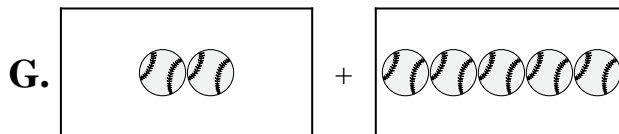
5)  $4 + 4$



6)  $9 + 1$



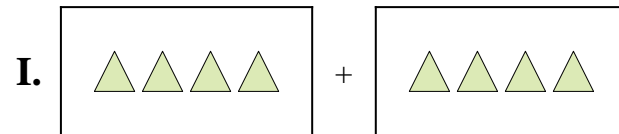
7)  $10 + 10$



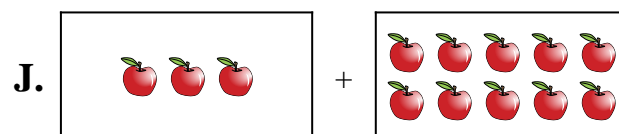
8)  $1 + 2$



9)  $2 + 5$



10)  $8 + 4$



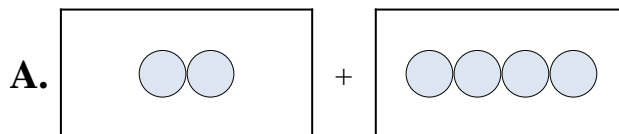
**Risposte**

1. \_\_\_\_\_
2. \_\_\_\_\_
3. \_\_\_\_\_
4. \_\_\_\_\_
5. \_\_\_\_\_
6. \_\_\_\_\_
7. \_\_\_\_\_
8. \_\_\_\_\_
9. \_\_\_\_\_
10. \_\_\_\_\_



Abbina ogni addizione con il suo equivalente grafico.

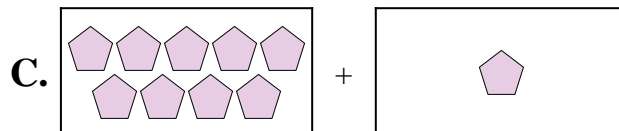
1)  $5 + 7$



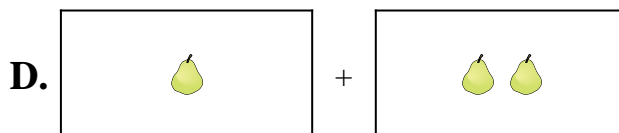
2)  $3 + 10$



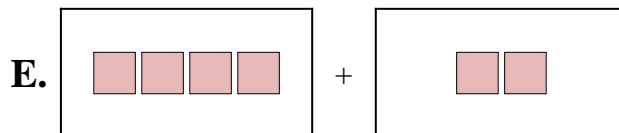
3)  $2 + 4$



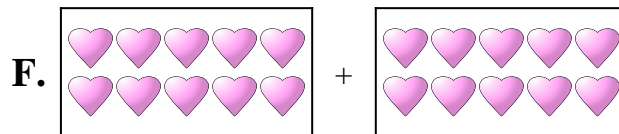
4)  $4 + 2$



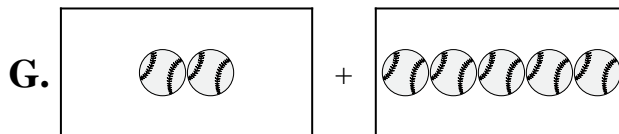
5)  $4 + 4$



6)  $9 + 1$



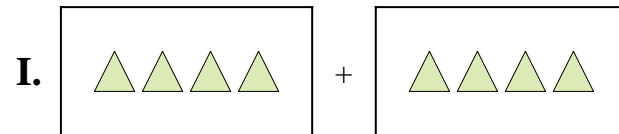
7)  $10 + 10$



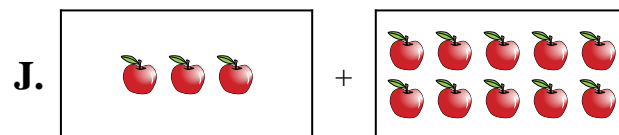
8)  $1 + 2$



9)  $2 + 5$



10)  $8 + 4$



Risposte

1.     **H**    

2.     **J**    

3.     **A**    

4.     **E**    

5.     **I**    

6.     **C**    

7.     **F**    

8.     **D**    

9.     **G**    

10.     **B**



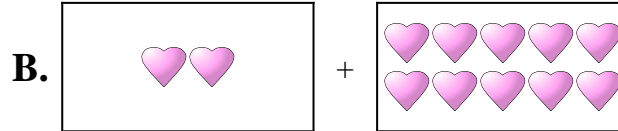


Abbina ogni addizione con il suo equivalente grafico.

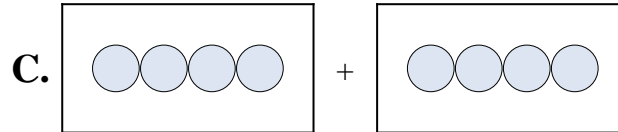
1)  $7 + 7$



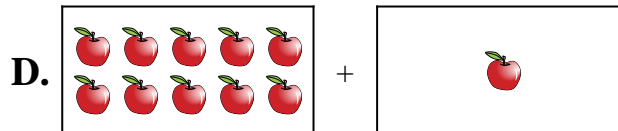
2)  $4 + 4$



3)  $3 + 5$



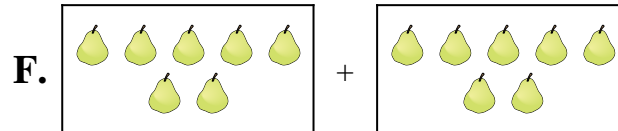
4)  $2 + 2$



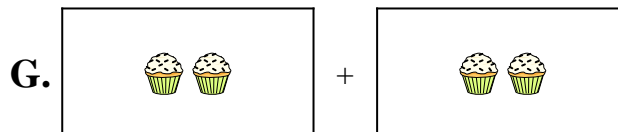
5)  $5 + 2$



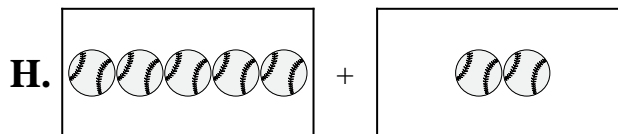
6)  $10 + 1$



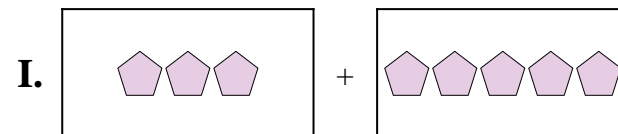
7)  $9 + 3$



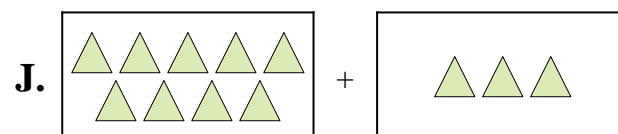
8)  $2 + 10$



9)  $7 + 6$



10)  $7 + 4$



Risposte

1. \_\_\_\_\_
2. \_\_\_\_\_
3. \_\_\_\_\_
4. \_\_\_\_\_
5. \_\_\_\_\_
6. \_\_\_\_\_
7. \_\_\_\_\_
8. \_\_\_\_\_
9. \_\_\_\_\_
10. \_\_\_\_\_

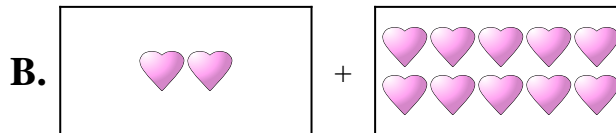


Abbina ogni addizione con il suo equivalente grafico.

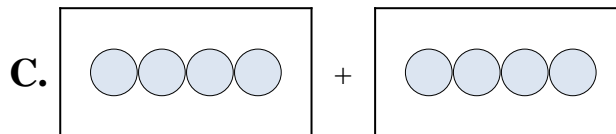
1)  $7 + 7$



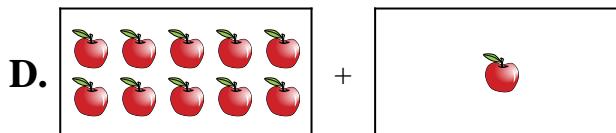
2)  $4 + 4$



3)  $3 + 5$



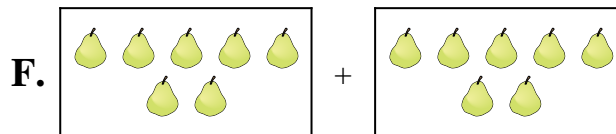
4)  $2 + 2$



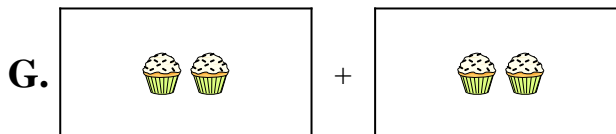
5)  $5 + 2$



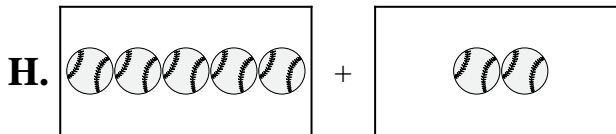
6)  $10 + 1$



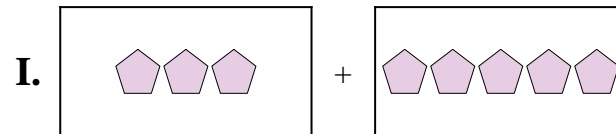
7)  $9 + 3$



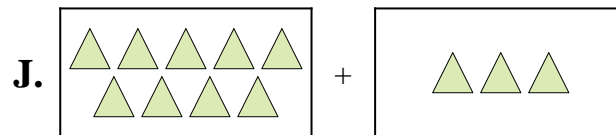
8)  $2 + 10$



9)  $7 + 6$



10)  $7 + 4$



Risposte

1. **F**

2. **C**

3. **I**

4. **G**

5. **H**

6. **D**

7. **J**

8. **B**

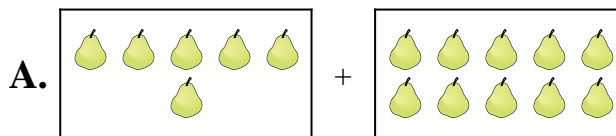
9. **E**

10. **A**

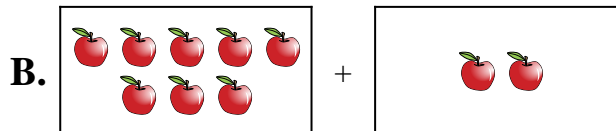


Abbina ogni addizione con il suo equivalente grafico.

1)  $10 + 1$



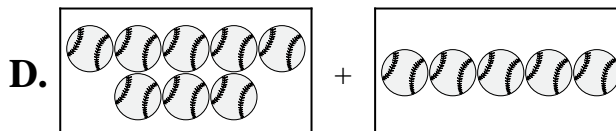
2)  $4 + 6$



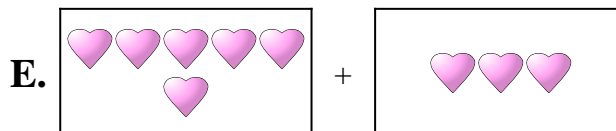
3)  $9 + 2$



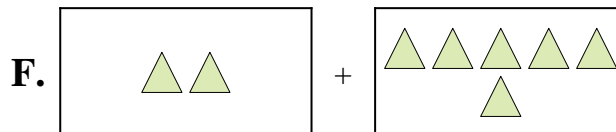
4)  $2 + 6$



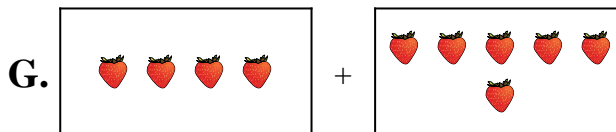
5)  $6 + 3$



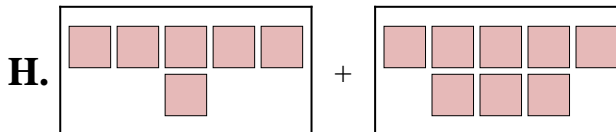
6)  $6 + 1$



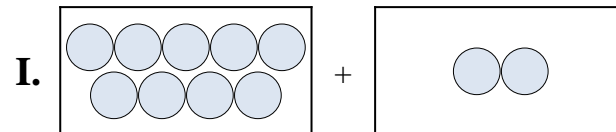
7)  $8 + 2$



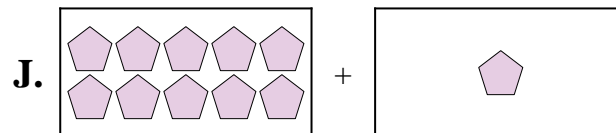
8)  $8 + 5$



9)  $6 + 10$



10)  $6 + 8$



**Risposte**

1. \_\_\_\_\_

2. \_\_\_\_\_

3. \_\_\_\_\_

4. \_\_\_\_\_

5. \_\_\_\_\_

6. \_\_\_\_\_

7. \_\_\_\_\_

8. \_\_\_\_\_

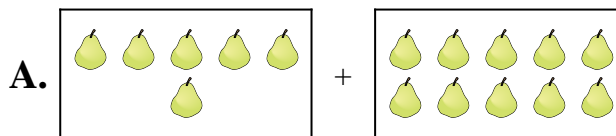
9. \_\_\_\_\_

10. \_\_\_\_\_

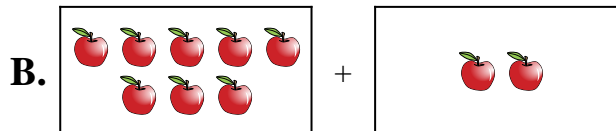


Abbina ogni addizione con il suo equivalente grafico.

1)  $10 + 1$



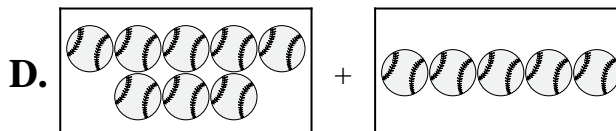
2)  $4 + 6$



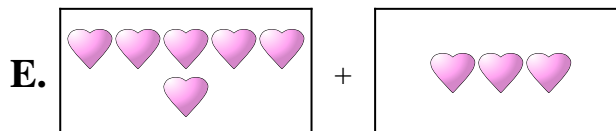
3)  $9 + 2$



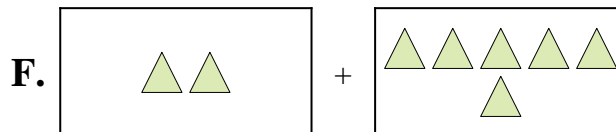
4)  $2 + 6$



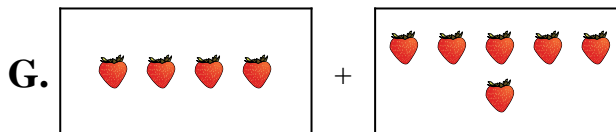
5)  $6 + 3$



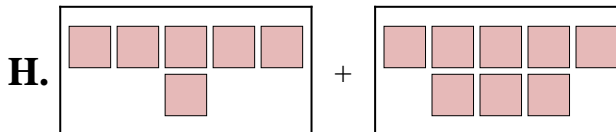
6)  $6 + 1$



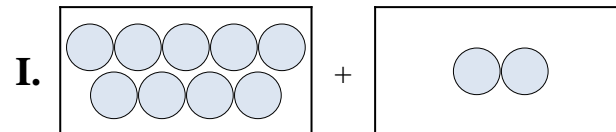
7)  $8 + 2$



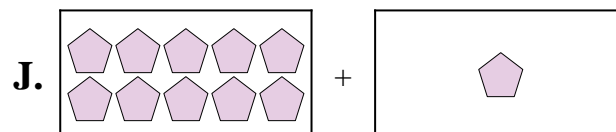
8)  $8 + 5$



9)  $6 + 10$



10)  $6 + 8$



Risposte

1.     **J**    

2.     **G**    

3.     **I**    

4.     **F**    

5.     **E**    

6.     **C**    

7.     **B**    

8.     **D**    

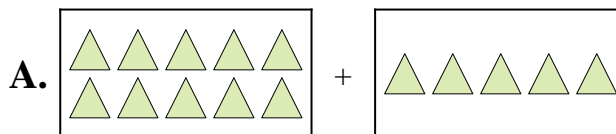
9.     **A**    

10.     **H**

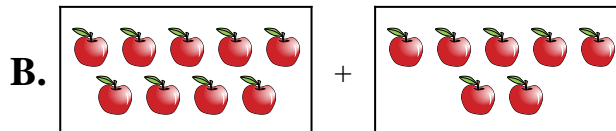


Abbina ogni addizione con il suo equivalente grafico.

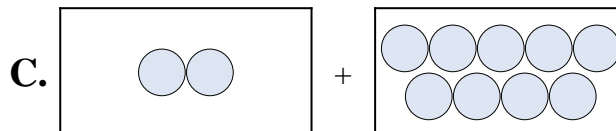
1)  $7 + 7$



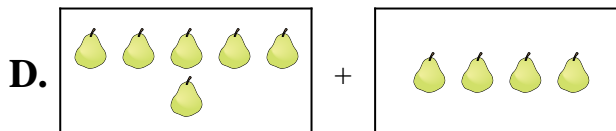
2)  $9 + 7$



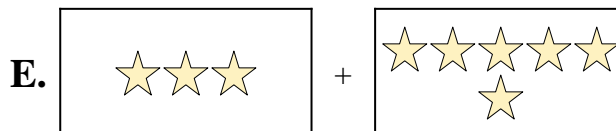
3)  $10 + 5$



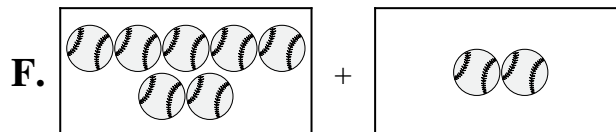
4)  $2 + 9$



5)  $5 + 5$



6)  $6 + 4$



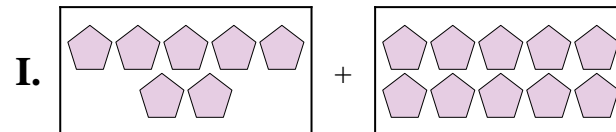
7)  $7 + 10$



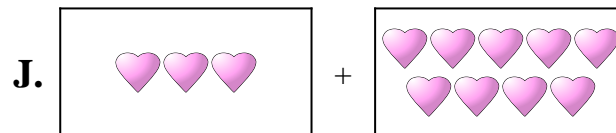
8)  $3 + 6$



9)  $7 + 2$



10)  $3 + 9$



Risposte

1. \_\_\_\_\_

2. \_\_\_\_\_

3. \_\_\_\_\_

4. \_\_\_\_\_

5. \_\_\_\_\_

6. \_\_\_\_\_

7. \_\_\_\_\_

8. \_\_\_\_\_

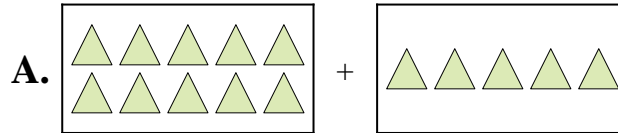
9. \_\_\_\_\_

10. \_\_\_\_\_

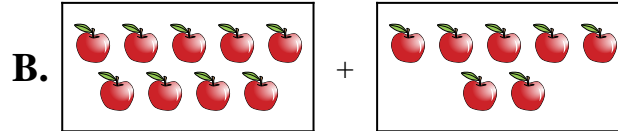


Abbina ogni addizione con il suo equivalente grafico.

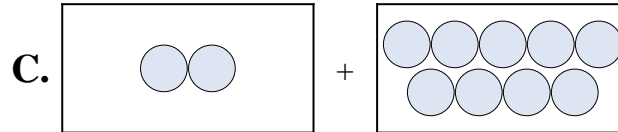
1)  $7 + 7$



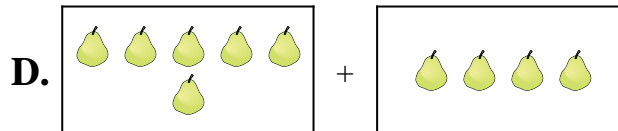
2)  $9 + 7$



3)  $10 + 5$



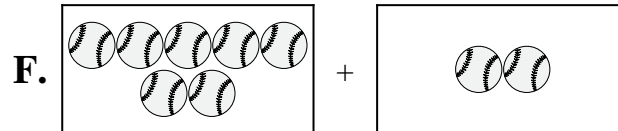
4)  $2 + 9$



5)  $5 + 5$



6)  $6 + 4$



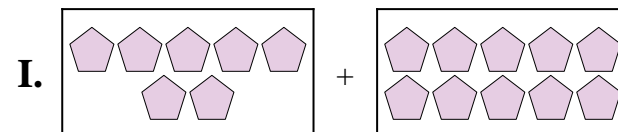
7)  $7 + 10$



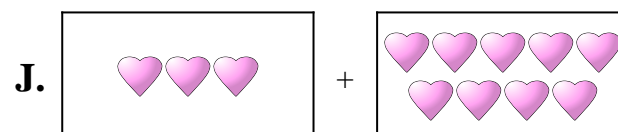
8)  $3 + 6$



9)  $7 + 2$



10)  $3 + 9$



Risposte

1.     **G**    

2.     **B**    

3.     **A**    

4.     **C**    

5.     **H**    

6.     **D**    

7.     **I**    

8.     **E**    

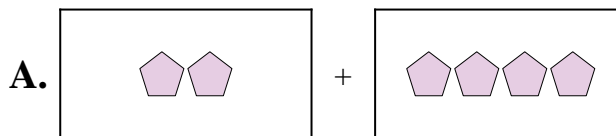
9.     **F**    

10.     **J**



Abbina ogni addizione con il suo equivalente grafico.

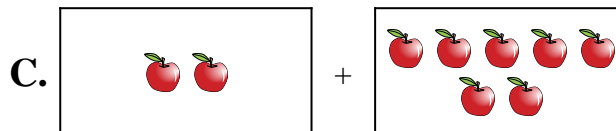
1)  $8 + 4$



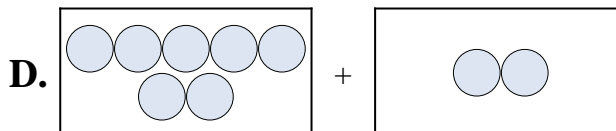
2)  $9 + 3$



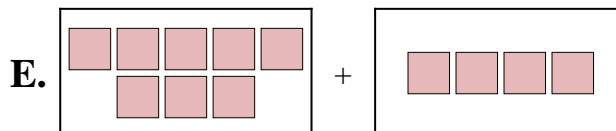
3)  $2 + 4$



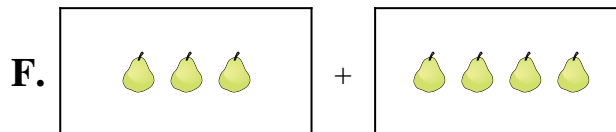
4)  $4 + 4$



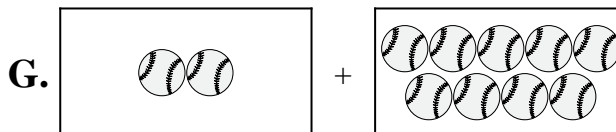
5)  $2 + 9$



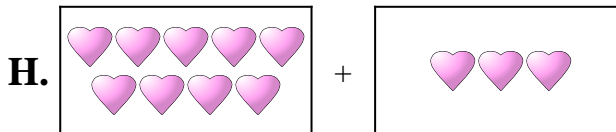
6)  $8 + 8$



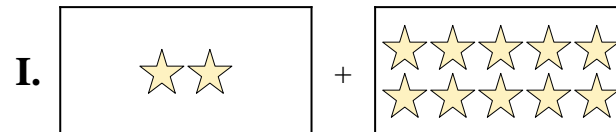
7)  $7 + 2$



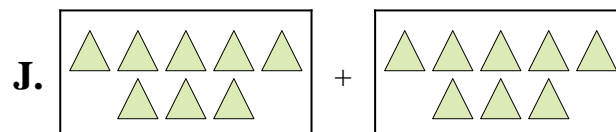
8)  $2 + 7$



9)  $2 + 10$



10)  $3 + 4$



**Risposte**

1. \_\_\_\_\_

2. \_\_\_\_\_

3. \_\_\_\_\_

4. \_\_\_\_\_

5. \_\_\_\_\_

6. \_\_\_\_\_

7. \_\_\_\_\_

8. \_\_\_\_\_

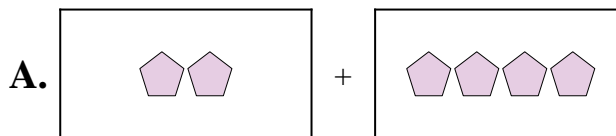
9. \_\_\_\_\_

10. \_\_\_\_\_



Abbina ogni addizione con il suo equivalente grafico.

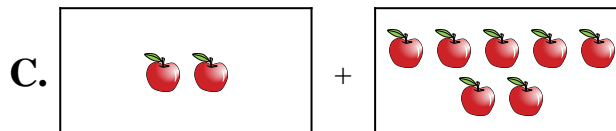
1)  $8 + 4$



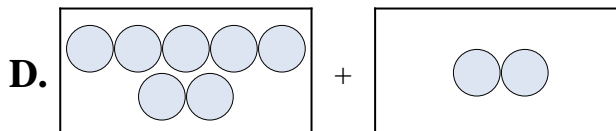
2)  $9 + 3$



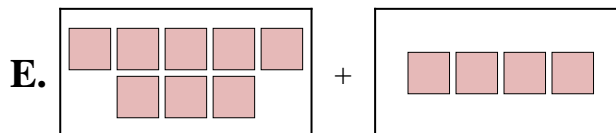
3)  $2 + 4$



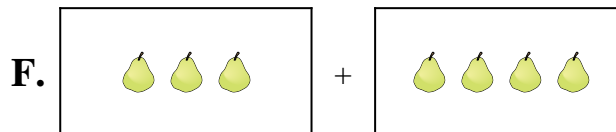
4)  $4 + 4$



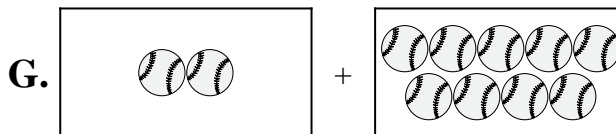
5)  $2 + 9$



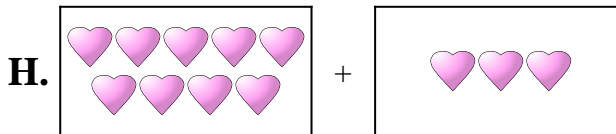
6)  $8 + 8$



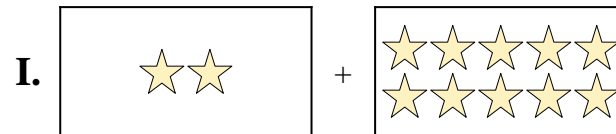
7)  $7 + 2$



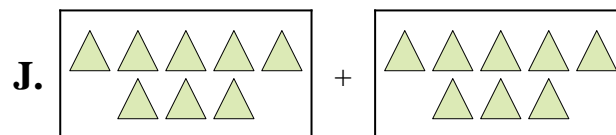
8)  $2 + 7$



9)  $2 + 10$



10)  $3 + 4$



Risposte

1.     **E**    

2.     **H**    

3.     **A**    

4.     **B**    

5.     **G**    

6.     **J**    

7.     **D**    

8.     **C**    

9.     **I**    

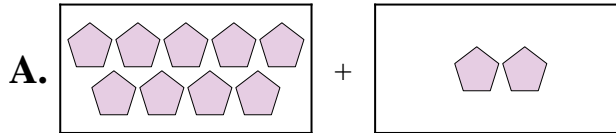
10.     **F**



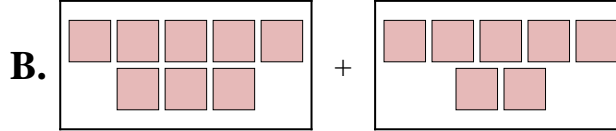


Abbina ogni addizione con il suo equivalente grafico.

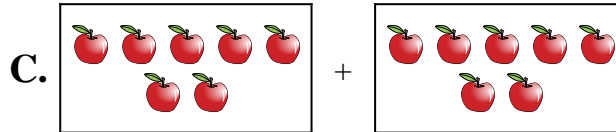
1)  $2 + 3$



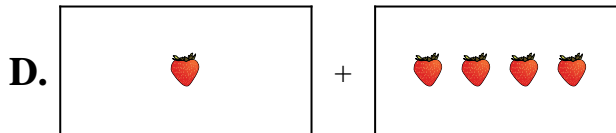
2)  $1 + 4$



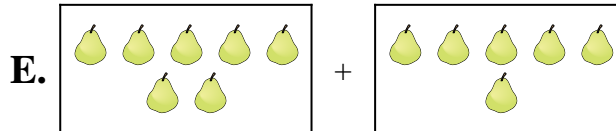
3)  $7 + 5$



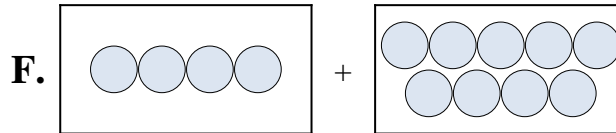
4)  $8 + 7$



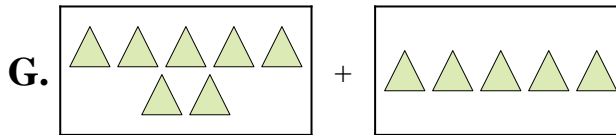
5)  $7 + 6$



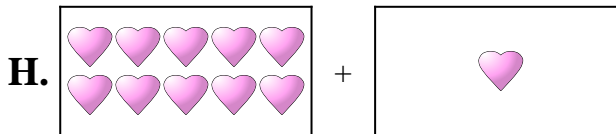
6)  $4 + 9$



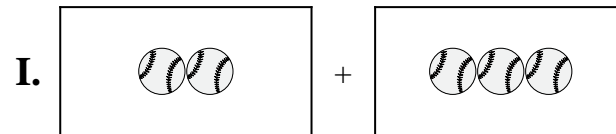
7)  $10 + 1$




8)  $5 + 2$



9)  $7 + 7$



10)  $9 + 2$



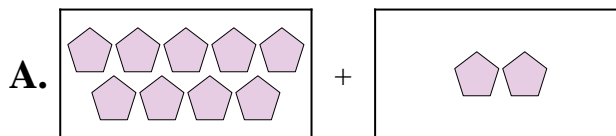
**Risposte**

1. \_\_\_\_\_
2. \_\_\_\_\_
3. \_\_\_\_\_
4. \_\_\_\_\_
5. \_\_\_\_\_
6. \_\_\_\_\_
7. \_\_\_\_\_
8. \_\_\_\_\_
9. \_\_\_\_\_
10. \_\_\_\_\_

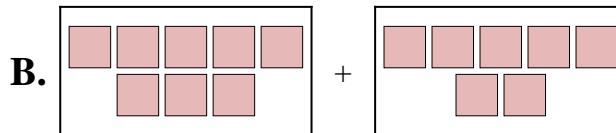


Abbina ogni addizione con il suo equivalente grafico.

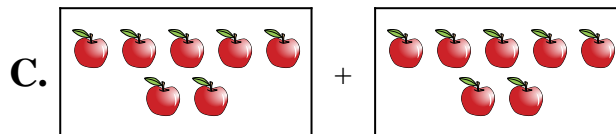
1)  $2 + 3$



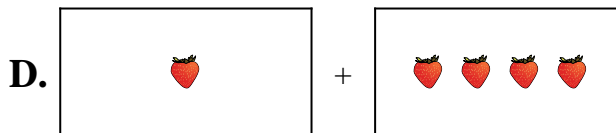
2)  $1 + 4$



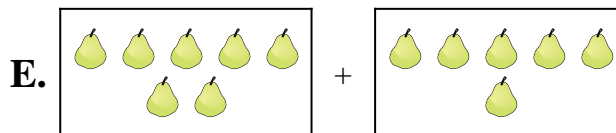
3)  $7 + 5$



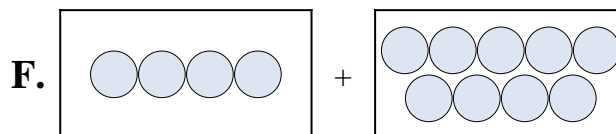
4)  $8 + 7$



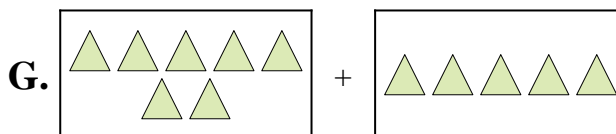
5)  $7 + 6$



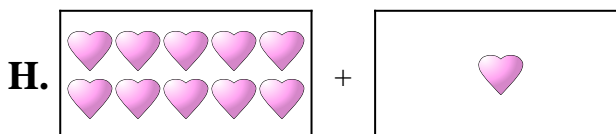
6)  $4 + 9$



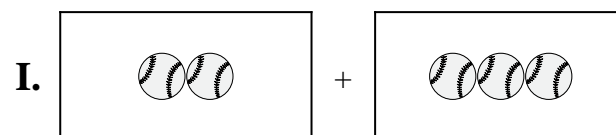
7)  $10 + 1$




8)  $5 + 2$



9)  $7 + 7$



10)  $9 + 2$



Risposte

1.     **I**    

2.     **D**    

3.     **G**    

4.     **B**    

5.     **E**    

6.     **F**    

7.     **H**    

8.     **J**    

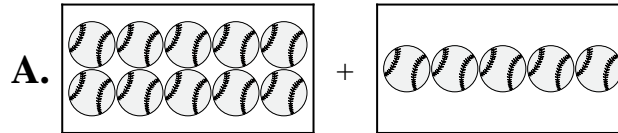
9.     **C**    

10.     **A**

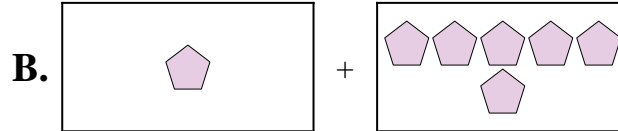


Abbina ogni addizione con il suo equivalente grafico.

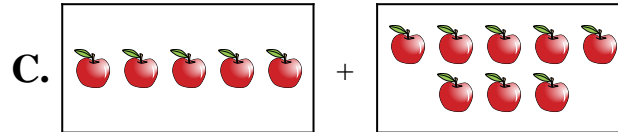
1)  $4 + 8$



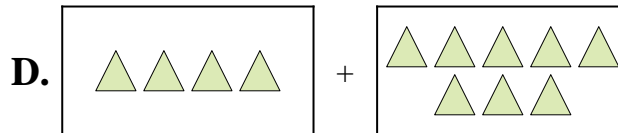
2)  $8 + 6$



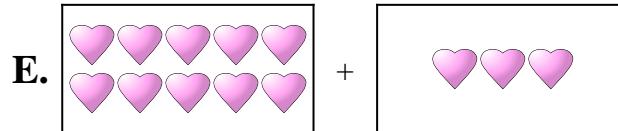
3)  $10 + 3$



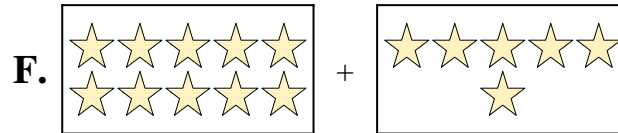
4)  $10 + 6$




5)  $2 + 2$



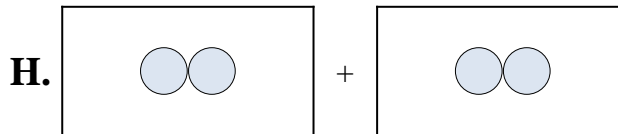
6)  $1 + 6$



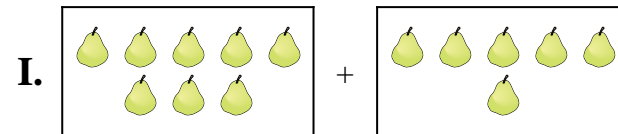
7)  $10 + 5$



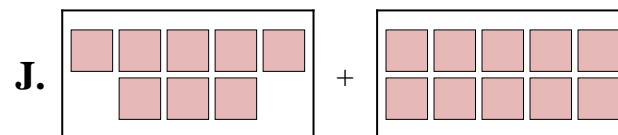
8)  $6 + 3$



9)  $5 + 8$



10)  $8 + 10$



**Risposte**

1. \_\_\_\_\_

2. \_\_\_\_\_

3. \_\_\_\_\_

4. \_\_\_\_\_

5. \_\_\_\_\_

6. \_\_\_\_\_

7. \_\_\_\_\_

8. \_\_\_\_\_

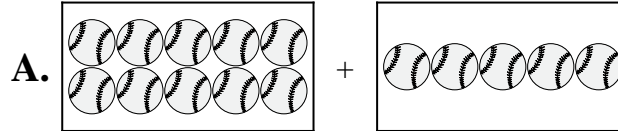
9. \_\_\_\_\_

10. \_\_\_\_\_

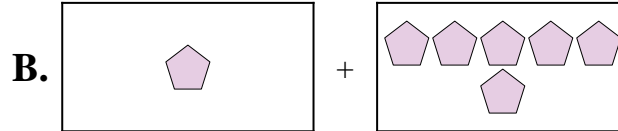


Abbina ogni addizione con il suo equivalente grafico.

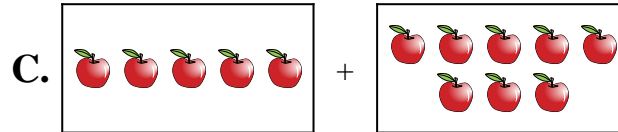
1)  $4 + 8$



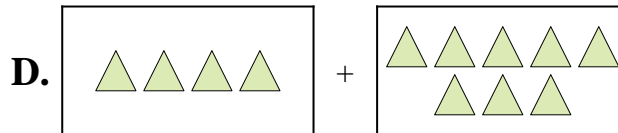
2)  $8 + 6$



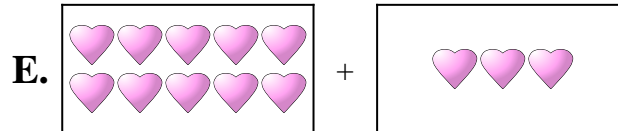
3)  $10 + 3$



4)  $10 + 6$




5)  $2 + 2$



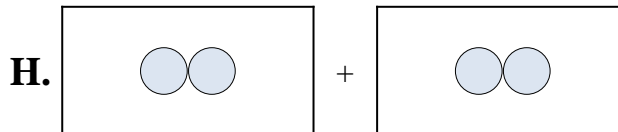
6)  $1 + 6$



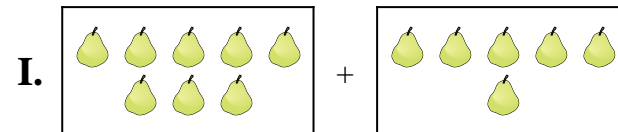
7)  $10 + 5$



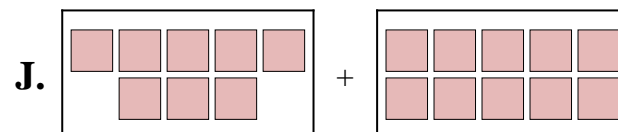
8)  $6 + 3$



9)  $5 + 8$



10)  $8 + 10$



Risposte

1.     **D**    

2.     **I**    

3.     **E**    

4.     **F**    

5.     **H**    

6.     **B**    

7.     **A**    

8.     **G**    

9.     **C**    

10.     **J**