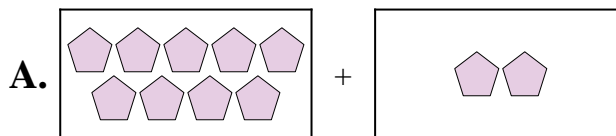


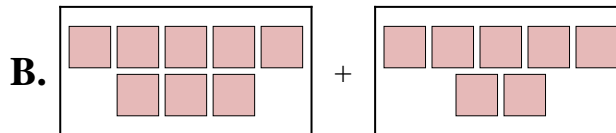


Abbina ogni addizione con il suo equivalente grafico.

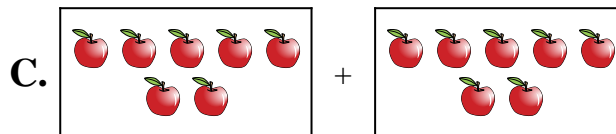
1) $2 + 3$



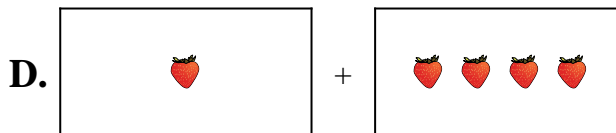
2) $1 + 4$



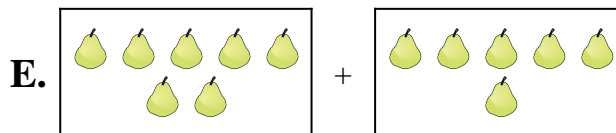
3) $7 + 5$



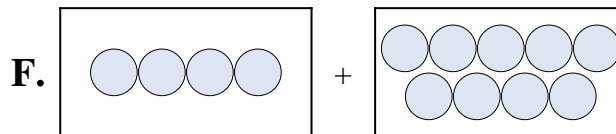
4) $8 + 7$



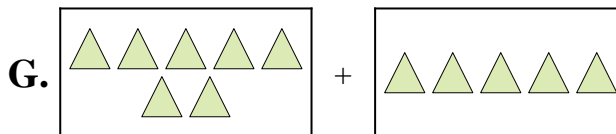
5) $7 + 6$



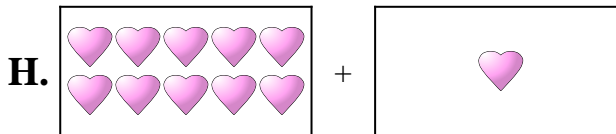
6) $4 + 9$



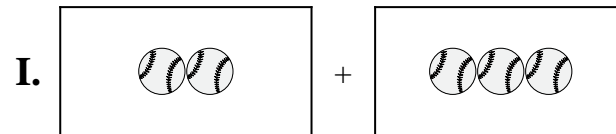
7) $10 + 1$




8) $5 + 2$



9) $7 + 7$



10) $9 + 2$



Risposte

1. _____

2. _____

3. _____

4. _____

5. _____

6. _____

7. _____

8. _____

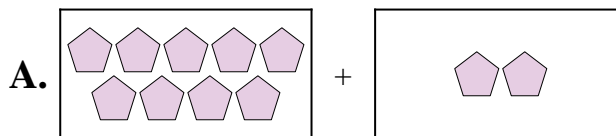
9. _____

10. _____

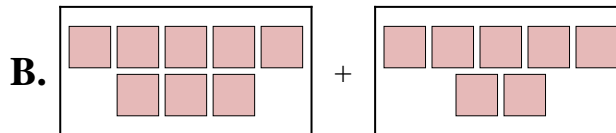


Abbina ogni addizione con il suo equivalente grafico.

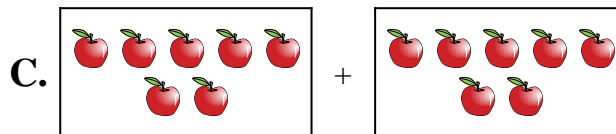
1) $2 + 3$



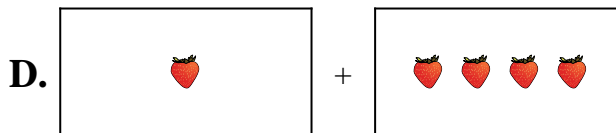
2) $1 + 4$



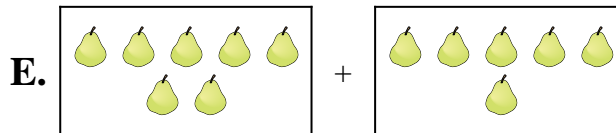
3) $7 + 5$



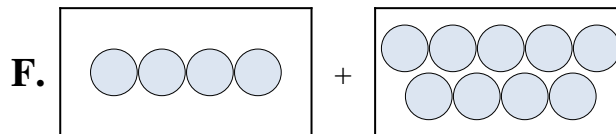
4) $8 + 7$



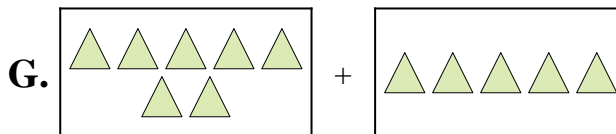
5) $7 + 6$



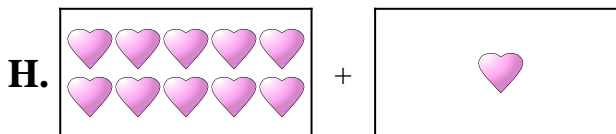
6) $4 + 9$



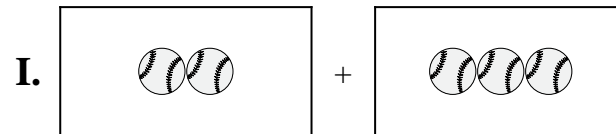
7) $10 + 1$




8) $5 + 2$



9) $7 + 7$



10) $9 + 2$



Risposte

1. **I**

2. **D**

3. **G**

4. **B**

5. **E**

6. **F**

7. **H**

8. **J**

9. **C**

10. **A**