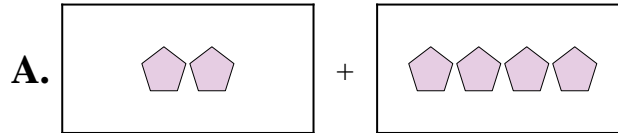




Abbina ogni addizione con il suo equivalente grafico.

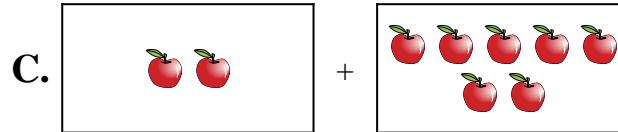
1) $8 + 4$



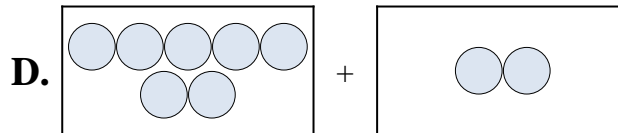
2) $9 + 3$



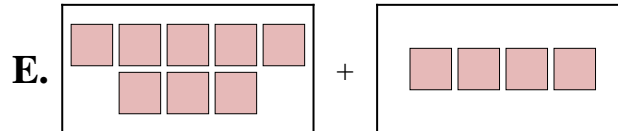
3) $2 + 4$



4) $4 + 4$



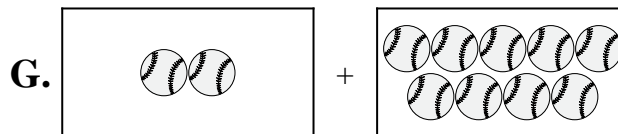
5) $2 + 9$



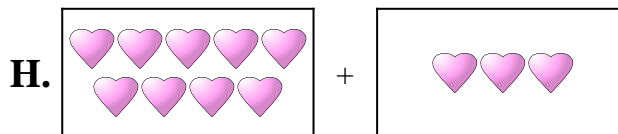
6) $8 + 8$



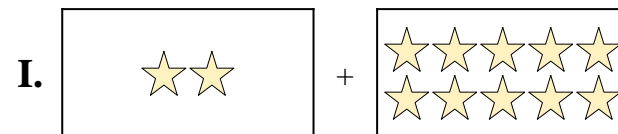
7) $7 + 2$



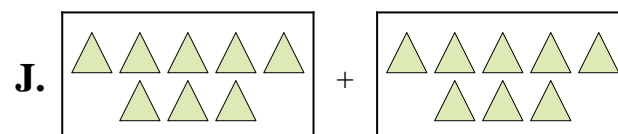
8) $2 + 7$



9) $2 + 10$



10) $3 + 4$



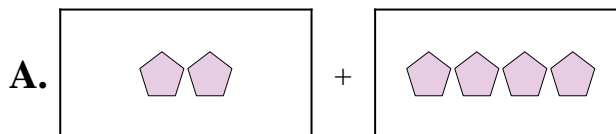
Risposte

1. _____
2. _____
3. _____
4. _____
5. _____
6. _____
7. _____
8. _____
9. _____
10. _____

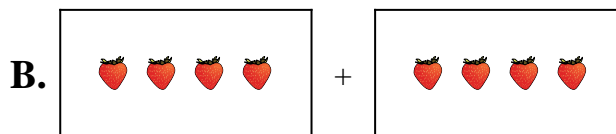


Abbina ogni addizione con il suo equivalente grafico.

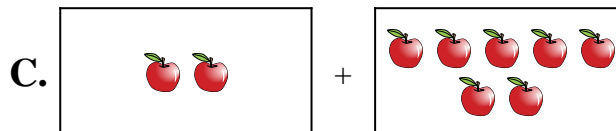
1) $8 + 4$



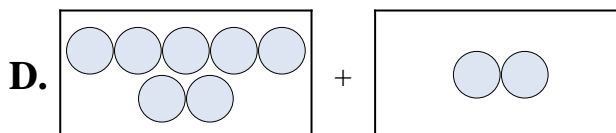
2) $9 + 3$



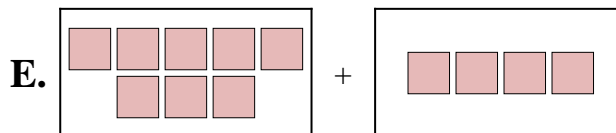
3) $2 + 4$



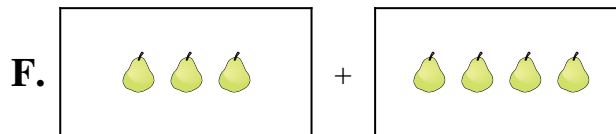
4) $4 + 4$



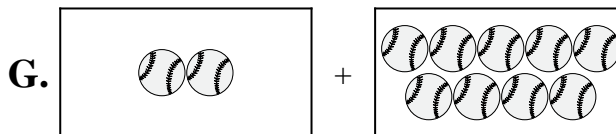
5) $2 + 9$



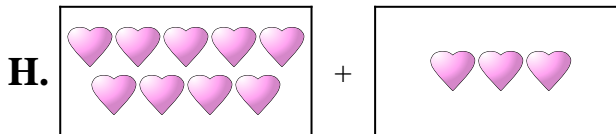
6) $8 + 8$



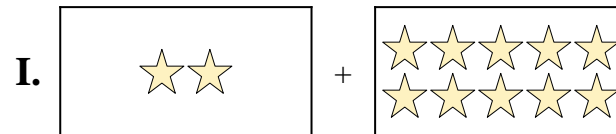
7) $7 + 2$



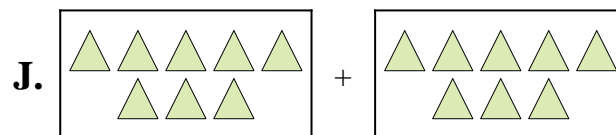
8) $2 + 7$



9) $2 + 10$



10) $3 + 4$



Risposte

1. **E**

2. **H**

3. **A**

4. **B**

5. **G**

6. **J**

7. **D**

8. **C**

9. **I**

10. **F**