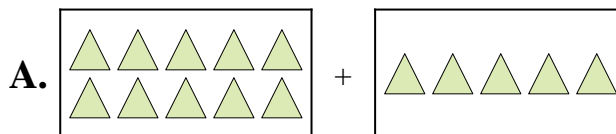


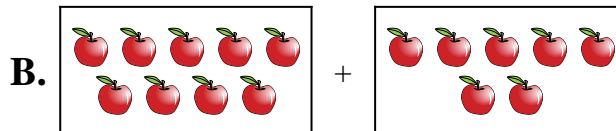


Abbina ogni addizione con il suo equivalente grafico.

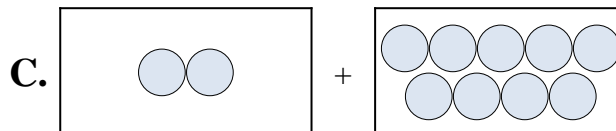
1)  $7 + 7$



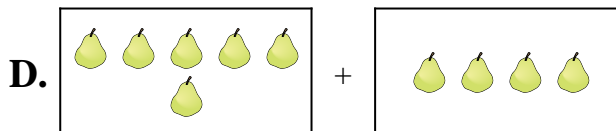
2)  $9 + 7$



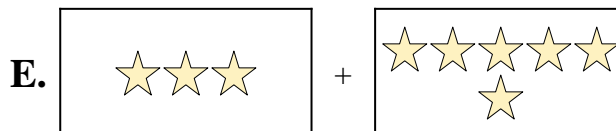
3)  $10 + 5$



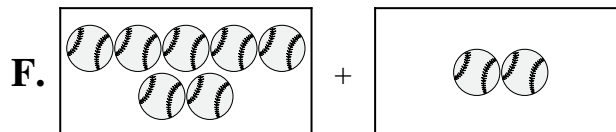
4)  $2 + 9$



5)  $5 + 5$




6)  $6 + 4$



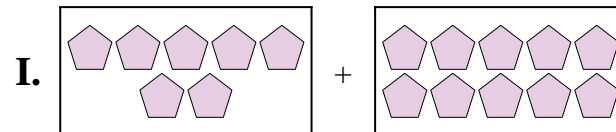
7)  $7 + 10$



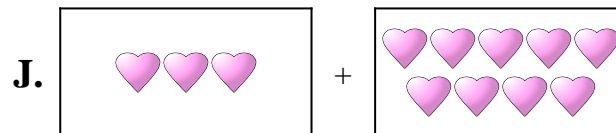
8)  $3 + 6$



9)  $7 + 2$



10)  $3 + 9$



Risposte

1. \_\_\_\_\_

2. \_\_\_\_\_

3. \_\_\_\_\_

4. \_\_\_\_\_

5. \_\_\_\_\_

6. \_\_\_\_\_

7. \_\_\_\_\_

8. \_\_\_\_\_

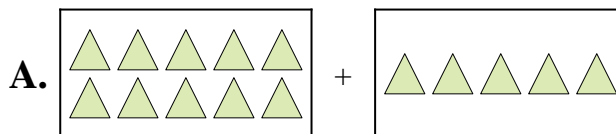
9. \_\_\_\_\_

10. \_\_\_\_\_

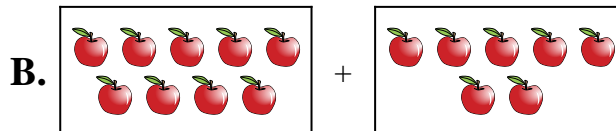


Abbina ogni addizione con il suo equivalente grafico.

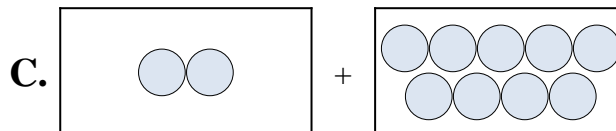
1)  $7 + 7$



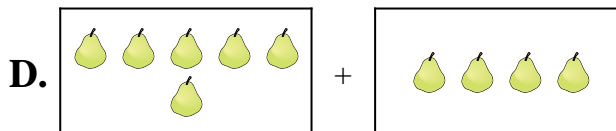
2)  $9 + 7$



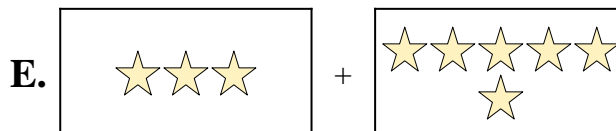
3)  $10 + 5$



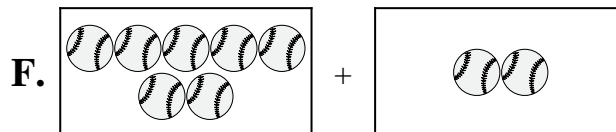
4)  $2 + 9$



5)  $5 + 5$




6)  $6 + 4$



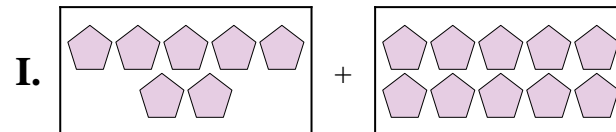
7)  $7 + 10$



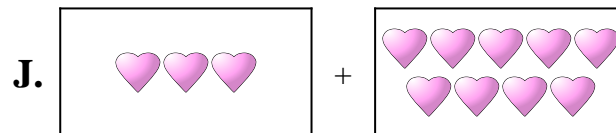
8)  $3 + 6$



9)  $7 + 2$



10)  $3 + 9$



Risposte

1. **G**

2. **B**

3. **A**

4. **C**

5. **H**

6. **D**

7. **I**

8. **E**

9. **F**

10. **J**