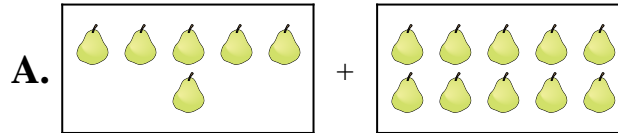


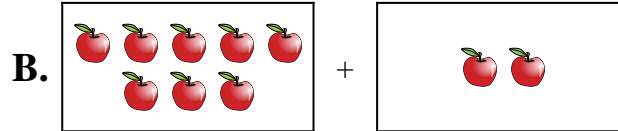


Abbina ogni addizione con il suo equivalente grafico.

1)  $10 + 1$



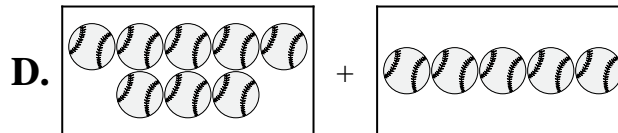
2)  $4 + 6$



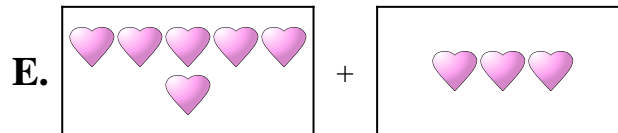
3)  $9 + 2$



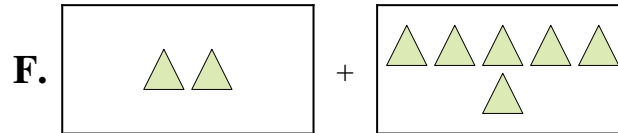
4)  $2 + 6$



5)  $6 + 3$



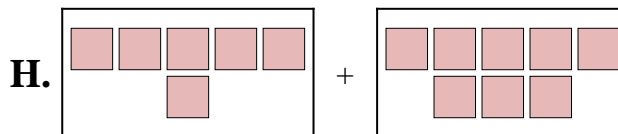
6)  $6 + 1$



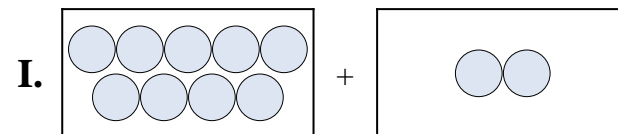
7)  $8 + 2$



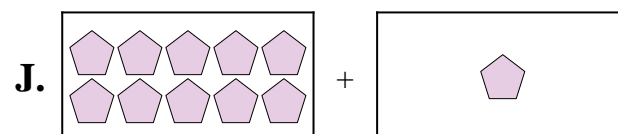
8)  $8 + 5$



9)  $6 + 10$



10)  $6 + 8$



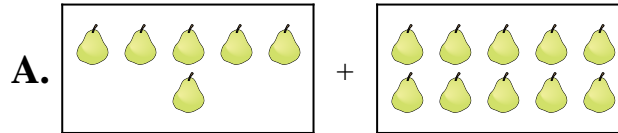
Risposte

1. \_\_\_\_\_
2. \_\_\_\_\_
3. \_\_\_\_\_
4. \_\_\_\_\_
5. \_\_\_\_\_
6. \_\_\_\_\_
7. \_\_\_\_\_
8. \_\_\_\_\_
9. \_\_\_\_\_
10. \_\_\_\_\_

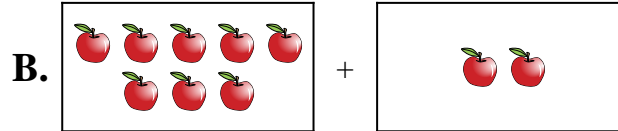


Abbina ogni addizione con il suo equivalente grafico.

1)  $10 + 1$



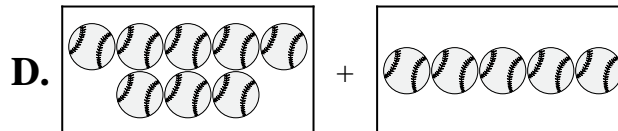
2)  $4 + 6$



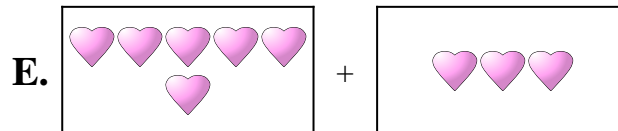
3)  $9 + 2$



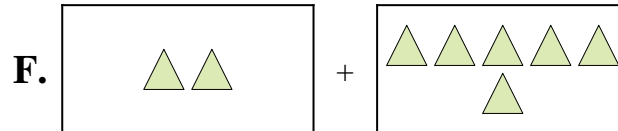
4)  $2 + 6$



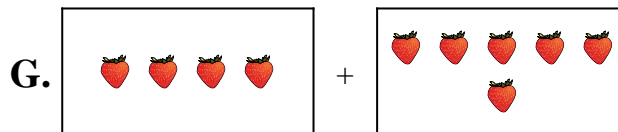
5)  $6 + 3$



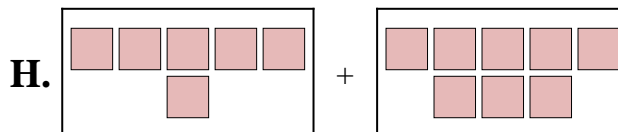
6)  $6 + 1$



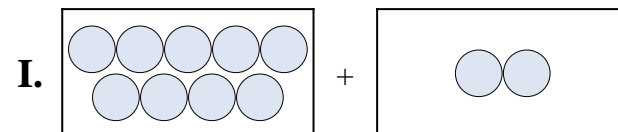
7)  $8 + 2$



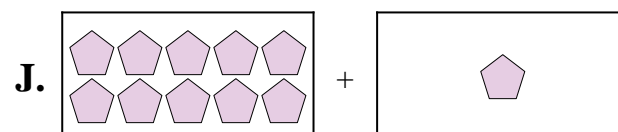
8)  $8 + 5$



9)  $6 + 10$



10)  $6 + 8$



Risposte

1.     **J**    

2.     **G**    

3.     **I**    

4.     **F**    

5.     **E**    

6.     **C**    

7.     **B**    

8.     **D**    

9.     **A**    

10.     **H**