

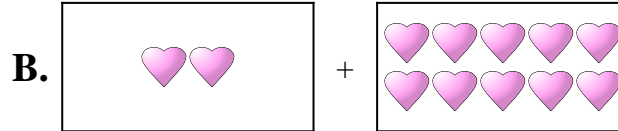


Abbina ogni addizione con il suo equivalente grafico.

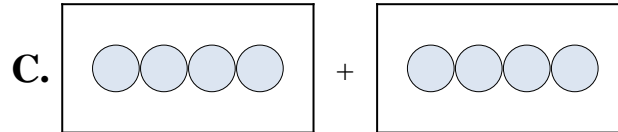
1) $7 + 7$



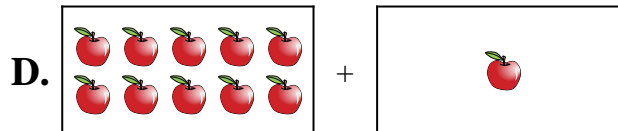
2) $4 + 4$



3) $3 + 5$



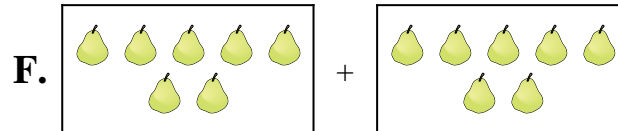
4) $2 + 2$



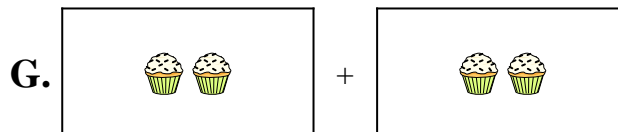
5) $5 + 2$



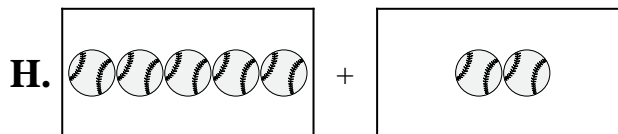
6) $10 + 1$



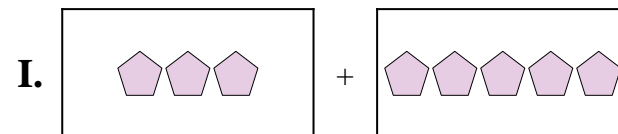
7) $9 + 3$



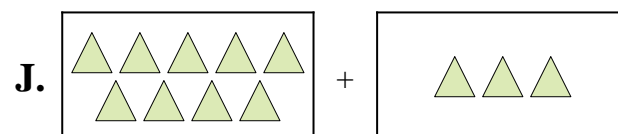
8) $2 + 10$



9) $7 + 6$



10) $7 + 4$



Risposte

1. _____
2. _____
3. _____
4. _____
5. _____
6. _____
7. _____
8. _____
9. _____
10. _____

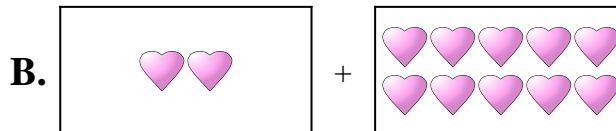


Abbina ogni addizione con il suo equivalente grafico.

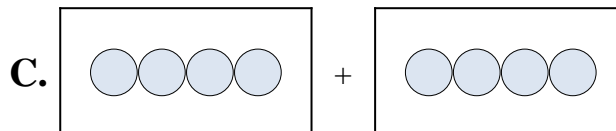
1) $7 + 7$



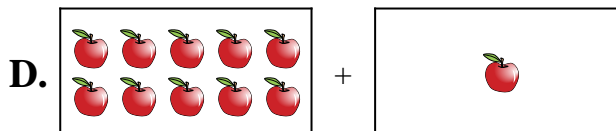
2) $4 + 4$



3) $3 + 5$



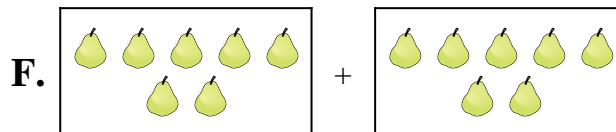
4) $2 + 2$



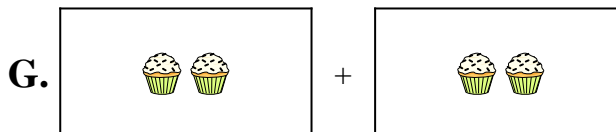
5) $5 + 2$



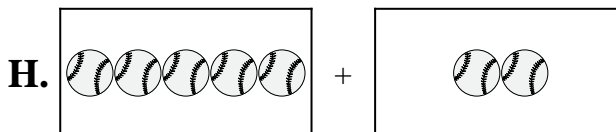
6) $10 + 1$



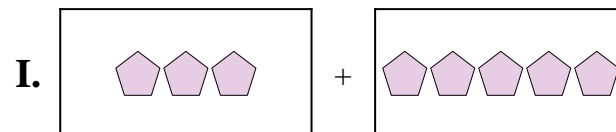
7) $9 + 3$



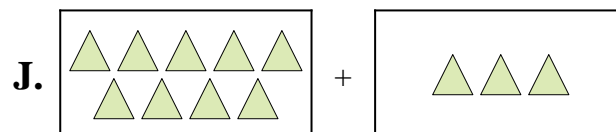
8) $2 + 10$



9) $7 + 6$



10) $7 + 4$



Risposte

1. **F**

2. **C**

3. **I**

4. **G**

5. **H**

6. **D**

7. **J**

8. **B**

9. **E**

10. **A**