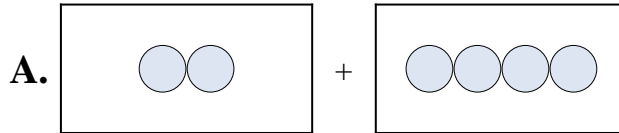




Abbina ogni addizione con il suo equivalente grafico.

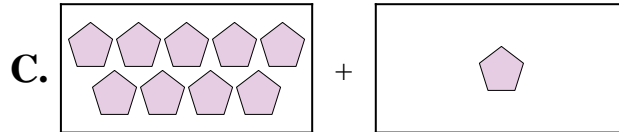
1) $5 + 7$



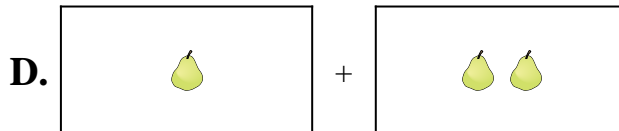
2) $3 + 10$



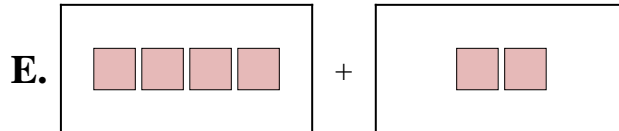
3) $2 + 4$



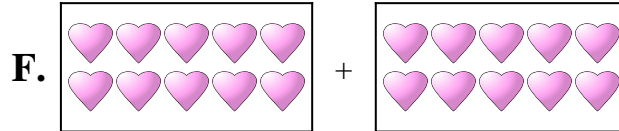
4) $4 + 2$



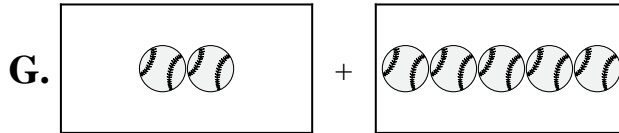
5) $4 + 4$



6) $9 + 1$



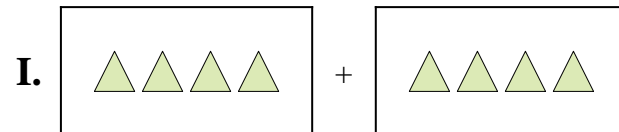
7) $10 + 10$



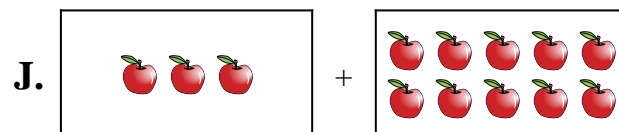
8) $1 + 2$



9) $2 + 5$



10) $8 + 4$



Risposte

1. _____

2. _____

3. _____

4. _____

5. _____

6. _____

7. _____

8. _____

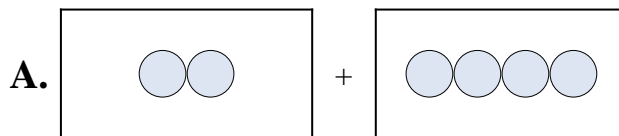
9. _____

10. _____



Abbina ogni addizione con il suo equivalente grafico.

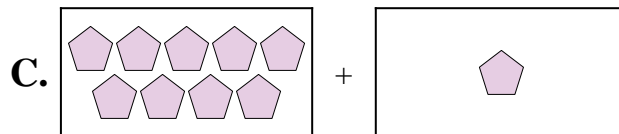
1) $5 + 7$



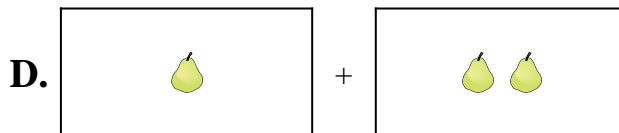
2) $3 + 10$



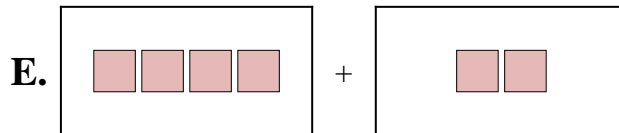
3) $2 + 4$



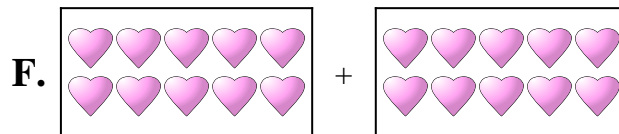
4) $4 + 2$



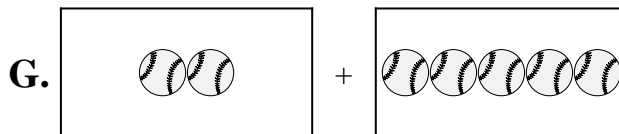
5) $4 + 4$



6) $9 + 1$



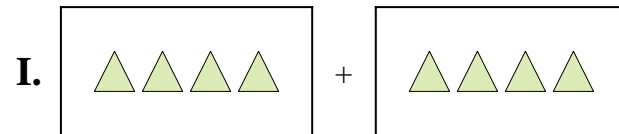
7) $10 + 10$



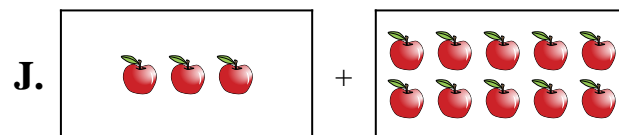
8) $1 + 2$



9) $2 + 5$



10) $8 + 4$



Risposte

1. **H**

2. **J**

3. **A**

4. **E**

5. **I**

6. **C**

7. **F**

8. **D**

9. **G**

10. **B**