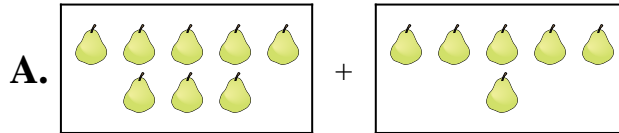




Abbina ogni addizione con il suo equivalente grafico.

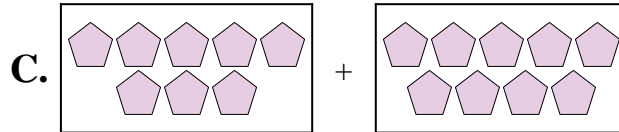
1) $2 + 5$



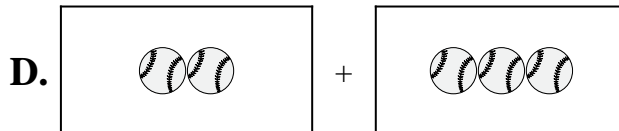
2) $10 + 10$



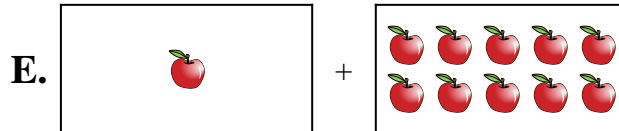
3) $4 + 10$




4) $3 + 2$



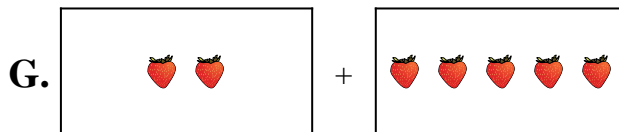
5) $8 + 9$



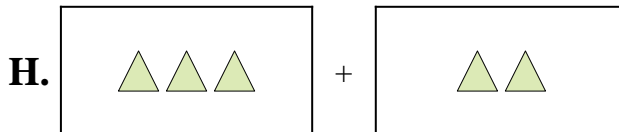
6) $10 + 4$



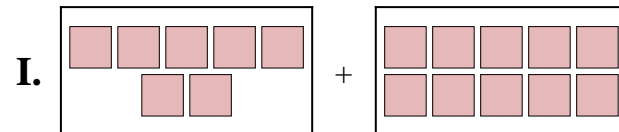
7) $7 + 10$



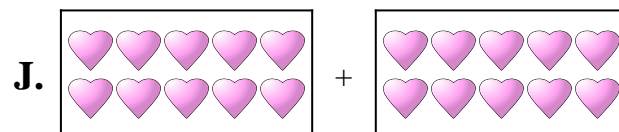
8) $2 + 3$



9) $8 + 6$



10) $1 + 10$



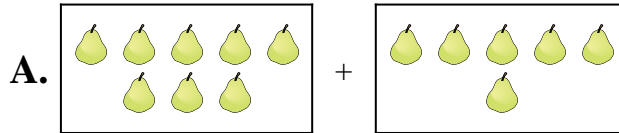
Risposte

1. _____
2. _____
3. _____
4. _____
5. _____
6. _____
7. _____
8. _____
9. _____
10. _____



Abbina ogni addizione con il suo equivalente grafico.

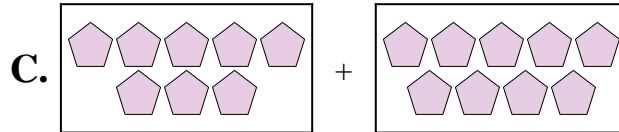
1) $2 + 5$



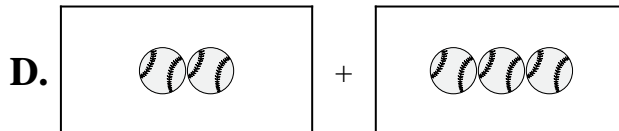
2) $10 + 10$



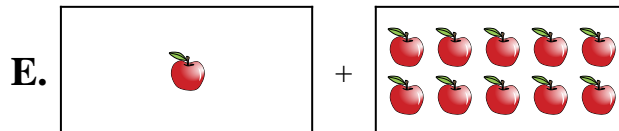
3) $4 + 10$




4) $3 + 2$



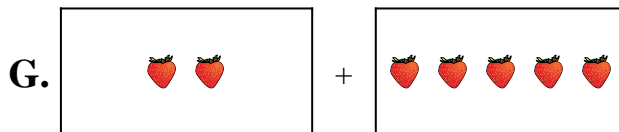
5) $8 + 9$



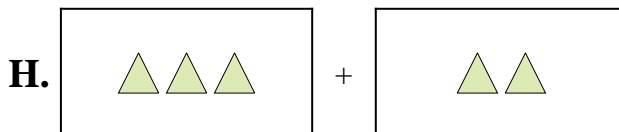
6) $10 + 4$



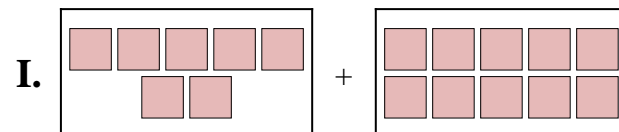
7) $7 + 10$



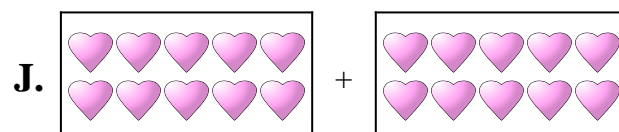
8) $2 + 3$



9) $8 + 6$



10) $1 + 10$



Risposte

1. **G**

2. **J**

3. **B**

4. **H**

5. **C**

6. **F**

7. **I**

8. **D**

9. **A**

10. **E**