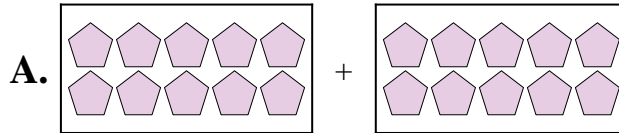


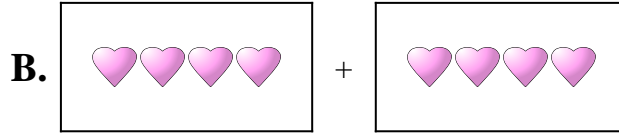


Abbina ogni addizione con il suo equivalente grafico.

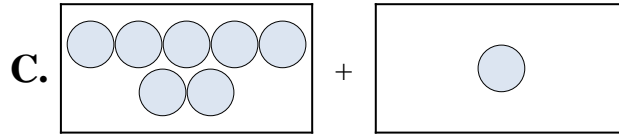
1) $1 + 1$



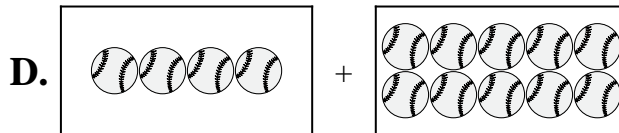
2) $2 + 7$



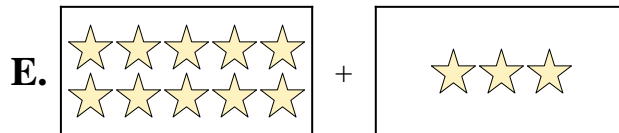
3) $10 + 10$



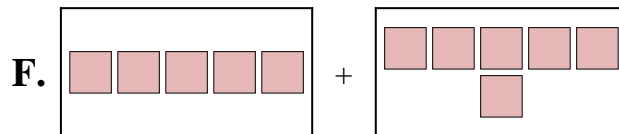
4) $10 + 2$




5) $4 + 10$



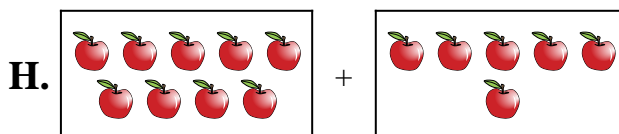
6) $5 + 6$



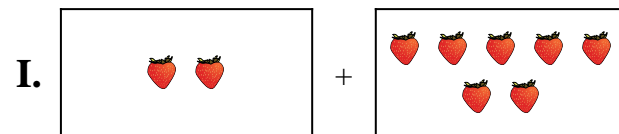
7) $9 + 6$



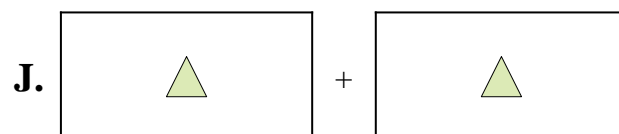
8) $10 + 3$



9) $7 + 1$



10) $4 + 4$



Risposte

1. _____

2. _____

3. _____

4. _____

5. _____

6. _____

7. _____

8. _____

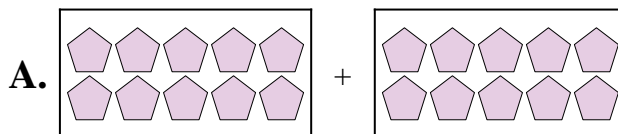
9. _____

10. _____




Abbina ogni addizione con il suo equivalente grafico.

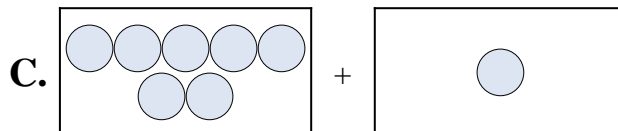
1) $1 + 1$



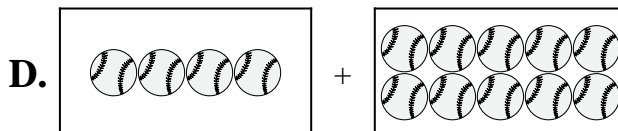
2) $2 + 7$



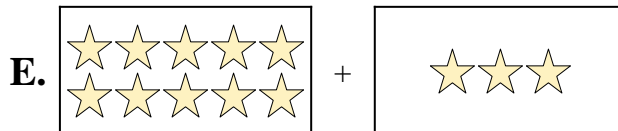
3) $10 + 10$



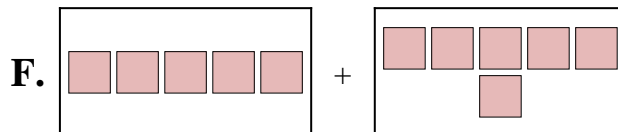
4) $10 + 2$




5) $4 + 10$



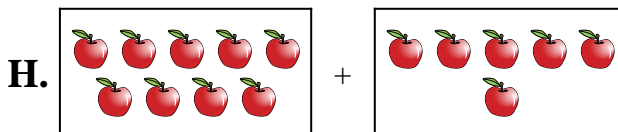
6) $5 + 6$



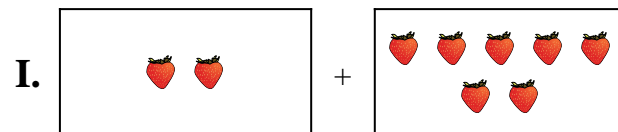
7) $9 + 6$



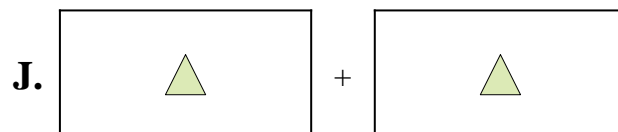
8) $10 + 3$



9) $7 + 1$



10) $4 + 4$



Risposte

1. **J**

2. **I**

3. **A**

4. **G**

5. **D**

6. **F**

7. **H**

8. **E**

9. **C**

10. **B**