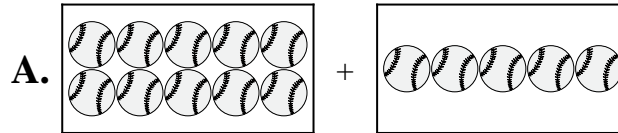




Abbina ogni addizione con il suo equivalente grafico.

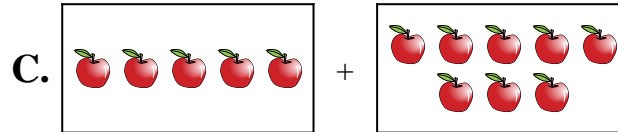
1)  $4 + 8$



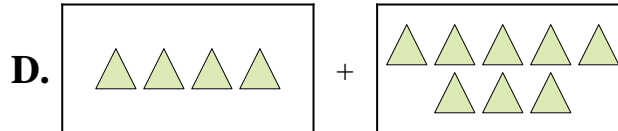
2)  $8 + 6$



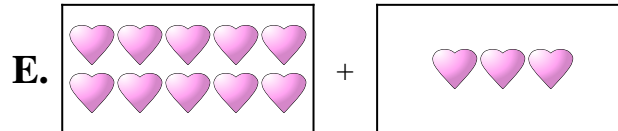
3)  $10 + 3$



4)  $10 + 6$




5)  $2 + 2$



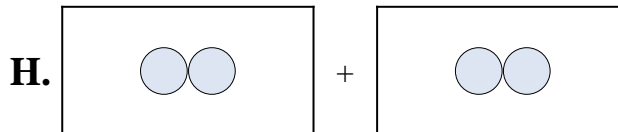
6)  $1 + 6$



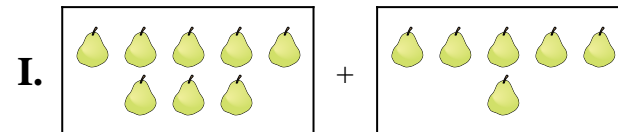
7)  $10 + 5$



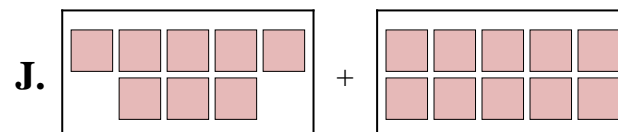
8)  $6 + 3$



9)  $5 + 8$



10)  $8 + 10$



**Risposte**

1. \_\_\_\_\_

2. \_\_\_\_\_

3. \_\_\_\_\_

4. \_\_\_\_\_

5. \_\_\_\_\_

6. \_\_\_\_\_

7. \_\_\_\_\_

8. \_\_\_\_\_

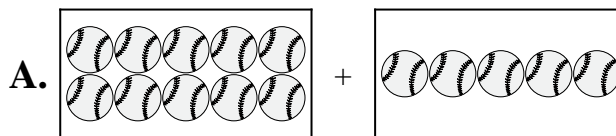
9. \_\_\_\_\_

10. \_\_\_\_\_

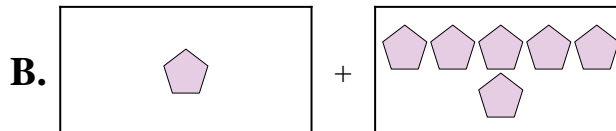


Abbina ogni addizione con il suo equivalente grafico.

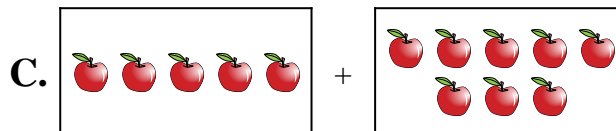
1)  $4 + 8$



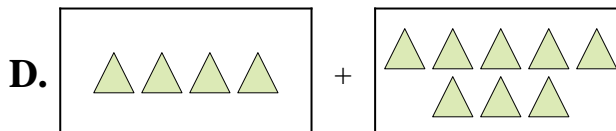
2)  $8 + 6$



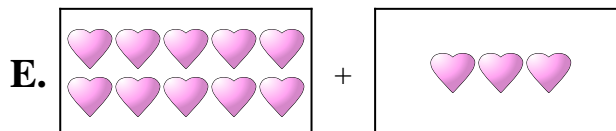
3)  $10 + 3$



4)  $10 + 6$




5)  $2 + 2$



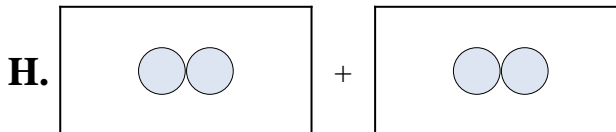
6)  $1 + 6$



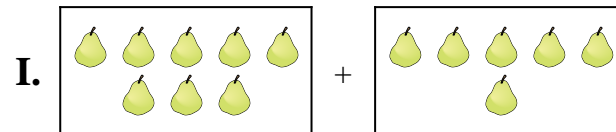
7)  $10 + 5$



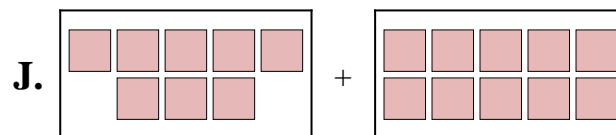
8)  $6 + 3$



9)  $5 + 8$



10)  $8 + 10$



Risposte

1.     **D**    

2.     **I**    

3.     **E**    

4.     **F**    

5.     **H**    

6.     **B**    

7.     **A**    

8.     **G**    

9.     **C**    

10.     **J**