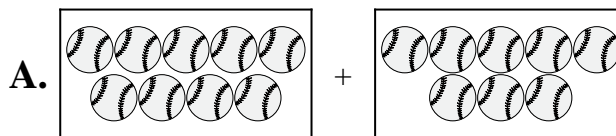


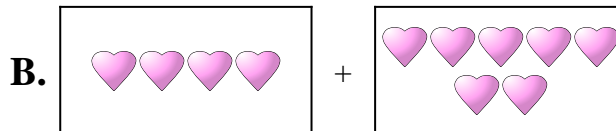


Abbina ogni addizione con il suo equivalente grafico.

1) $6 + 3$



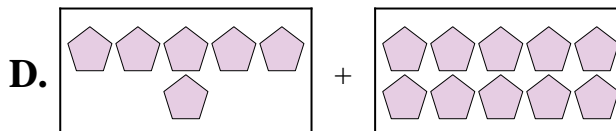
2) $8 + 6$



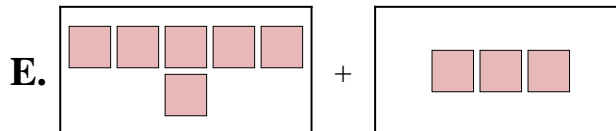
3) $9 + 8$



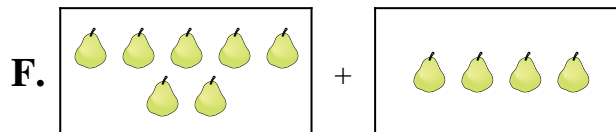
4) $7 + 4$



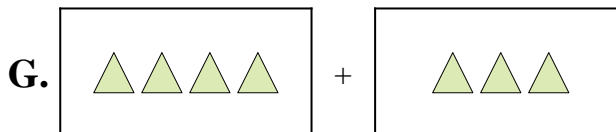
5) $6 + 10$



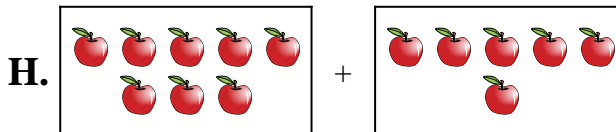
6) $9 + 9$



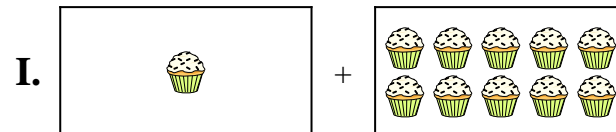
7) $1 + 10$



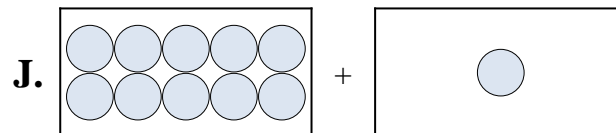
8) $4 + 7$



9) $4 + 3$



10) $10 + 1$



Risposte

1. _____

2. _____

3. _____

4. _____

5. _____

6. _____

7. _____

8. _____

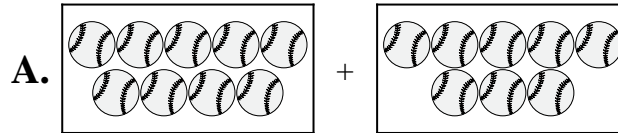
9. _____

10. _____

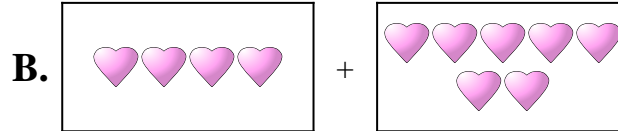


Abbina ogni addizione con il suo equivalente grafico.

1) $6 + 3$



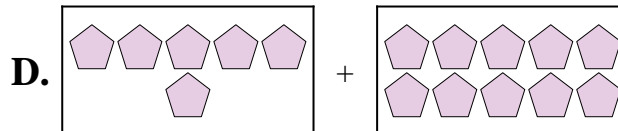
2) $8 + 6$



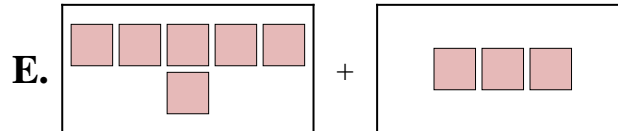
3) $9 + 8$



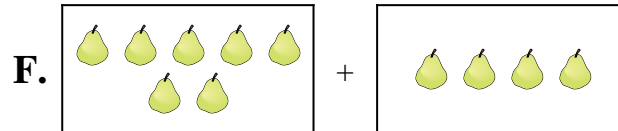
4) $7 + 4$



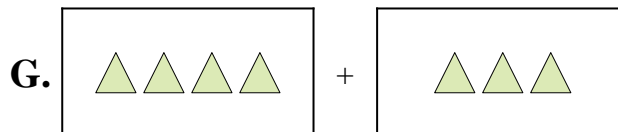
5) $6 + 10$



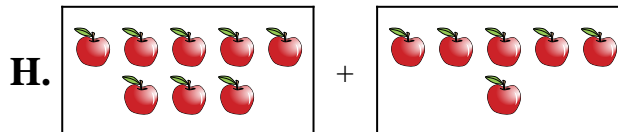
6) $9 + 9$



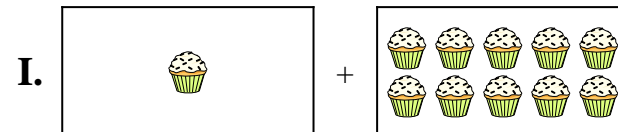
7) $1 + 10$



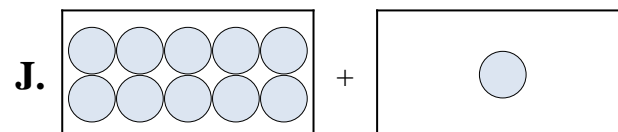
8) $4 + 7$



9) $4 + 3$



10) $10 + 1$



Risposte

1. **E**

2. **H**

3. **A**

4. **F**

5. **D**

6. **C**

7. **I**

8. **B**

9. **G**

10. **J**