



Risolvi ogni operazione.

1) $3 + 0 = \underline{\quad}$

2) $1 + 1 = \underline{\quad}$

3) $3 + 2 = \underline{\quad}$

4) $1 + 4 = \underline{\quad}$

5) $2 + 0 = \underline{\quad}$

6) $3 + 1 = \underline{\quad}$

7) $2 + 3 = \underline{\quad}$

8) $2 + 1 = \underline{\quad}$

9) $3 - 3 = \underline{\quad}$

10) $3 - 1 = \underline{\quad}$

11) $2 - 2 = \underline{\quad}$

12) $1 - 0 = \underline{\quad}$

13) $5 - 5 = \underline{\quad}$

14) $4 - 3 = \underline{\quad}$

15) $5 - 1 = \underline{\quad}$

16) $4 - 1 = \underline{\quad}$

Risposte

1. _____

2. _____

3. _____

4. _____

5. _____

6. _____

7. _____

8. _____

9. _____

10. _____

11. _____

12. _____

13. _____

14. _____

15. _____

16. _____



Risolvi ogni operazione.

1) $3 + 0 = \underline{3}$

2) $1 + 1 = \underline{2}$

3) $3 + 2 = \underline{5}$

4) $1 + 4 = \underline{5}$

5) $2 + 0 = \underline{2}$

6) $3 + 1 = \underline{4}$

7) $2 + 3 = \underline{5}$

8) $2 + 1 = \underline{3}$

9) $3 - 3 = \underline{0}$

10) $3 - 1 = \underline{2}$

11) $2 - 2 = \underline{0}$

12) $1 - 0 = \underline{1}$

13) $5 - 5 = \underline{0}$

14) $4 - 3 = \underline{1}$

15) $5 - 1 = \underline{4}$

16) $4 - 1 = \underline{3}$

Risposte1. 32. 23. 54. 55. 26. 47. 58. 39. 010. 211. 012. 113. 014. 115. 416. 3



Risolvi ogni operazione.

1) $3 + 0 = \underline{\quad}$

2) $1 + 1 = \underline{\quad}$

3) $3 + 2 = \underline{\quad}$

4) $1 + 4 = \underline{\quad}$

5) $2 + 0 = \underline{\quad}$

6) $3 + 1 = \underline{\quad}$

7) $2 + 3 = \underline{\quad}$

8) $2 + 1 = \underline{\quad}$

9) $3 - 3 = \underline{\quad}$

10) $3 - 1 = \underline{\quad}$

11) $2 - 2 = \underline{\quad}$

12) $1 - 0 = \underline{\quad}$

13) $5 - 5 = \underline{\quad}$

14) $4 - 3 = \underline{\quad}$

15) $5 - 1 = \underline{\quad}$

16) $4 - 1 = \underline{\quad}$

Risposte

1. _____

2. _____

3. _____

4. _____

5. _____

6. _____

7. _____

8. _____

9. _____

10. _____

11. _____

12. _____

13. _____

14. _____

15. _____

16. _____



Risolvi ogni operazione.

1) $4 + 1 = \underline{\quad}$

2) $3 + 0 = \underline{\quad}$

3) $3 + 1 = \underline{\quad}$

4) $2 + 3 = \underline{\quad}$

5) $2 + 2 = \underline{\quad}$

6) $1 + 3 = \underline{\quad}$

7) $1 + 0 = \underline{\quad}$

8) $3 + 2 = \underline{\quad}$

9) $4 - 4 = \underline{\quad}$

10) $5 - 4 = \underline{\quad}$

11) $4 - 2 = \underline{\quad}$

12) $4 - 1 = \underline{\quad}$

13) $3 - 2 = \underline{\quad}$

14) $2 - 2 = \underline{\quad}$

15) $1 - 0 = \underline{\quad}$

16) $5 - 5 = \underline{\quad}$

Risposte

1. _____

2. _____

3. _____

4. _____

5. _____

6. _____

7. _____

8. _____

9. _____

10. _____

11. _____

12. _____

13. _____

14. _____

15. _____

16. _____



Risolvi ogni operazione.

1) $4 + 1 = \underline{5}$

2) $3 + 0 = \underline{3}$

3) $3 + 1 = \underline{4}$

4) $2 + 3 = \underline{5}$

5) $2 + 2 = \underline{4}$

6) $1 + 3 = \underline{4}$

7) $1 + 0 = \underline{1}$

8) $3 + 2 = \underline{5}$

9) $4 - 4 = \underline{0}$

10) $5 - 4 = \underline{1}$

11) $4 - 2 = \underline{2}$

12) $4 - 1 = \underline{3}$

13) $3 - 2 = \underline{1}$

14) $2 - 2 = \underline{0}$



15) $1 - 0 = \underline{1}$


16) $5 - 5 = \underline{0}$



Risposte1. 52. 33. 44. 55. 46. 47. 18. 59. 010. 111. 212. 313. 114. 015. 116. 0







Risolvi ogni operazione.



1) $4 + 1 = \underline{\quad}$
 


2) $3 + 0 = \underline{\quad}$




3) $3 + 1 = \underline{\quad}$
 



4) $2 + 3 = \underline{\quad}$
 



5) $2 + 2 = \underline{\quad}$
 



6) $1 + 3 = \underline{\quad}$
 



7) $1 + 0 = \underline{\quad}$




8) $3 + 2 = \underline{\quad}$
 



9) $4 - 4 = \underline{\quad}$
 


10) $5 - 4 = \underline{\quad}$
 



11) $4 - 2 = \underline{\quad}$
 

12) $4 - 1 = \underline{\quad}$
 

13) $3 - 2 = \underline{\quad}$
 

14) $2 - 2 = \underline{\quad}$
 

15) $1 - 0 = \underline{\quad}$


16) $5 - 5 = \underline{\quad}$
 

Risposte

1. _____
2. _____
3. _____
4. _____
5. _____
6. _____
7. _____
8. _____
9. _____
10. _____
11. _____
12. _____
13. _____
14. _____
15. _____
16. _____



Risolvi ogni operazione.

1) $2 + 1 = \underline{\quad}$

2) $3 + 1 = \underline{\quad}$

3) $4 + 0 = \underline{\quad}$

4) $3 + 2 = \underline{\quad}$

5) $1 + 3 = \underline{\quad}$

6) $2 + 3 = \underline{\quad}$

7) $1 + 4 = \underline{\quad}$

8) $2 + 0 = \underline{\quad}$

9) $5 - 4 = \underline{\quad}$

10) $3 - 1 = \underline{\quad}$

11) $3 - 2 = \underline{\quad}$

12) $5 - 2 = \underline{\quad}$

13) $2 - 1 = \underline{\quad}$

14) $4 - 3 = \underline{\quad}$

15) $1 - 1 = \underline{\quad}$

16) $5 - 1 = \underline{\quad}$

Risposte

1. _____

2. _____

3. _____

4. _____

5. _____

6. _____

7. _____

8. _____

9. _____

10. _____

11. _____

12. _____

13. _____

14. _____

15. _____

16. _____



Risolvi ogni operazione.

1) $2 + 1 = \underline{3}$

2) $3 + 1 = \underline{4}$

3) $4 + 0 = \underline{4}$

4) $3 + 2 = \underline{5}$

5) $1 + 3 = \underline{4}$

6) $2 + 3 = \underline{5}$

7) $1 + 4 = \underline{5}$

8) $2 + 0 = \underline{2}$

9) $5 - 4 = \underline{1}$

10) $3 - 1 = \underline{2}$

11) $3 - 2 = \underline{1}$

12) $5 - 2 = \underline{3}$

13) $2 - 1 = \underline{1}$

14) $4 - 3 = \underline{1}$


15) $1 - 1 = \underline{0}$


16) $5 - 1 = \underline{4}$


Risposte1. 32. 43. 44. 55. 46. 57. 58. 29. 110. 211. 112. 313. 114. 115. 016. 4





Risolvi ogni operazione.


1) $2 + 1 = \underline{\quad}$



2) $3 + 1 = \underline{\quad}$



3) $4 + 0 = \underline{\quad}$


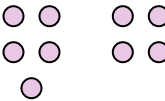
4) $3 + 2 = \underline{\quad}$



5) $1 + 3 = \underline{\quad}$



6) $2 + 3 = \underline{\quad}$


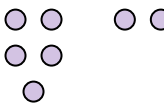
7) $1 + 4 = \underline{\quad}$



8) $2 + 0 = \underline{\quad}$



9) $5 - 4 = \underline{\quad}$



10) $3 - 1 = \underline{\quad}$



11) $3 - 2 = \underline{\quad}$


12) $5 - 2 = \underline{\quad}$


13) $2 - 1 = \underline{\quad}$


14) $4 - 3 = \underline{\quad}$


15) $1 - 1 = \underline{\quad}$


16) $5 - 1 = \underline{\quad}$


Risposte

1. _____

2. _____

3. _____

4. _____

5. _____

6. _____

7. _____

8. _____

9. _____

10. _____

11. _____

12. _____

13. _____

14. _____

15. _____

16. _____



Risolvi ogni operazione.

1) $3 + 0 = \underline{\quad}$

2) $5 + 0 = \underline{\quad}$

3) $2 + 1 = \underline{\quad}$

4) $3 + 2 = \underline{\quad}$

5) $1 + 2 = \underline{\quad}$

6) $2 + 2 = \underline{\quad}$

7) $3 + 1 = \underline{\quad}$

8) $1 + 4 = \underline{\quad}$

9) $1 - 1 = \underline{\quad}$

10) $5 - 1 = \underline{\quad}$

11) $3 - 1 = \underline{\quad}$

12) $5 - 2 = \underline{\quad}$

13) $4 - 4 = \underline{\quad}$

14) $4 - 1 = \underline{\quad}$

15) $5 - 5 = \underline{\quad}$

16) $4 - 2 = \underline{\quad}$

Risposte

1. _____

2. _____

3. _____

4. _____

5. _____

6. _____

7. _____

8. _____

9. _____

10. _____

11. _____

12. _____

13. _____

14. _____

15. _____

16. _____



Risolvi ogni operazione.

1) $3 + 0 = \underline{3}$

2) $5 + 0 = \underline{5}$

3) $2 + 1 = \underline{3}$

4) $3 + 2 = \underline{5}$

5) $1 + 2 = \underline{3}$

6) $2 + 2 = \underline{4}$

7) $3 + 1 = \underline{4}$

8) $1 + 4 = \underline{5}$

9) $1 - 1 = \underline{0}$

10) $5 - 1 = \underline{4}$

11) $3 - 1 = \underline{2}$

12) $5 - 2 = \underline{3}$

13) $4 - 4 = \underline{0}$

14) $4 - 1 = \underline{3}$


15) $5 - 5 = \underline{0}$


16) $4 - 2 = \underline{2}$


Risposte1. 32. 53. 34. 55. 36. 47. 48. 59. 010. 411. 212. 313. 014. 315. 016. 2

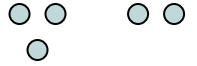



Risolvi ogni operazione.


1) $3 + 0 = \underline{\quad}$



2) $5 + 0 = \underline{\quad}$



3) $2 + 1 = \underline{\quad}$



4) $3 + 2 = \underline{\quad}$


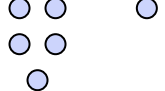
5) $1 + 2 = \underline{\quad}$



6) $2 + 2 = \underline{\quad}$


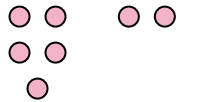
7) $3 + 1 = \underline{\quad}$


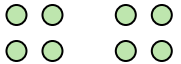
8) $1 + 4 = \underline{\quad}$



9) $1 - 1 = \underline{\quad}$


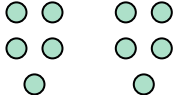
10) $5 - 1 = \underline{\quad}$



11) $3 - 1 = \underline{\quad}$


12) $5 - 2 = \underline{\quad}$


13) $4 - 4 = \underline{\quad}$


14) $4 - 1 = \underline{\quad}$


15) $5 - 5 = \underline{\quad}$


16) $4 - 2 = \underline{\quad}$


Risposte

1. _____

2. _____

3. _____

4. _____

5. _____

6. _____

7. _____

8. _____

9. _____

10. _____

11. _____

12. _____

13. _____

14. _____

15. _____

16. _____



Risolvi ogni operazione.

1) $4 + 0 = \underline{\quad}$

2) $1 + 1 = \underline{\quad}$

3) $1 + 4 = \underline{\quad}$

4) $5 + 0 = \underline{\quad}$

5) $1 + 3 = \underline{\quad}$

6) $4 + 1 = \underline{\quad}$

7) $2 + 2 = \underline{\quad}$

8) $1 + 2 = \underline{\quad}$

9) $4 - 4 = \underline{\quad}$

10) $3 - 3 = \underline{\quad}$

11) $1 - 1 = \underline{\quad}$

12) $2 - 2 = \underline{\quad}$

13) $5 - 1 = \underline{\quad}$

14) $1 - 0 = \underline{\quad}$

15) $4 - 3 = \underline{\quad}$

16) $5 - 5 = \underline{\quad}$

Risposte

1. _____

2. _____

3. _____

4. _____

5. _____

6. _____

7. _____

8. _____

9. _____

10. _____

11. _____

12. _____

13. _____

14. _____

15. _____

16. _____



Risolvi ogni operazione.

1) $4 + 0 = \underline{4}$

2) $1 + 1 = \underline{2}$

3) $1 + 4 = \underline{5}$

4) $5 + 0 = \underline{5}$

5) $1 + 3 = \underline{4}$

6) $4 + 1 = \underline{5}$

7) $2 + 2 = \underline{4}$

8) $1 + 2 = \underline{3}$

9) $4 - 4 = \underline{0}$

10) $3 - 3 = \underline{0}$

11) $1 - 1 = \underline{0}$

12) $2 - 2 = \underline{0}$

13) $5 - 1 = \underline{4}$

14) $1 - 0 = \underline{1}$


15) $4 - 3 = \underline{1}$



16) $5 - 5 = \underline{0}$



Risposte1. 42. 23. 54. 55. 46. 57. 48. 39. 010. 011. 012. 013. 414. 115. 116. 0






Risolvi ogni operazione.



1) $4 + 0 = \underline{\quad}$




2) $1 + 1 = \underline{\quad}$
 + 



3) $1 + 4 = \underline{\quad}$
 + 



4) $5 + 0 = \underline{\quad}$




5) $1 + 3 = \underline{\quad}$
 + 



6) $4 + 1 = \underline{\quad}$
 + 



7) $2 + 2 = \underline{\quad}$
 + 



8) $1 + 2 = \underline{\quad}$
 + 


9) $4 - 4 = \underline{\quad}$
 - 



10) $3 - 3 = \underline{\quad}$
 - 



11) $1 - 1 = \underline{\quad}$
 - 

12) $2 - 2 = \underline{\quad}$
 - 

13) $5 - 1 = \underline{\quad}$
 - 

14) $1 - 0 = \underline{\quad}$


15) $4 - 3 = \underline{\quad}$
 - 

16) $5 - 5 = \underline{\quad}$
 - 

Risposte

1. _____
2. _____
3. _____
4. _____
5. _____
6. _____
7. _____
8. _____
9. _____
10. _____
11. _____
12. _____
13. _____
14. _____
15. _____
16. _____



Risolvi ogni operazione.

1) $2 + 0 = \underline{\quad}$

2) $1 + 4 = \underline{\quad}$

3) $4 + 0 = \underline{\quad}$

4) $1 + 3 = \underline{\quad}$

5) $2 + 3 = \underline{\quad}$

6) $2 + 2 = \underline{\quad}$

7) $1 + 1 = \underline{\quad}$

8) $3 + 1 = \underline{\quad}$

9) $3 - 2 = \underline{\quad}$

10) $2 - 1 = \underline{\quad}$

11) $4 - 1 = \underline{\quad}$

12) $5 - 1 = \underline{\quad}$

13) $3 - 1 = \underline{\quad}$

14) $5 - 4 = \underline{\quad}$

15) $5 - 3 = \underline{\quad}$

16) $3 - 3 = \underline{\quad}$

Risposte

1. _____

2. _____

3. _____

4. _____

5. _____

6. _____

7. _____

8. _____

9. _____

10. _____

11. _____

12. _____

13. _____

14. _____

15. _____

16. _____



Risolvi ogni operazione.

1) $2 + 0 = \underline{2}$

2) $1 + 4 = \underline{5}$

3) $4 + 0 = \underline{4}$

4) $1 + 3 = \underline{4}$

5) $2 + 3 = \underline{5}$

6) $2 + 2 = \underline{4}$

7) $1 + 1 = \underline{2}$

8) $3 + 1 = \underline{4}$

9) $3 - 2 = \underline{1}$

10) $2 - 1 = \underline{1}$

11) $4 - 1 = \underline{3}$

12) $5 - 1 = \underline{4}$

13) $3 - 1 = \underline{2}$

14) $5 - 4 = \underline{1}$


15) $5 - 3 = \underline{2}$



16) $3 - 3 = \underline{0}$


Risposte1. 22. 53. 44. 45. 56. 47. 28. 49. 110. 111. 312. 413. 214. 115. 216. 0







Risolvi ogni operazione.



1) $2 + 0 = \underline{\quad}$




2) $1 + 4 = \underline{\quad}$
 + 



3) $4 + 0 = \underline{\quad}$




4) $1 + 3 = \underline{\quad}$
 + 



5) $2 + 3 = \underline{\quad}$
 + 



6) $2 + 2 = \underline{\quad}$
 + 



7) $1 + 1 = \underline{\quad}$
 + 



8) $3 + 1 = \underline{\quad}$
 + 



9) $3 - 2 = \underline{\quad}$
 - 



10) $2 - 1 = \underline{\quad}$
 - 



11) $4 - 1 = \underline{\quad}$
 - 

12) $5 - 1 = \underline{\quad}$
 - 

13) $3 - 1 = \underline{\quad}$
 - 

14) $5 - 4 = \underline{\quad}$
 - 

15) $5 - 3 = \underline{\quad}$
 - 

16) $3 - 3 = \underline{\quad}$
 - 

Risposte

1. _____

2. _____

3. _____

4. _____

5. _____

6. _____

7. _____

8. _____

9. _____

10. _____

11. _____

12. _____

13. _____

14. _____

15. _____

16. _____



Risolvi ogni operazione.

1) $3 + 0 = \underline{\quad}$

2) $5 + 0 = \underline{\quad}$

3) $1 + 0 = \underline{\quad}$

4) $1 + 3 = \underline{\quad}$

5) $2 + 1 = \underline{\quad}$

6) $1 + 1 = \underline{\quad}$

7) $1 + 2 = \underline{\quad}$

8) $1 + 4 = \underline{\quad}$

9) $2 - 2 = \underline{\quad}$

10) $5 - 3 = \underline{\quad}$

11) $1 - 1 = \underline{\quad}$

12) $2 - 1 = \underline{\quad}$

13) $3 - 1 = \underline{\quad}$

14) $3 - 3 = \underline{\quad}$

15) $4 - 3 = \underline{\quad}$

16) $5 - 4 = \underline{\quad}$

Risposte

1. _____

2. _____

3. _____

4. _____

5. _____

6. _____

7. _____

8. _____

9. _____

10. _____

11. _____

12. _____

13. _____

14. _____

15. _____

16. _____



Risolvi ogni operazione.

1) $3 + 0 = \underline{3}$

2) $5 + 0 = \underline{5}$

3) $1 + 0 = \underline{1}$

4) $1 + 3 = \underline{4}$

5) $2 + 1 = \underline{3}$

6) $1 + 1 = \underline{2}$

7) $1 + 2 = \underline{3}$

8) $1 + 4 = \underline{5}$

9) $2 - 2 = \underline{0}$

10) $5 - 3 = \underline{2}$

11) $1 - 1 = \underline{0}$

12) $2 - 1 = \underline{1}$

13) $3 - 1 = \underline{2}$

14) $3 - 3 = \underline{0}$

15) $4 - 3 = \underline{1}$


16) $5 - 4 = \underline{1}$

Risposte1. 32. 53. 14. 45. 36. 27. 38. 59. 010. 211. 012. 113. 214. 015. 116. 1




Risolvi ogni operazione.


1) $3 + 0 = \underline{\quad}$




2) $5 + 0 = \underline{\quad}$




3) $1 + 0 = \underline{\quad}$




4) $1 + 3 = \underline{\quad}$




5) $2 + 1 = \underline{\quad}$




6) $1 + 1 = \underline{\quad}$




7) $1 + 2 = \underline{\quad}$



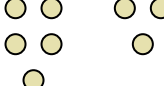
8) $1 + 4 = \underline{\quad}$




9) $2 - 2 = \underline{\quad}$




10) $5 - 3 = \underline{\quad}$




11) $1 - 1 = \underline{\quad}$




12) $2 - 1 = \underline{\quad}$




13) $3 - 1 = \underline{\quad}$



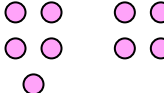
14) $3 - 3 = \underline{\quad}$



15) $4 - 3 = \underline{\quad}$



16) $5 - 4 = \underline{\quad}$



Risposte

1. _____

2. _____

3. _____

4. _____

5. _____

6. _____

7. _____

8. _____

9. _____

10. _____

11. _____

12. _____

13. _____

14. _____

15. _____

16. _____



Risolvi ogni operazione.

1) $2 + 1 = \underline{\quad}$

2) $4 + 0 = \underline{\quad}$

3) $2 + 2 = \underline{\quad}$

4) $1 + 4 = \underline{\quad}$

5) $4 + 1 = \underline{\quad}$

6) $1 + 2 = \underline{\quad}$

7) $3 + 2 = \underline{\quad}$

8) $5 + 0 = \underline{\quad}$

9) $5 - 1 = \underline{\quad}$

10) $5 - 2 = \underline{\quad}$

11) $4 - 4 = \underline{\quad}$

12) $3 - 2 = \underline{\quad}$

13) $1 - 0 = \underline{\quad}$

14) $2 - 2 = \underline{\quad}$

15) $4 - 1 = \underline{\quad}$

16) $5 - 3 = \underline{\quad}$

Risposte

1. _____

2. _____

3. _____

4. _____

5. _____

6. _____

7. _____

8. _____

9. _____

10. _____

11. _____

12. _____

13. _____

14. _____

15. _____

16. _____



Risolvi ogni operazione.

1) $2 + 1 = \underline{3}$

2) $4 + 0 = \underline{4}$

3) $2 + 2 = \underline{4}$

4) $1 + 4 = \underline{5}$

5) $4 + 1 = \underline{5}$

6) $1 + 2 = \underline{3}$

7) $3 + 2 = \underline{5}$

8) $5 + 0 = \underline{5}$

9) $5 - 1 = \underline{4}$

10) $5 - 2 = \underline{3}$

11) $4 - 4 = \underline{0}$

12) $3 - 2 = \underline{1}$

13) $1 - 0 = \underline{1}$

14) $2 - 2 = \underline{0}$

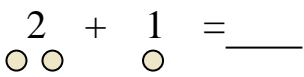
15) $4 - 1 = \underline{3}$

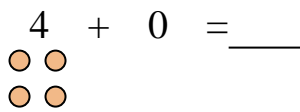
16) $5 - 3 = \underline{2}$


Risposte1. 32. 43. 44. 55. 56. 37. 58. 59. 410. 311. 012. 113. 114. 015. 316. 2

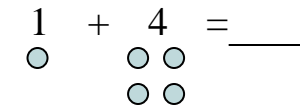


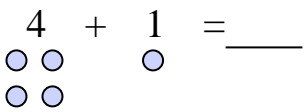
Risolvi ogni operazione.

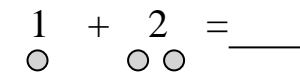
1) $2 + 1 = \underline{\quad}$


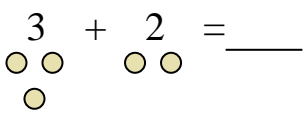
2) $4 + 0 = \underline{\quad}$


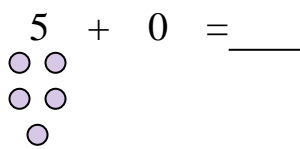
3) $2 + 2 = \underline{\quad}$


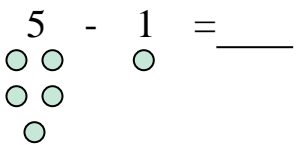
4) $1 + 4 = \underline{\quad}$


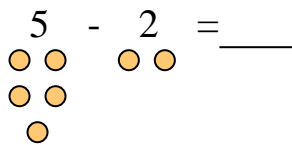
5) $4 + 1 = \underline{\quad}$


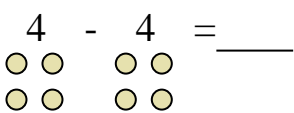
6) $1 + 2 = \underline{\quad}$


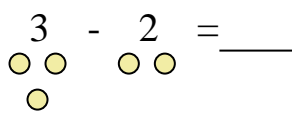
7) $3 + 2 = \underline{\quad}$


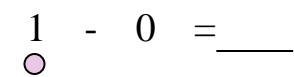
8) $5 + 0 = \underline{\quad}$


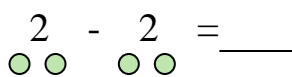
9) $5 - 1 = \underline{\quad}$


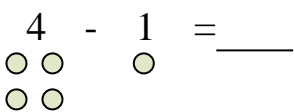
10) $5 - 2 = \underline{\quad}$


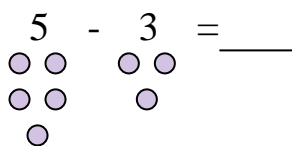
11) $4 - 4 = \underline{\quad}$


12) $3 - 2 = \underline{\quad}$


13) $1 - 0 = \underline{\quad}$


14) $2 - 2 = \underline{\quad}$


15) $4 - 1 = \underline{\quad}$


16) $5 - 3 = \underline{\quad}$


Risposte

1. _____

2. _____

3. _____

4. _____

5. _____

6. _____

7. _____

8. _____

9. _____

10. _____

11. _____

12. _____

13. _____

14. _____

15. _____

16. _____



Risolvi ogni operazione.

1) $4 + 1 = \underline{\quad}$

2) $1 + 2 = \underline{\quad}$

3) $2 + 3 = \underline{\quad}$

4) $2 + 1 = \underline{\quad}$

5) $4 + 0 = \underline{\quad}$

6) $1 + 3 = \underline{\quad}$

7) $3 + 2 = \underline{\quad}$

8) $2 + 2 = \underline{\quad}$

9) $4 - 1 = \underline{\quad}$

10) $1 - 0 = \underline{\quad}$

11) $3 - 3 = \underline{\quad}$

12) $2 - 2 = \underline{\quad}$

13) $3 - 2 = \underline{\quad}$

14) $5 - 1 = \underline{\quad}$

15) $4 - 3 = \underline{\quad}$

16) $5 - 4 = \underline{\quad}$

Risposte

1. _____

2. _____

3. _____

4. _____

5. _____

6. _____

7. _____

8. _____

9. _____

10. _____

11. _____

12. _____

13. _____

14. _____

15. _____

16. _____



Risolvi ogni operazione.

1) $4 + 1 = \underline{5}$

2) $1 + 2 = \underline{3}$

3) $2 + 3 = \underline{5}$

4) $2 + 1 = \underline{3}$

5) $4 + 0 = \underline{4}$

6) $1 + 3 = \underline{4}$

7) $3 + 2 = \underline{5}$

8) $2 + 2 = \underline{4}$

9) $4 - 1 = \underline{3}$

10) $1 - 0 = \underline{1}$

11) $3 - 3 = \underline{0}$

12) $2 - 2 = \underline{0}$

13) $3 - 2 = \underline{1}$

14) $5 - 1 = \underline{4}$


15) $4 - 3 = \underline{1}$

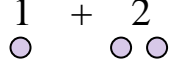
16) $5 - 4 = \underline{1}$

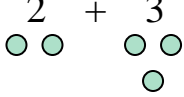
Risposte1. 52. 33. 54. 35. 46. 47. 58. 49. 310. 111. 012. 013. 114. 415. 116. 1

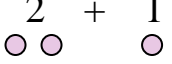



Risolvi ogni operazione.


1) $4 + 1 = \underline{\quad}$



2) $1 + 2 = \underline{\quad}$



3) $2 + 3 = \underline{\quad}$



4) $2 + 1 = \underline{\quad}$



5) $4 + 0 = \underline{\quad}$



6) $1 + 3 = \underline{\quad}$



7) $3 + 2 = \underline{\quad}$


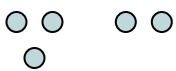
8) $2 + 2 = \underline{\quad}$


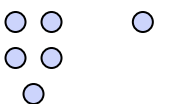
9) $4 - 1 = \underline{\quad}$


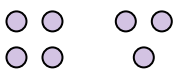
10) $1 - 0 = \underline{\quad}$


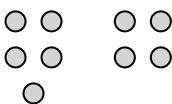
11) $3 - 3 = \underline{\quad}$


12) $2 - 2 = \underline{\quad}$


13) $3 - 2 = \underline{\quad}$


14) $5 - 1 = \underline{\quad}$


15) $4 - 3 = \underline{\quad}$


16) $5 - 4 = \underline{\quad}$


Risposte

1. _____

2. _____

3. _____

4. _____

5. _____

6. _____

7. _____

8. _____

9. _____

10. _____

11. _____

12. _____

13. _____

14. _____

15. _____

16. _____



Risolvi ogni operazione.

1) $1 + 4 = \underline{\quad}$

2) $2 + 1 = \underline{\quad}$

3) $1 + 2 = \underline{\quad}$

4) $3 + 2 = \underline{\quad}$

5) $4 + 0 = \underline{\quad}$

6) $2 + 3 = \underline{\quad}$

7) $1 + 1 = \underline{\quad}$

8) $5 + 0 = \underline{\quad}$

9) $2 - 2 = \underline{\quad}$

10) $5 - 1 = \underline{\quad}$

11) $3 - 1 = \underline{\quad}$

12) $4 - 1 = \underline{\quad}$

13) $4 - 3 = \underline{\quad}$

14) $3 - 2 = \underline{\quad}$

15) $4 - 4 = \underline{\quad}$

16) $5 - 4 = \underline{\quad}$

Risposte

1. _____

2. _____

3. _____

4. _____

5. _____

6. _____

7. _____

8. _____

9. _____

10. _____

11. _____

12. _____

13. _____

14. _____

15. _____

16. _____



Risolvi ogni operazione.

1) $1 + 4 = \underline{5}$

2) $2 + 1 = \underline{3}$

3) $1 + 2 = \underline{3}$

4) $3 + 2 = \underline{5}$

5) $4 + 0 = \underline{4}$

6) $2 + 3 = \underline{5}$

7) $1 + 1 = \underline{2}$

8) $5 + 0 = \underline{5}$

9) $2 - 2 = \underline{0}$

10) $5 - 1 = \underline{4}$

11) $3 - 1 = \underline{2}$

12) $4 - 1 = \underline{3}$

13) $4 - 3 = \underline{1}$

14) $3 - 2 = \underline{1}$

15) $4 - 4 = \underline{0}$

16) $5 - 4 = \underline{1}$

Risposte1. 52. 33. 34. 55. 46. 57. 28. 59. 010. 411. 212. 313. 114. 115. 016. 1



Risolvi ogni operazione.

1) $1 + 4 = \underline{\quad}$

2) $2 + 1 = \underline{\quad}$

3) $1 + 2 = \underline{\quad}$

4) $3 + 2 = \underline{\quad}$

5) $4 + 0 = \underline{\quad}$

6) $2 + 3 = \underline{\quad}$

7) $1 + 1 = \underline{\quad}$

8) $5 + 0 = \underline{\quad}$

9) $2 - 2 = \underline{\quad}$

10) $5 - 1 = \underline{\quad}$

11) $3 - 1 = \underline{\quad}$

12) $4 - 1 = \underline{\quad}$

13) $4 - 3 = \underline{\quad}$

14) $3 - 2 = \underline{\quad}$

15) $4 - 4 = \underline{\quad}$

16) $5 - 4 = \underline{\quad}$

Risposte

1. _____

2. _____

3. _____

4. _____

5. _____

6. _____

7. _____

8. _____

9. _____

10. _____

11. _____

12. _____

13. _____

14. _____

15. _____

16. _____