



Risolvi ogni operazione.

1) $3 + 0 = \underline{\quad}$

2) $5 + 0 = \underline{\quad}$

3) $1 + 0 = \underline{\quad}$

4) $1 + 3 = \underline{\quad}$

5) $2 + 1 = \underline{\quad}$

6) $1 + 1 = \underline{\quad}$

7) $1 + 2 = \underline{\quad}$

8) $1 + 4 = \underline{\quad}$

9) $2 - 2 = \underline{\quad}$

10) $5 - 3 = \underline{\quad}$

11) $1 - 1 = \underline{\quad}$

12) $2 - 1 = \underline{\quad}$

13) $3 - 1 = \underline{\quad}$

14) $3 - 3 = \underline{\quad}$

15) $4 - 3 = \underline{\quad}$

16) $5 - 4 = \underline{\quad}$

Risposte

1. _____

2. _____

3. _____

4. _____

5. _____

6. _____

7. _____

8. _____

9. _____

10. _____

11. _____

12. _____

13. _____

14. _____

15. _____

16. _____



Risolvi ogni operazione.

1) $3 + 0 = \underline{3}$

2) $5 + 0 = \underline{5}$

3) $1 + 0 = \underline{1}$

4) $1 + 3 = \underline{4}$

5) $2 + 1 = \underline{3}$

6) $1 + 1 = \underline{2}$

7) $1 + 2 = \underline{3}$

8) $1 + 4 = \underline{5}$

9) $2 - 2 = \underline{0}$

10) $5 - 3 = \underline{2}$

11) $1 - 1 = \underline{0}$

12) $2 - 1 = \underline{1}$

13) $3 - 1 = \underline{2}$

14) $3 - 3 = \underline{0}$

15) $4 - 3 = \underline{1}$


16) $5 - 4 = \underline{1}$

Risposte1. 32. 53. 14. 45. 36. 27. 38. 59. 010. 211. 012. 113. 214. 015. 116. 1




Risolvi ogni operazione.


1) $3 + 0 = \underline{\quad}$




2) $5 + 0 = \underline{\quad}$




3) $1 + 0 = \underline{\quad}$




4) $1 + 3 = \underline{\quad}$




5) $2 + 1 = \underline{\quad}$




6) $1 + 1 = \underline{\quad}$




7) $1 + 2 = \underline{\quad}$



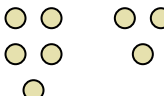
8) $1 + 4 = \underline{\quad}$




9) $2 - 2 = \underline{\quad}$




10) $5 - 3 = \underline{\quad}$




11) $1 - 1 = \underline{\quad}$



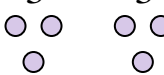
12) $2 - 1 = \underline{\quad}$



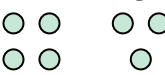
13) $3 - 1 = \underline{\quad}$



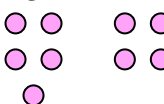
14) $3 - 3 = \underline{\quad}$



15) $4 - 3 = \underline{\quad}$



16) $5 - 4 = \underline{\quad}$



Risposte

1. _____

2. _____

3. _____

4. _____

5. _____

6. _____

7. _____

8. _____

9. _____

10. _____

11. _____

12. _____

13. _____

14. _____

15. _____

16. _____