



Risolvi ogni operazione.

1) $2 + 0 = \underline{\quad}$

2) $1 + 4 = \underline{\quad}$

3) $4 + 0 = \underline{\quad}$

4) $1 + 3 = \underline{\quad}$

5) $2 + 3 = \underline{\quad}$

6) $2 + 2 = \underline{\quad}$

7) $1 + 1 = \underline{\quad}$

8) $3 + 1 = \underline{\quad}$

9) $3 - 2 = \underline{\quad}$

10) $2 - 1 = \underline{\quad}$

11) $4 - 1 = \underline{\quad}$

12) $5 - 1 = \underline{\quad}$

13) $3 - 1 = \underline{\quad}$

14) $5 - 4 = \underline{\quad}$

15) $5 - 3 = \underline{\quad}$

16) $3 - 3 = \underline{\quad}$

Risposte

1. _____

2. _____

3. _____

4. _____

5. _____

6. _____

7. _____

8. _____

9. _____

10. _____

11. _____

12. _____

13. _____

14. _____

15. _____

16. _____



Risolvi ogni operazione.

1) $2 + 0 = \underline{2}$

2) $1 + 4 = \underline{5}$

3) $4 + 0 = \underline{4}$

4) $1 + 3 = \underline{4}$

5) $2 + 3 = \underline{5}$

6) $2 + 2 = \underline{4}$

7) $1 + 1 = \underline{2}$

8) $3 + 1 = \underline{4}$

9) $3 - 2 = \underline{1}$

10) $2 - 1 = \underline{1}$

11) $4 - 1 = \underline{3}$

12) $5 - 1 = \underline{4}$

13) $3 - 1 = \underline{2}$

14) $5 - 4 = \underline{1}$


15) $5 - 3 = \underline{2}$



16) $3 - 3 = \underline{0}$


Risposte1. 22. 53. 44. 45. 56. 47. 28. 49. 110. 111. 312. 413. 214. 115. 216. 0







Risolvi ogni operazione.



1) $2 + 0 = \underline{\quad}$




2) $1 + 4 = \underline{\quad}$
 



3) $4 + 0 = \underline{\quad}$



4) $1 + 3 = \underline{\quad}$
 

5) $2 + 3 = \underline{\quad}$
 


6) $2 + 2 = \underline{\quad}$
 


7) $1 + 1 = \underline{\quad}$
 


8) $3 + 1 = \underline{\quad}$
 


9) $3 - 2 = \underline{\quad}$



10) $2 - 1 = \underline{\quad}$
 


11) $4 - 1 = \underline{\quad}$


12) $5 - 1 = \underline{\quad}$


13) $3 - 1 = \underline{\quad}$


14) $5 - 4 = \underline{\quad}$


15) $5 - 3 = \underline{\quad}$


16) $3 - 3 = \underline{\quad}$


Risposte

1. _____

2. _____

3. _____

4. _____

5. _____

6. _____

7. _____

8. _____

9. _____

10. _____

11. _____

12. _____

13. _____

14. _____

15. _____

16. _____