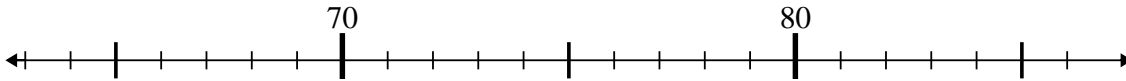




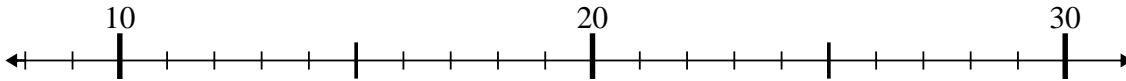
Usa la linea numerata per risolvere il problema.

Risposte

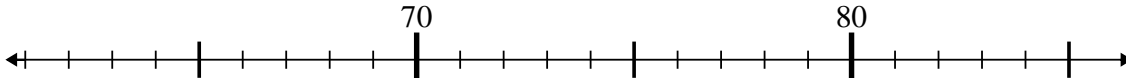
1) $67 + 11 = ?$



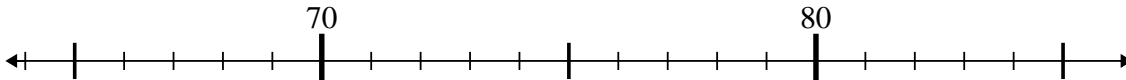
2) $21 - 1 = ?$



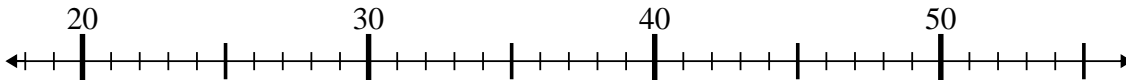
3) $74 + 0 = ?$



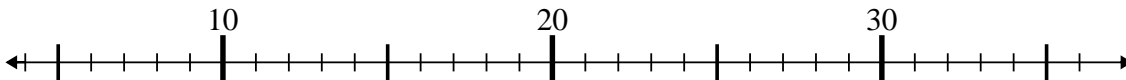
4) $82 - 1 = ?$



5) $25 - 1 = ?$



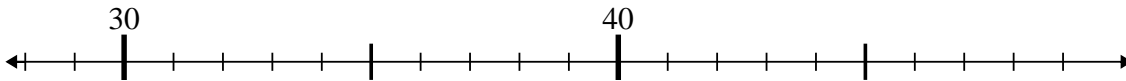
6) $16 - 10 = ?$



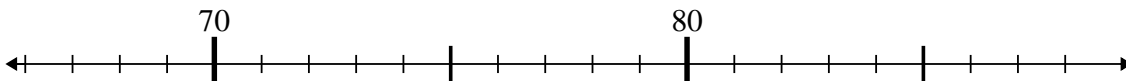
7) $44 - 16 = ?$



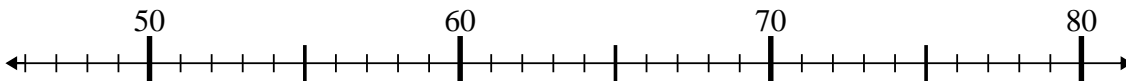
8) $45 - 7 = ?$



9) $69 + 2 = ?$



10) $69 - 10 = ?$



1. _____

2. _____

3. _____

4. _____

5. _____

6. _____

7. _____

8. _____

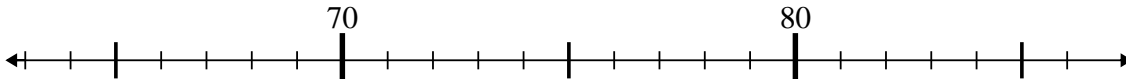
9. _____

10. _____

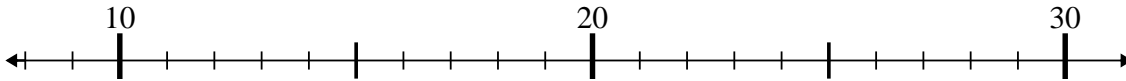


Usa la linea numerata per risolvere il problema.

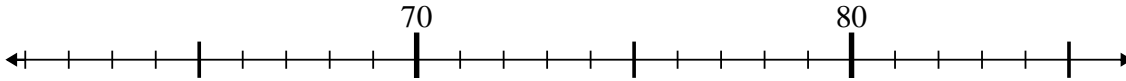
1) $67 + 11 = ?$



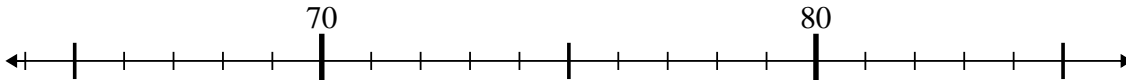
2) $21 - 1 = ?$



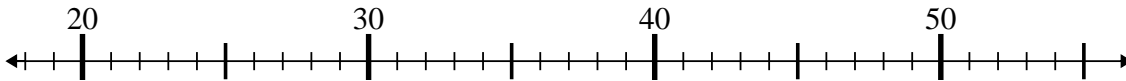
3) $74 + 0 = ?$



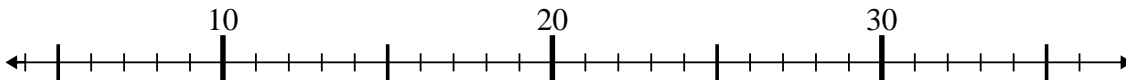
4) $82 - 1 = ?$



5) $25 - 1 = ?$



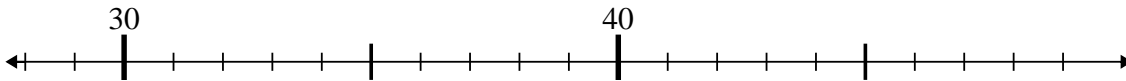
6) $16 - 10 = ?$



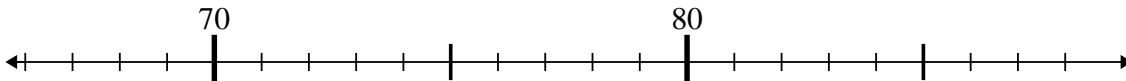
7) $44 - 16 = ?$



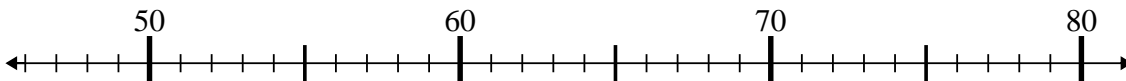
8) $45 - 7 = ?$



9) $69 + 2 = ?$



10) $69 - 10 = ?$



Risposte

1. 78
2. 20
3. 74
4. 81
5. 24
6. 6
7. 28
8. 38
9. 71
10. 59